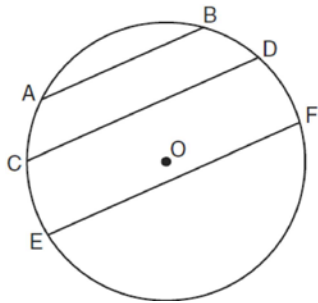


0610ge

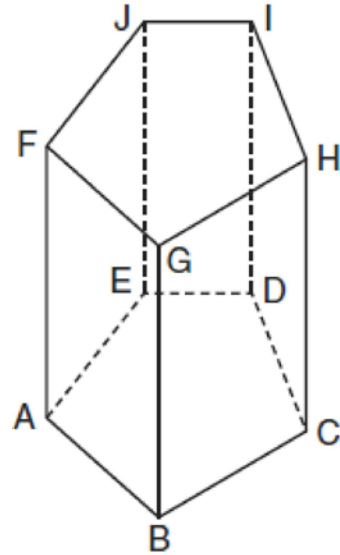
- 1 In the diagram below of circle  $O$ , chord  $\overline{AB} \parallel \overline{CD}$ , and chord  $\overline{CD} \parallel \overline{EF}$ .



Which statement must be true?

- 1)  $\widehat{CE} \cong \widehat{DF}$
  - 2)  $\widehat{AC} \cong \widehat{DF}$
  - 3)  $\widehat{AC} \cong \widehat{CE}$
  - 4)  $\widehat{EF} \cong \widehat{CD}$
- 2 What is the negation of the statement “I am not going to eat ice cream”?
- 1) I like ice cream.
  - 2) I am going to eat ice cream.
  - 3) If I eat ice cream, then I like ice cream.
  - 4) If I don’t like ice cream, then I don’t eat ice cream.

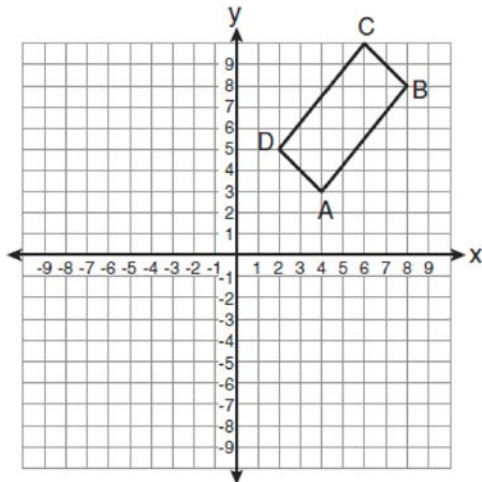
- 3 The diagram below shows a right pentagonal prism.



Which statement is always true?

- 1)  $\overline{BC} \parallel \overline{ED}$
  - 2)  $\overline{FG} \parallel \overline{CD}$
  - 3)  $\overline{FJ} \parallel \overline{IH}$
  - 4)  $\overline{GB} \parallel \overline{HC}$
- 4 In isosceles triangle  $ABC$ ,  $AB = BC$ . Which statement will always be true?
- 1)  $m\angle B = m\angle A$
  - 2)  $m\angle A > m\angle B$
  - 3)  $m\angle A = m\angle C$
  - 4)  $m\angle C < m\angle B$

- 5 The rectangle  $ABCD$  shown in the diagram below will be reflected across the  $x$ -axis.



What will *not* be preserved?

- 1) slope of  $\overline{AB}$
  - 2) parallelism of  $\overline{AB}$  and  $\overline{CD}$
  - 3) length of  $\overline{AB}$
  - 4) measure of  $\angle A$
- 6 A right circular cylinder has an altitude of 11 feet and a radius of 5 feet. What is the lateral area, in square feet, of the cylinder, to the *nearest tenth*?
- 1) 172.7
  - 2) 172.8
  - 3) 345.4
  - 4) 345.6
- 7 A transversal intersects two lines. Which condition would always make the two lines parallel?
- 1) Vertical angles are congruent.
  - 2) Alternate interior angles are congruent.
  - 3) Corresponding angles are supplementary.
  - 4) Same-side interior angles are complementary.

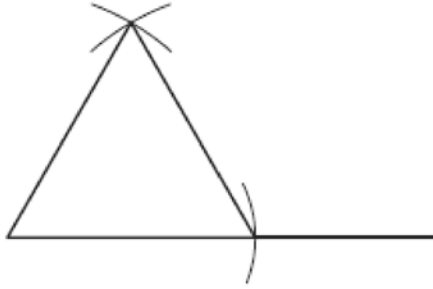
- 8 If the diagonals of a quadrilateral do *not* bisect each other, then the quadrilateral could be a
- 1) rectangle
  - 2) rhombus
  - 3) square
  - 4) trapezoid
- 9 What is the converse of the statement "If Bob does his homework, then George gets candy"?
- 1) If George gets candy, then Bob does his homework.
  - 2) Bob does his homework if and only if George gets candy.
  - 3) If George does not get candy, then Bob does not do his homework.
  - 4) If Bob does not do his homework, then George does not get candy.
- 10 In  $\triangle PQR$ ,  $PQ = 8$ ,  $QR = 12$ , and  $RP = 13$ . Which statement about the angles of  $\triangle PQR$  must be true?
- 1)  $m\angle Q > m\angle P > m\angle R$
  - 2)  $m\angle Q > m\angle R > m\angle P$
  - 3)  $m\angle R > m\angle P > m\angle Q$
  - 4)  $m\angle P > m\angle R > m\angle Q$
- 11 Given:  $y = \frac{1}{4}x - 3$

$$y = x^2 + 8x + 12$$

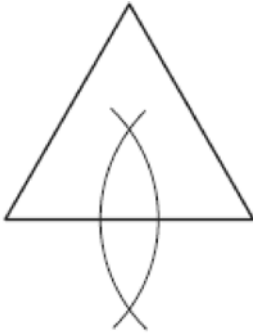
In which quadrant will the graphs of the given equations intersect?

- 1) I
- 2) II
- 3) III
- 4) IV

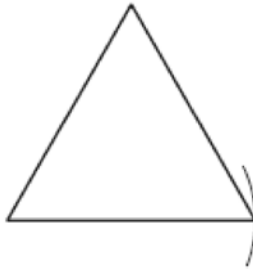
- 12 Which diagram shows the construction of an equilateral triangle?



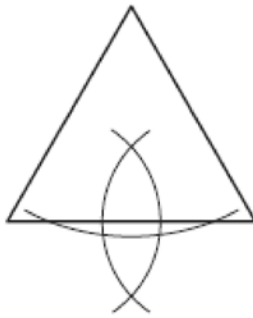
1)



2)



3)

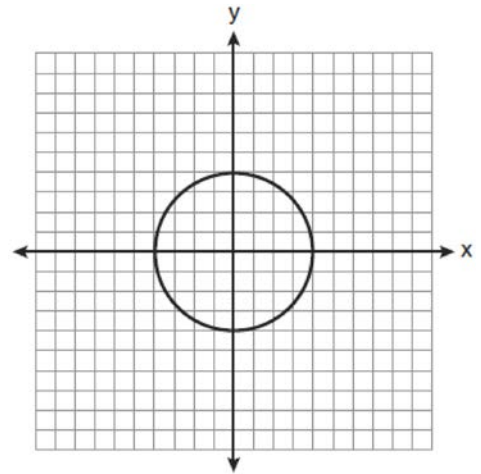


4)

- 13 Line segment  $AB$  is tangent to circle  $O$  at  $A$ . Which type of triangle is always formed when points  $A$ ,  $B$ , and  $O$  are connected?

- 1) right
- 2) obtuse
- 3) scalene
- 4) isosceles

- 14 What is an equation for the circle shown in the graph below?



- 1)  $x^2 + y^2 = 2$
- 2)  $x^2 + y^2 = 4$
- 3)  $x^2 + y^2 = 8$
- 4)  $x^2 + y^2 = 16$

- 15 Which transformation can map the letter **S** onto itself?

- 1) glide reflection
- 2) translation
- 3) line reflection
- 4) rotation

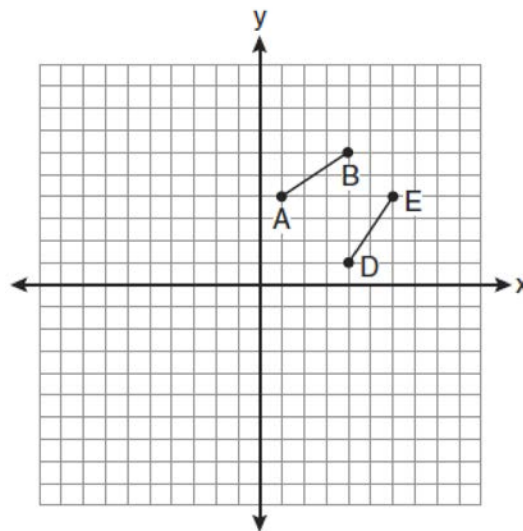
16 In isosceles trapezoid  $ABCD$ ,  $\overline{AB} \cong \overline{CD}$ . If  $BC = 20$ ,  $AD = 36$ , and  $AB = 17$ , what is the length of the altitude of the trapezoid?

- 1) 10
- 2) 12
- 3) 15
- 4) 16

17 In plane  $\mathcal{P}$ , lines  $m$  and  $n$  intersect at point  $A$ . If line  $k$  is perpendicular to line  $m$  and line  $n$  at point  $A$ , then line  $k$  is

- 1) contained in plane  $\mathcal{P}$
- 2) parallel to plane  $\mathcal{P}$
- 3) perpendicular to plane  $\mathcal{P}$
- 4) skew to plane  $\mathcal{P}$

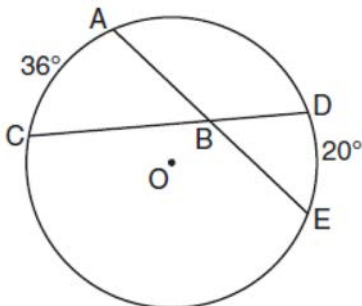
18 The diagram below shows  $\overline{AB}$  and  $\overline{DE}$ .



Which transformation will move  $\overline{AB}$  onto  $\overline{DE}$  such that point  $D$  is the image of point  $A$  and point  $E$  is the image of point  $B$ ?

- 1)  $T_{3,-3}$
- 2)  $D_{\frac{1}{2}}$
- 3)  $R_{90^\circ}$
- 4)  $r_{y=x}$

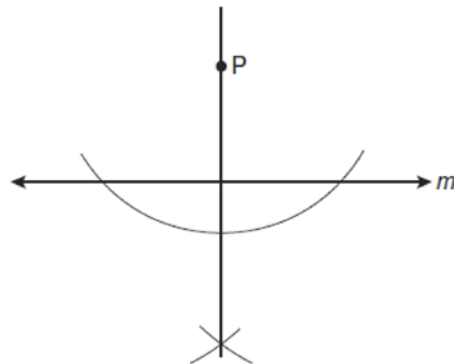
- 19 In the diagram below of circle  $O$ , chords  $\overline{AE}$  and  $\overline{DC}$  intersect at point  $B$ , such that  $m\widehat{AC} = 36$  and  $m\widehat{DE} = 20$ .



What is  $m\angle ABC$ ?

- 1) 56
- 2) 36
- 3) 28
- 4) 8

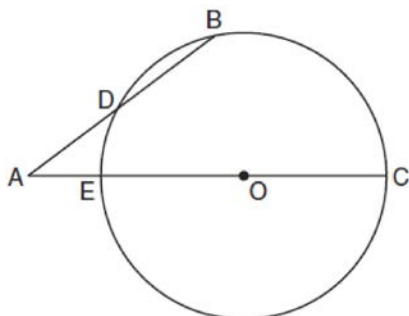
- 20 The diagram below shows the construction of a line through point  $P$  perpendicular to line  $m$ .



Which statement is demonstrated by this construction?

- 1) If a line is parallel to a line that is perpendicular to a third line, then the line is also perpendicular to the third line.
  - 2) The set of points equidistant from the endpoints of a line segment is the perpendicular bisector of the segment.
  - 3) Two lines are perpendicular if they are equidistant from a given point.
  - 4) Two lines are perpendicular if they intersect to form a vertical line.
- 21 What is the length, to the *nearest tenth*, of the line segment joining the points  $(-4, 2)$  and  $(146, 52)$ ?
- 1) 141.4
  - 2) 150.5
  - 3) 151.9
  - 4) 158.1
- 22 What is the slope of a line perpendicular to the line whose equation is  $y = 3x + 4$ ?
- 1)  $\frac{1}{3}$
  - 2)  $-\frac{1}{3}$
  - 3) 3
  - 4) -3

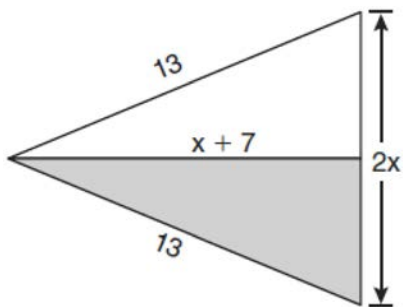
- 23 In the diagram below of circle  $O$ , secant  $\overline{AB}$  intersects circle  $O$  at  $D$ , secant  $\overline{AOC}$  intersects circle  $O$  at  $E$ ,  $AE = 4$ ,  $AB = 12$ , and  $DB = 6$ .



(Not drawn to scale)

What is the length of  $\overline{OC}$ ?

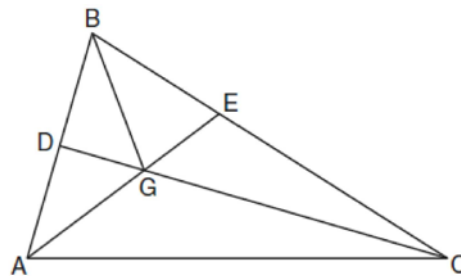
- 1) 4.5
  - 2) 7
  - 3) 9
  - 4) 14
- 24 The diagram below shows a pennant in the shape of an isosceles triangle. The equal sides each measure 13, the altitude is  $x + 7$ , and the base is  $2x$ .



What is the length of the base?

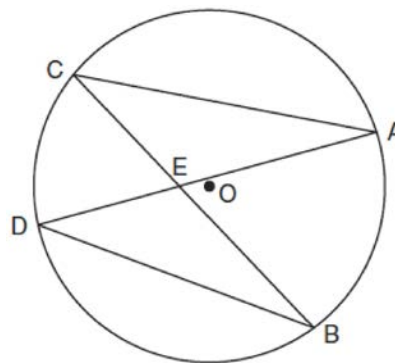
- 1) 5
- 2) 10
- 3) 12
- 4) 24

- 25 In the diagram below of  $\triangle ABC$ ,  $\overline{CD}$  is the bisector of  $\angle BCA$ ,  $\overline{AE}$  is the bisector of  $\angle CAB$ , and  $\overline{BG}$  is drawn.



Which statement must be true?

- 1)  $DG = EG$
  - 2)  $AG = BG$
  - 3)  $\angle AEB \cong \angle AEC$
  - 4)  $\angle DBG \cong \angle EBG$
- 26 In the diagram below of circle  $O$ , chords  $\overline{AD}$  and  $\overline{BC}$  intersect at  $E$ .



Which relationship must be true?

- 1)  $\triangle CAE \cong \triangle DBE$
- 2)  $\triangle AEC \sim \triangle BED$
- 3)  $\angle ACB \cong \angle CBD$
- 4)  $\widehat{CA} \cong \widehat{DB}$

- 27 Two lines are represented by the equations  $-\frac{1}{2}y = 6x + 10$  and  $y = mx$ . For which value of  $m$  will the lines be parallel?

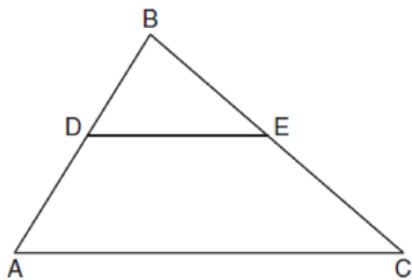
- 1)  $-12$
- 2)  $-3$
- 3)  $3$
- 4)  $12$

- 28 The coordinates of the vertices of parallelogram  $ABCD$  are  $A(-3, 2)$ ,  $B(-2, -1)$ ,  $C(4, 1)$ , and  $D(3, 4)$ . The slopes of which line segments could be calculated to show that  $ABCD$  is a rectangle?

- 1)  $\overline{AB}$  and  $\overline{DC}$
- 2)  $\overline{AB}$  and  $\overline{BC}$
- 3)  $\overline{AD}$  and  $\overline{BC}$
- 4)  $\overline{AC}$  and  $\overline{BD}$

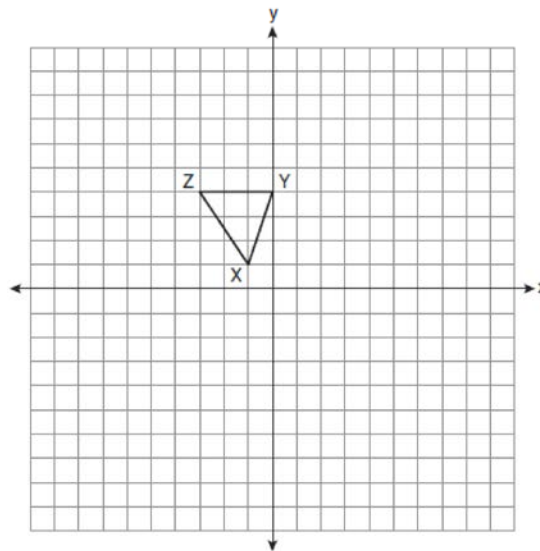
- 29 Tim is going to paint a wooden sphere that has a diameter of 12 inches. Find the surface area of the sphere, to the nearest square inch.

- 30 In the diagram below of  $\triangle ABC$ ,  $\overline{DE}$  is a midsegment of  $\triangle ABC$ ,  $DE = 7$ ,  $AB = 10$ , and  $BC = 13$ . Find the perimeter of  $\triangle ABC$ .

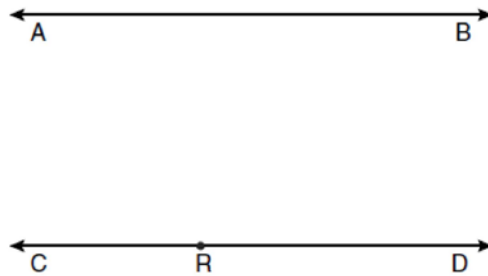


- 31 In right  $\triangle DEF$ ,  $m\angle D = 90$  and  $m\angle F$  is 12 degrees less than twice  $m\angle E$ . Find  $m\angle E$ .

- 32 Triangle  $XYZ$ , shown in the diagram below, is reflected over the line  $x = 2$ . State the coordinates of  $\triangle X'Y'Z'$ , the image of  $\triangle XYZ$ .



- 33 Two lines,  $\overleftrightarrow{AB}$  and  $\overleftrightarrow{CD}$ , are parallel and 10 inches apart. Sketch the locus of all points that are equidistant from  $\overleftrightarrow{AB}$  and  $\overleftrightarrow{CD}$  and 7 inches from point  $R$ . Label with an **X** each point that satisfies both conditions.



Geometry Regents Exam 0610


[www.jmap.org](http://www.jmap.org)

34 The base of a pyramid is a rectangle with a width of 6 cm and a length of 8 cm. Find, in centimeters, the height of the pyramid if the volume is  $288 \text{ cm}^3$ .

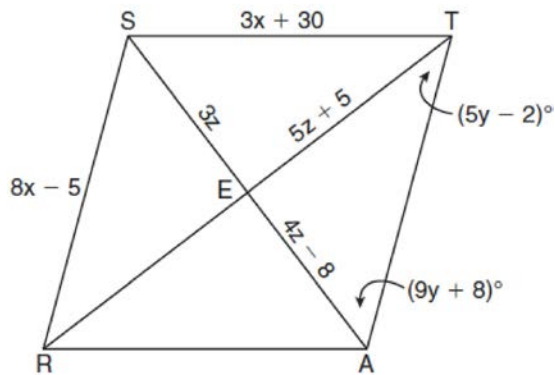
35 Given: Quadrilateral  $ABCD$  with  $\overline{AB} \cong \overline{CD}$ ,  $\overline{AD} \cong \overline{BC}$ , and diagonal  $\overline{BD}$  is drawn  
 Prove:  $\angle BDC \cong \angle ABD$

36 Find an equation of the line passing through the point  $(6, 5)$  and perpendicular to the line whose equation is  $2y + 3x = 6$ .

37 Write an equation of the circle whose diameter  $\overline{AB}$  has endpoints  $A(-4, 2)$  and  $B(4, -4)$ . [The use of the grid below is optional.]



38 In the diagram below, quadrilateral  $STAR$  is a rhombus with diagonals  $\overline{SA}$  and  $\overline{TR}$  intersecting at  $E$ .  $ST = 3x + 30$ ,  $SR = 8x - 5$ ,  $SE = 3z$ ,  $TE = 5z + 5$ ,  $AE = 4z - 8$ ,  $m\angle RTA = 5y - 2$ , and  $m\angle TAS = 9y + 8$ . Find  $SR$ ,  $RT$ , and  $m\angle TAS$ .





## 0610ge Answer Section

1 ANS: 1

Parallel lines intercept congruent arcs.

PTS: 2

REF: 061001ge

STA: G.G.52

TOP: Chords

2 ANS: 2

PTS: 2

REF: 061002ge

STA: G.G.24

TOP: Negations

3 ANS: 4

PTS: 2

REF: 061003ge

STA: G.G.10

TOP: Solids

4 ANS: 3

PTS: 2

REF: 061004ge

STA: G.G.31

TOP: Isosceles Triangle Theorem

5 ANS: 1

PTS: 2

REF: 061005ge

STA: G.G.55

TOP: Properties of Transformations

6 ANS: 4

$$L = 2\pi rh = 2\pi \cdot 5 \cdot 11 \approx 345.6$$

PTS: 2

REF: 061006ge

STA: G.G.14

TOP: Volume and Lateral Area

7 ANS: 2

PTS: 2

REF: 061007ge

STA: G.G.35

TOP: Parallel Lines and Transversals

8 ANS: 4

PTS: 2

REF: 061008ge

STA: G.G.40

TOP: Trapezoids

9 ANS: 1

PTS: 2

REF: 061009ge

STA: G.G.26

TOP: Converse

10 ANS: 1

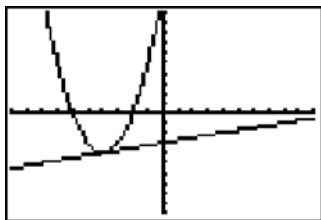
PTS: 2

REF: 061010ge

STA: G.G.34

TOP: Angle Side Relationship

11 ANS: 3



PTS: 2

REF: 061011ge

STA: G.G.70

TOP: Quadratic-Linear Systems

12 ANS: 1

PTS: 2

REF: 061012ge

STA: G.G.20

TOP: Constructions

13 ANS: 1

PTS: 2

REF: 061013ge

STA: G.G.50

TOP: Tangents KEY: point of tangency

14 ANS: 4

The radius is 4.  $r^2 = 16$ .

PTS: 2

REF: 061014ge

STA: G.G.72

TOP: Equations of Circles

15 ANS: 4

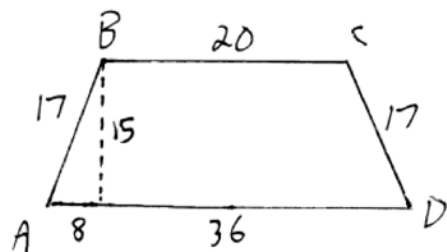
PTS: 2

REF: 061015ge

STA: G.G.56

TOP: Identifying Transformations

16 ANS: 3



$$\frac{36-20}{2} = 8. \quad \sqrt{17^2 - 8^2} = 15$$

PTS: 2 REF: 061016ge STA: G.G.40 TOP: Trapezoids

17 ANS: 3 PTS: 2 REF: 061017ge STA: G.G.1

TOP: Planes

18 ANS: 4 PTS: 2 REF: 061018ge STA: G.G.56

TOP: Identifying Transformations

19 ANS: 3

$$\frac{36+20}{2} = 28$$

PTS: 2 REF: 061019ge STA: G.G.51 TOP: Arcs Determined by Angles

KEY: inside circle

20 ANS: 2 PTS: 2 REF: 061020ge STA: G.G.19

TOP: Constructions

21 ANS: 4

$$d = \sqrt{(146 - (-4))^2 + (52 - 2)^2} = \sqrt{25,000} \approx 158.1$$

PTS: 2 REF: 061021ge STA: G.G.67 TOP: Distance

22 ANS: 2 PTS: 2 REF: 061022ge STA: G.G.62

TOP: Parallel and Perpendicular Lines

23 ANS: 2

$$(d+4)4 = 12(6)$$

$$4d + 16 = 72$$

$$d = 14$$

$$r = 7$$

PTS: 2 REF: 061023ge STA: G.G.53 TOP: Segments Intercepted by Circle

KEY: two secants

24 ANS: 2

$$x^2 + (x + 7)^2 = 13^2$$

$$x^2 + x^2 + 7x + 7x + 49 = 169$$

$$2x^2 + 14x - 120 = 0$$

$$x^2 + 7x - 60 = 0$$

$$(x + 12)(x - 5) = 0$$

$$x = 5$$

$$2x = 10$$

PTS: 2 REF: 061024ge STA: G.G.48 TOP: Pythagorean Theorem

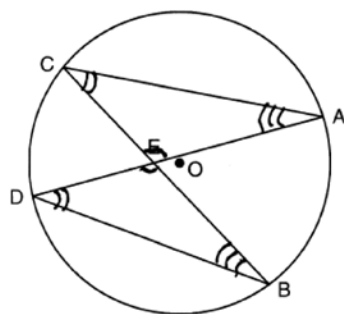
25 ANS: 4

$\overline{BG}$  is also an angle bisector since it intersects the concurrence of  $\overline{CD}$  and  $\overline{AE}$

PTS: 2 REF: 061025ge STA: G.G.21

KEY: Centroid, Orthocenter, Incenter and Circumcenter

26 ANS: 2



PTS: 2 REF: 061026ge STA: G.G.51 TOP: Arcs Determined by Angles

KEY: inscribed

27 ANS: 1

$$-2\left(-\frac{1}{2}y = 6x + 10\right)$$

$$y = -12x - 20$$

PTS: 2 REF: 061027ge STA: G.G.63 TOP: Parallel and Perpendicular Lines

28 ANS: 2

Adjacent sides of a rectangle are perpendicular and have opposite and reciprocal slopes.

PTS: 2 REF: 061028ge STA: G.G.69 TOP: Quadrilaterals in the Coordinate Plane

29 ANS:

$$452. SA = 4\pi r^2 = 4\pi \cdot 6^2 = 144\pi \approx 452$$

PTS: 2 REF: 061029ge STA: G.G.16 TOP: Volume and Surface Area

30 ANS:

37. Since  $\overline{DE}$  is a midsegment,  $AC = 14$ .  $10 + 13 + 14 = 37$

PTS: 2

REF: 061030ge

STA: G.G.42

TOP: Midsegments

31 ANS:

$$34. 2x - 12 + x + 90 = 180$$

$$3x + 78 = 90$$

$$3x = 102$$

$$x = 34$$

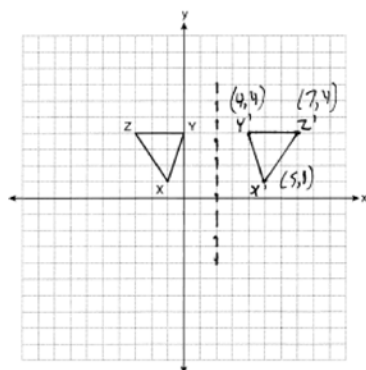
PTS: 2

REF: 061031ge

STA: G.G.30

TOP: Interior and Exterior Angles of Triangles

32 ANS:



PTS: 2

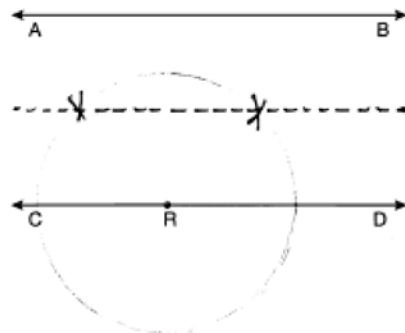
REF: 061032ge

STA: G.G.54

TOP: Reflections

KEY: grids

33 ANS:



PTS: 2

REF: 061033ge

STA: G.G.22

TOP: Locus

34 ANS:

$$18. \quad V = \frac{1}{3} Bh = \frac{1}{3} lwh$$

$$288 = \frac{1}{3} \cdot 8 \cdot 6 \cdot h$$

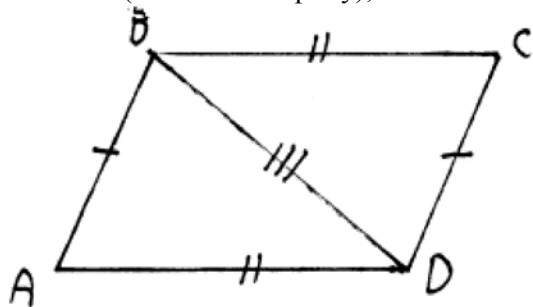
$$288 = 16h$$

$$18 = h$$

PTS: 2 REF: 061034ge STA: G.G.13 TOP: Volume

35 ANS:         

$\overline{BD} \cong \overline{DB}$  (Reflexive Property);  $\triangle ABD \cong \triangle CDB$  (SSS);  $\angle BDC \cong \angle ABD$  (CPCTC).



PTS: 4 REF: 061035ge STA: G.G.27 TOP: Quadrilateral Proofs

36 ANS:

$$y = \frac{2}{3}x + 1. \quad 2y + 3x = 6 \quad . \quad y = mx + b$$

$$2y = -3x + 6 \quad 5 = \frac{2}{3}(6) + b$$

$$y = -\frac{3}{2}x + 3 \quad 5 = 4 + b$$

$$m = -\frac{3}{2} \quad 1 = b$$

$$m_{\perp} = \frac{2}{3} \quad y = \frac{2}{3}x + 1$$

PTS: 4 REF: 061036ge STA: G.G.64 TOP: Parallel and Perpendicular Lines

37 ANS:

$$\text{Midpoint: } \left( \frac{-4+4}{2}, \frac{2+(-4)}{2} \right) = (0, -1). \text{ Distance: } d = \sqrt{(-4-4)^2 + (2-(-4))^2} = \sqrt{100} = 10$$

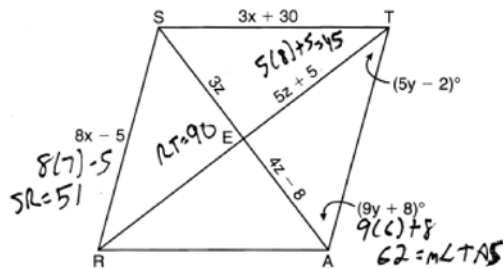
$$r = 5$$

$$r^2 = 25$$

$$x^2 + (y+1)^2 = 25$$

PTS: 4 REF: 061037ge STA: G.G.71 TOP: Equations of Circles

38 ANS:



$$8x - 5 = 3x + 30. \quad 4z - 8 = 3z. \quad 9y + 8 + 5y - 2 = 90.$$

$$5x = 35 \qquad z = 8 \qquad 14y + 6 = 90$$

$$x = 7 \qquad \qquad \qquad 14y = 84$$

$$y = 6$$

PTS: 6

REF: 061038ge

STA: G.G.39

TOP: Special Parallelograms