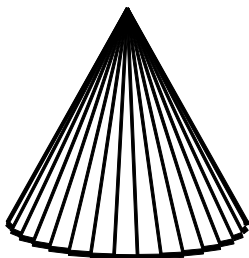
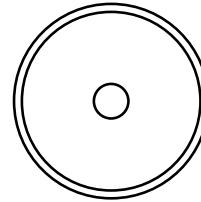


1. Name the geometric solid suggested by a filing cabinet.
 [A] cube [B] pentagonal prism
 [C] cylinder [D] rectangular prism
2. Name the geometric solid suggested by a brick.
 [A] pentagonal prism [B] cylinder
 [C] sphere [D] rectangular prism
3. Name the geometric solid suggested by a die.
 [A] sphere [B] cube
 [C] cylinder [D] rectangular prism
4. Name the geometric solid suggested by a globe.
 [A] cylinder [B] pentagonal prism
 [C] sphere [D] rectangular prism
5. Name the geometric solid suggested by a pen.
 [A] rectangular prism [B] cylinder
 [C] sphere [D] cube
6. Name the geometric solid suggested by a house.
 [A] rectangular prism
 [B] pentagonal prism
 [C] cube [D] cylinder
7. The party hat has the shape of a ____.




- [A] cylinder [B] circle
 [C] sphere [D] cone

8. The CD has the shape of a ____.



- [A] circle [B] sphere
 [C] cylinder [D] cone

9. The drinking glass has the shape of a ____.



- [A] sphere [B] circle
 [C] cone [D] cylinder

10. The chart below lists several familiar items. Complete the chart to show the various three-dimensional figures that describe each item. The first one has been done for you. When the chart is complete, draw and label a diagram to represent each item.

Item	3- D Figure
can of cat food	cylinder
cereal box	
piece of pie	
book	
teepee	
basketball	
drum	
beach ball	

Geometry Practice G.MG.A.1: Solids 1

www.jmap.org

[1] D

[2] D

[3] B

[4] C

[5] B

[6] B

[7] D

[8] A

[9] D

By column: rectangular prism; triangular prism; rectangular prism; cone; sphere; cylinder; sphere. Check diagrams for

[10] accuracy.