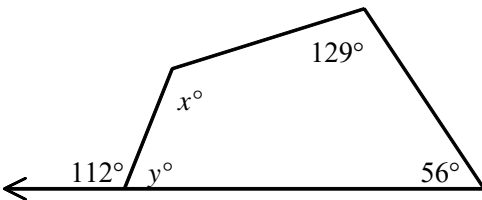


NAME: _____

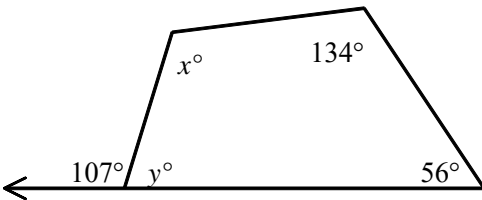
1. Find the sum of the measures of the interior angles of an octagon.

2. Find the sum of the measures of the interior angles of a pentagon.

3. Find x and y .



4. Find x and y .



5. Find $m\angle A$.

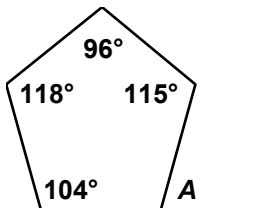
[A] 104°

[B] 108

[C] 117

[D] 73

[E] 72



[1] 1080° _____

[2] 540° _____

[3] $x = 107, y = 68$ _____

[4] $x = 97, y = 73$ _____

[5] D _____