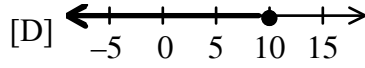
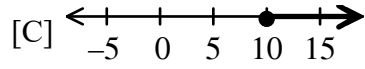
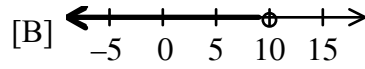
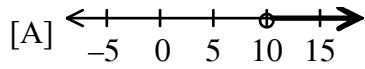
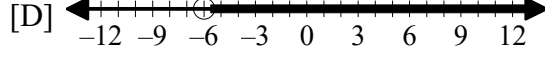
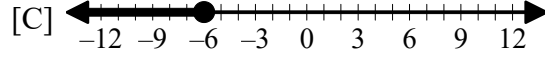
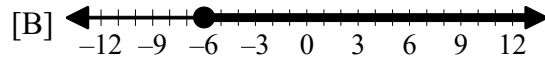
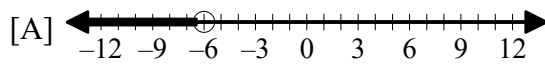


1. Which graph shows the solution to $x + 2 < 12$?


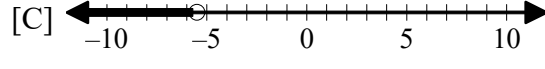
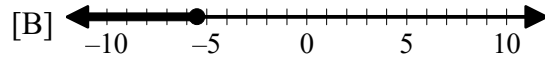
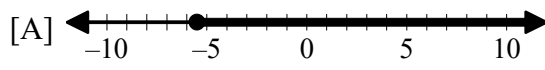


2. Which graph shows the solution of $x + 6 > 0$?

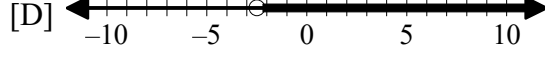
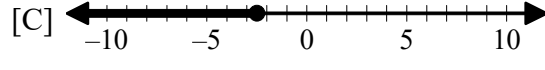
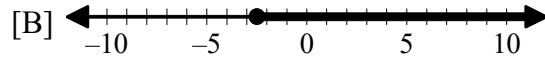
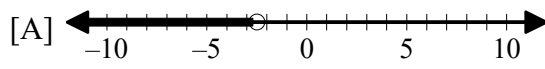


Graph:

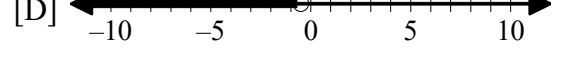
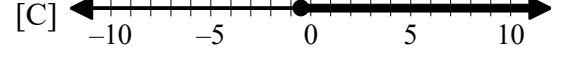
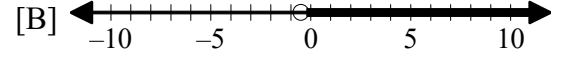
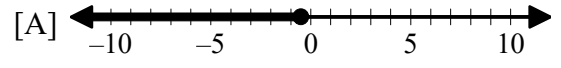
3. $5x + 5 > 3(x - 2)$





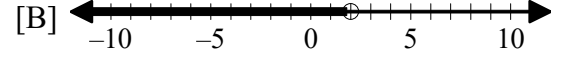
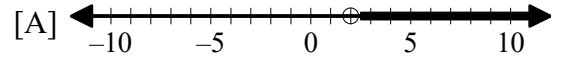
4. $5x - 1 < 3(x - 2)$





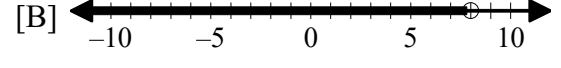

5. $5x - 2 > 3(x - 1)$





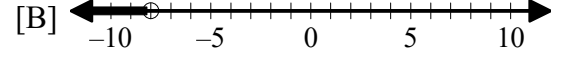

6. $x < 2$ or $x \leq -5$



7. $x > 8$ or $x \geq -4$

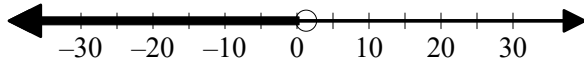


8. $x < -8$ or $x \leq -4$

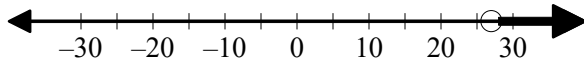


9. Solve the inequality and graph the solution on a number line. $\frac{2}{9}x > 6$

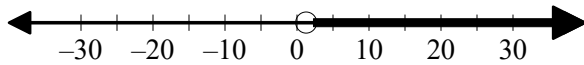
[A] $x < 1.3$



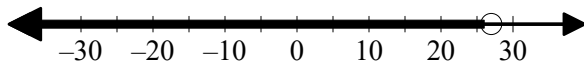
[B] $x > 27$



[C] $x > 1.3$

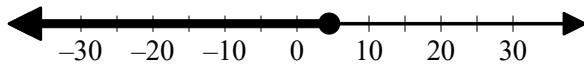


[D] $x < 27$

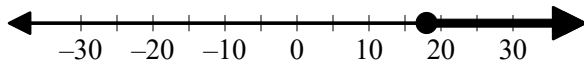


10. Solve the inequality and graph the solution on a number line. $\frac{1}{2}x \leq 9$

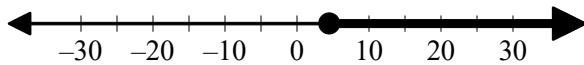
[A] $x \leq 4.5$



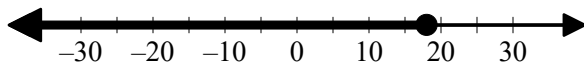
[B] $x \geq 18$



[C] $x \geq 4.5$



[D] $x \leq 18$



Algebra I Practice A.REI.B.3: Solving Linear Inequalities 1

www.jmap.org

[1] B

[2] D

[3] D

[4] A

[5] B

[6] B

[7] A

[8] C

[9] B

[10] D