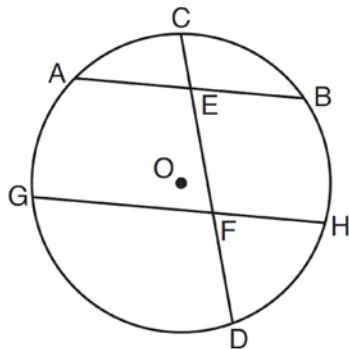


0812ge

- 1 In the diagram below of circle O , chord \overline{AB} is parallel to chord \overline{GH} . Chord \overline{CD} intersects \overline{AB} at E and \overline{GH} at F .



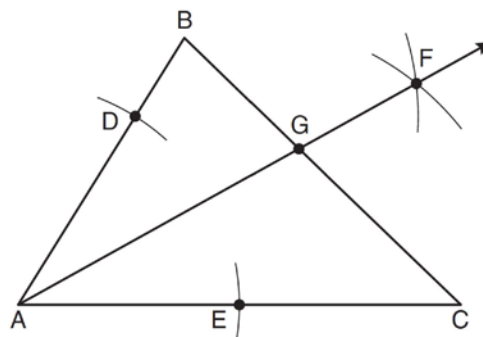
Which statement must always be true?

- 1) $\overline{AC} \cong \overline{CB}$
 - 2) $\overline{DH} \cong \overline{BH}$
 - 3) $\overline{AB} \cong \overline{GH}$
 - 4) $\overline{AG} \cong \overline{BH}$
- 2 The vertices of parallelogram $ABCD$ are $A(2, 0)$, $B(0, -3)$, $C(3, -3)$, and $D(5, 0)$. If $ABCD$ is reflected over the x -axis, how many vertices remain invariant?
- 1) 1
 - 2) 2
 - 3) 3
 - 4) 0
- 3 Point M is the midpoint of \overline{AB} . If the coordinates of A are $(-3, 6)$ and the coordinates of M are $(-5, 2)$, what are the coordinates of B ?
- 1) $(1, 2)$
 - 2) $(7, 10)$
 - 3) $(-4, 4)$
 - 4) $(-7, -2)$

- 4 When a dilation is performed on a hexagon, which property of the hexagon will *not* be preserved in its image?

- 1) parallelism
- 2) orientation
- 3) length of sides
- 4) measure of angles

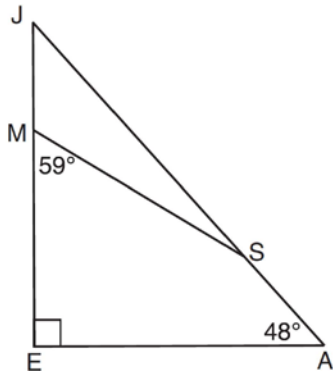
- 5 As shown in the diagram below of $\triangle ABC$, a compass is used to find points D and E , equidistant from point A . Next, the compass is used to find point F , equidistant from points D and E . Finally, a straightedge is used to draw \overrightarrow{AF} . Then, point G , the intersection of \overrightarrow{AF} and side \overline{BC} of $\triangle ABC$, is labeled.



Which statement must be true?

- 1) \overrightarrow{AF} bisects side \overline{BC}
- 2) \overrightarrow{AF} bisects $\angle BAC$
- 3) $\overrightarrow{AF} \perp \overline{BC}$
- 4) $\triangle ABG \sim \triangle ACG$

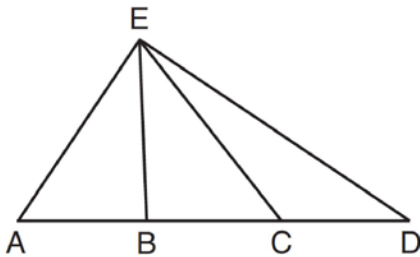
- 6 In the diagram of $\triangle JEA$ below, $m\angle JEA = 90$ and $m\angle EAJ = 48$. Line segment MS connects points M and S on the triangle, such that $m\angle EMS = 59$.



What is $m\angle JSM$?

- 1) 163
- 2) 121
- 3) 42
- 4) 17

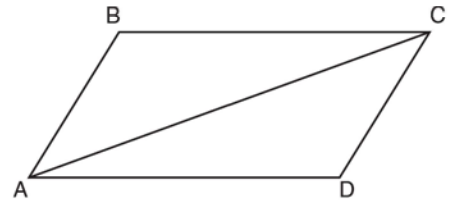
- 7 In $\triangle AED$ with \overline{ABCD} shown in the diagram below, \overline{EB} and \overline{EC} are drawn.



If $\overline{AB} \cong \overline{CD}$, which statement could always be proven?

- 1) $\overline{AC} \cong \overline{DB}$
- 2) $\overline{AE} \cong \overline{ED}$
- 3) $\overline{AB} \cong \overline{BC}$
- 4) $\overline{EC} \cong \overline{EA}$

- 8 Given that $ABCD$ is a parallelogram, a student wrote the proof below to show that a pair of its opposite angles are congruent.

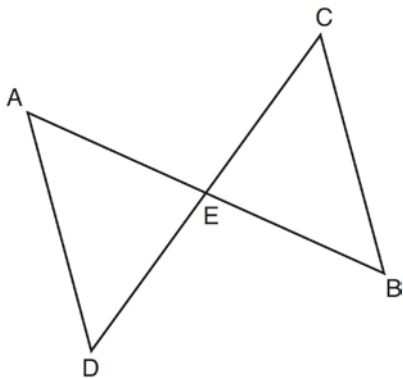


Statement	Reason
1. $ABCD$ is a parallelogram.	1. Given
2. $\overline{BC} \cong \overline{AD}$ $\overline{AB} \cong \overline{DC}$	2. Opposite sides of a parallelogram are congruent.
3. $\overline{AC} \cong \overline{CA}$	3. Reflexive Postulate of Congruency
4. $\triangle ABC \cong \triangle CDA$	4. Side-Side-Side
5. $\angle B \cong \angle D$	5. _____

What is the reason justifying that $\angle B \cong \angle D$?

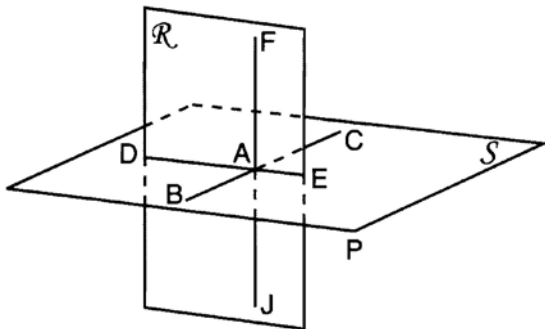
- 1) Opposite angles in a quadrilateral are congruent.
 - 2) Parallel lines have congruent corresponding angles.
 - 3) Corresponding parts of congruent triangles are congruent.
 - 4) Alternate interior angles in congruent triangles are congruent.
- 9 The equation of a circle with its center at $(-3, 5)$ and a radius of 4 is
- 1) $(x + 3)^2 + (y - 5)^2 = 4$
 - 2) $(x - 3)^2 + (y + 5)^2 = 4$
 - 3) $(x + 3)^2 + (y - 5)^2 = 16$
 - 4) $(x - 3)^2 + (y + 5)^2 = 16$

- 10 In the diagram below of $\triangle DAE$ and $\triangle BCE$, \overline{AB} and \overline{CD} intersect at E , such that $\overline{AE} \cong \overline{CE}$ and $\angle BCE \cong \angle DAE$.



Triangle DAE can be proved congruent to triangle BCE by

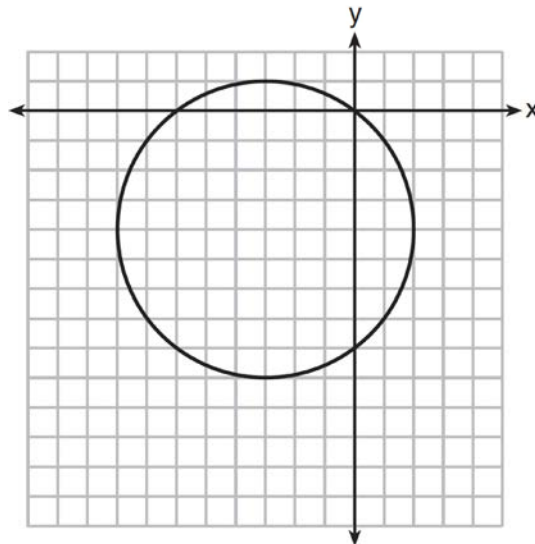
- 1) ASA
 - 2) SAS
 - 3) SSS
 - 4) HL
- 11 As shown in the diagram below, \overline{FJ} is contained in plane \mathcal{R} , \overline{BC} and \overline{DE} are contained in plane \mathcal{S} , and \overline{FJ} , \overline{BC} , and \overline{DE} intersect at A .



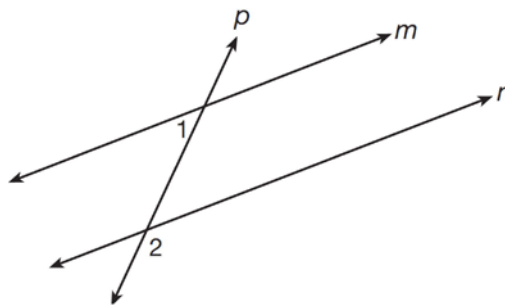
Which fact is sufficient to show that planes \mathcal{R} and \mathcal{S} are perpendicular?

- 1) $\overline{FA} \perp \overline{DE}$
- 2) $\overline{AD} \perp \overline{AF}$
- 3) $\overline{BC} \perp \overline{FJ}$
- 4) $\overline{DE} \perp \overline{BC}$

- 12 What is an equation of the circle shown in the graph below?



- 1) $(x - 3)^2 + (y - 4)^2 = 25$
 - 2) $(x + 3)^2 + (y + 4)^2 = 25$
 - 3) $(x - 3)^2 + (y - 4)^2 = 10$
 - 4) $(x + 3)^2 + (y + 4)^2 = 10$
- 13 As shown in the diagram below, lines m and n are cut by transversal p .

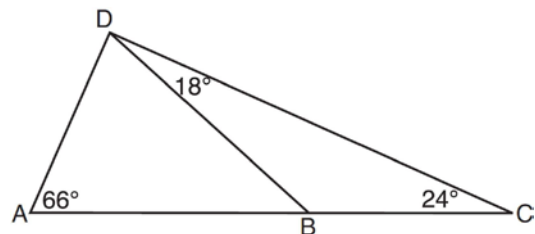


If $m\angle 1 = 4x + 14$ and $m\angle 2 = 8x + 10$, lines m and n are parallel when x equals

- 1) 1
- 2) 6
- 3) 13
- 4) 17

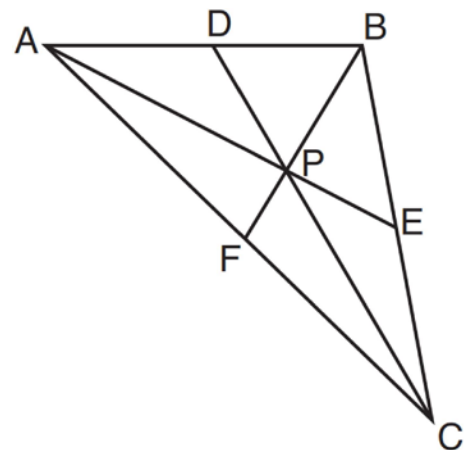
- 14 The angle formed by the radius of a circle and a tangent to that circle has a measure of
- 1) 45°
 - 2) 90°
 - 3) 135°
 - 4) 180°
- 15 A sphere is inscribed inside a cube with edges of 6 cm. In cubic centimeters, what is the volume of the sphere, in terms of π ?
- 1) 12π
 - 2) 36π
 - 3) 48π
 - 4) 288π
- 16 Scalene triangle ABC is similar to triangle DEF . Which statement is *false*?
- 1) $\overline{AB}:BC=DE:EF$
 - 2) $\overline{AC}:DF=BC:EF$
 - 3) $\angle ACB \cong \angle DFE$
 - 4) $\angle ABC \cong \angle EDF$
- 17 Which equation represents a line that is parallel to the line whose equation is $y = \frac{3}{2}x - 3$ and passes through the point $(1, 2)$?
- 1) $y = \frac{3}{2}x + \frac{1}{2}$
 - 2) $y = \frac{2}{3}x + \frac{4}{3}$
 - 3) $y = \frac{3}{2}x - 2$
 - 4) $y = -\frac{2}{3}x + \frac{8}{3}$
- 18 Lines a and b intersect at point P . Line c passes through P and is perpendicular to the plane containing lines a and b . Which statement must be true?
- 1) Lines a , b , and c are coplanar.
 - 2) Line a is perpendicular to line b .
 - 3) Line c is perpendicular to both line a and line b .
 - 4) Line c is perpendicular to line a or line b , but not both.

- 19 As shown in the diagram of $\triangle ACD$ below, B is a point on \overline{AC} and \overline{DB} is drawn.



If $m\angle A = 66$, $m\angle CDB = 18$, and $m\angle C = 24$, what is the longest side of $\triangle ABD$?

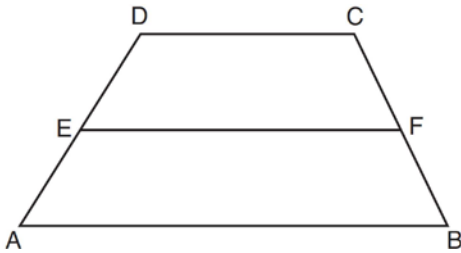
- 1) \overline{AB}
 - 2) \overline{DC}
 - 3) \overline{AD}
 - 4) \overline{BD}
- 20 In $\triangle ABC$ shown below, P is the centroid and $BF = 18$.



What is the length of \overline{BP} ?

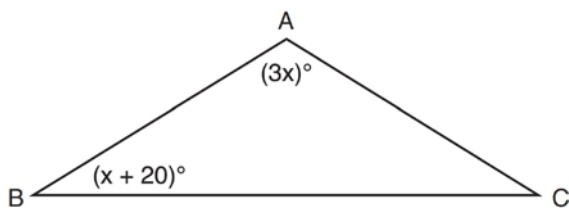
- 1) 6
- 2) 9
- 3) 3
- 4) 12

- 21 In the diagram below, \overline{EF} is the median of trapezoid $ABCD$.



If $AB = 5x - 9$, $DC = x + 3$, and $EF = 2x + 2$, what is the value of x ?

- 1) 5
 - 2) 2
 - 3) 7
 - 4) 8
- 22 In the diagram below of $\triangle ABC$, $\overline{AB} \cong \overline{AC}$, $m\angle A = 3x$, and $m\angle B = x + 20$.



What is the value of x ?

- 1) 10
 - 2) 28
 - 3) 32
 - 4) 40
- 23 For which polygon does the sum of the measures of the interior angles equal the sum of the measures of the exterior angles?
- 1) hexagon
 - 2) pentagon
 - 3) quadrilateral
 - 4) triangle
- 24 For a triangle, which two points of concurrence could be located outside the triangle?
- 1) incenter and centroid
 - 2) centroid and orthocenter
 - 3) incenter and circumcenter
 - 4) circumcenter and orthocenter

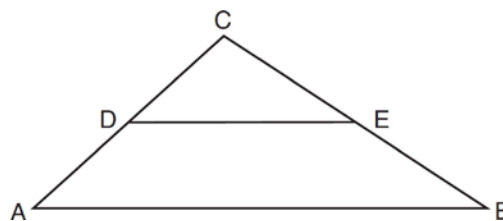
- 25 The slope of line ℓ is $-\frac{1}{3}$. What is an equation of a line that is perpendicular to line ℓ ?

- 1) $y + 2 = \frac{1}{3}x$
- 2) $-2x + 6 = 6y$
- 3) $9x - 3y = 27$
- 4) $3x + y = 0$

- 26 Which type of triangle can be drawn using the points $(-2, 3)$, $(-2, -7)$, and $(4, -5)$?

- 1) scalene
- 2) isosceles
- 3) equilateral
- 4) no triangle can be drawn

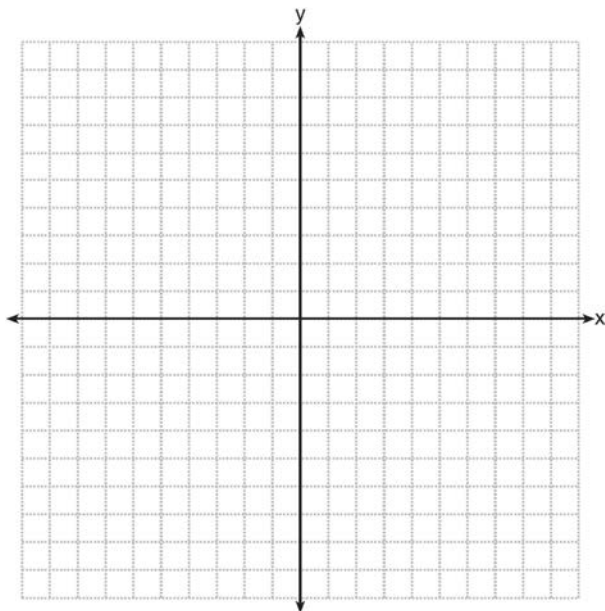
- 27 In the diagram below, \overline{DE} joins the midpoints of two sides of $\triangle ABC$.



Which statement is *not* true?

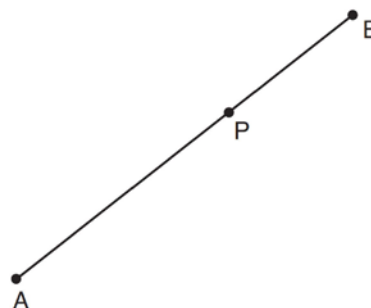
- 1) $CE = \frac{1}{2}CB$
 - 2) $DE = \frac{1}{2}AB$
 - 3) area of $\triangle CDE = \frac{1}{2}$ area of $\triangle CAB$
 - 4) perimeter of $\triangle CDE = \frac{1}{2}$ perimeter of $\triangle CAB$
- 28 Which equation represents the line that is perpendicular to $2y = x + 2$ and passes through the point $(4, 3)$?
- 1) $y = \frac{1}{2}x - 5$
 - 2) $y = \frac{1}{2}x + 1$
 - 3) $y = -2x + 11$
 - 4) $y = -2x - 5$

- 29 Write the negation of the statement “2 is a prime number,” and determine the truth value of the negation.
- 30 The coordinates of the vertices of $\triangle ABC$ are $A(1, 2)$, $B(-4, 3)$, and $C(-3, -5)$. State the coordinates of $\triangle A'B'C'$, the image of $\triangle ABC$ after a rotation of 90° about the origin. [The use of the set of axes below is optional.]

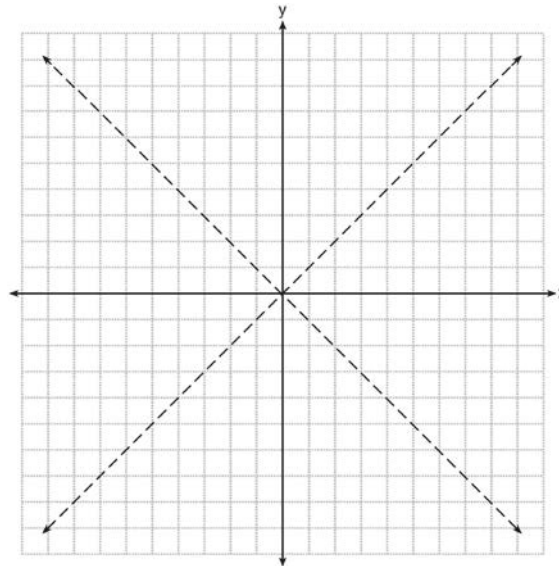


- 31 A cylinder has a height of 7 cm and a base with a diameter of 10 cm. Determine the volume, in cubic centimeters, of the cylinder in terms of π .
- 32 The coordinates of the endpoints of \overline{FG} are $(-4, 3)$ and $(2, 5)$. Find the length of \overline{FG} in simplest radical form.

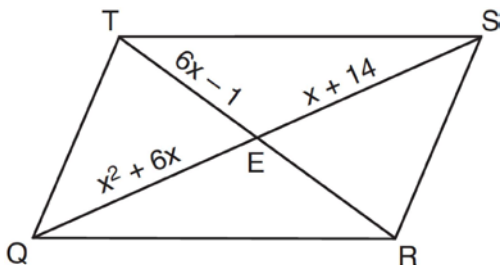
- 33 Using a compass and straightedge, construct a line perpendicular to \overline{AB} through point P . [Leave all construction marks.]



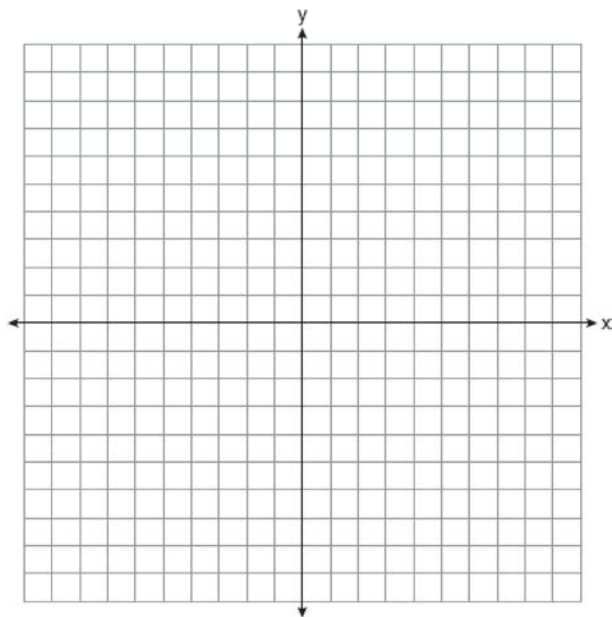
- 34 The graph below shows the locus of points equidistant from the x -axis and y -axis. On the same set of axes, graph the locus of points 3 units from the line $x = 0$. Label with an **X** all points that satisfy both conditions.



- 35 As shown in the diagram below, the diagonals of parallelogram $QRST$ intersect at E . If $QE = x^2 + 6x$, $SE = x + 14$, and $TE = 6x - 1$, determine TE algebraically.



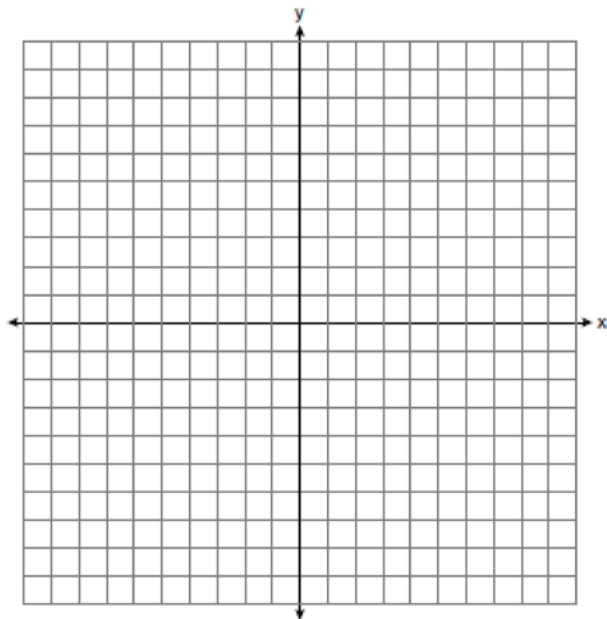
- 36 The vertices of $\triangle RST$ are $R(-6, 5)$, $S(-7, -2)$, and $T(1, 4)$. The image of $\triangle RST$ after the composition $T_{-2, 3} \circ r_{y=x}$ is $\triangle R''S''T''$. State the coordinates of $\triangle R''S''T''$. [The use of the set of axes below is optional.]



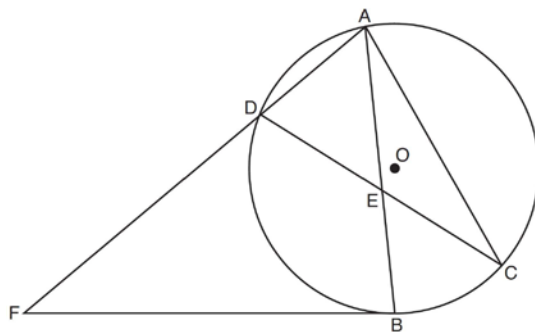
- 37 On the set of axes below, solve the following system of equations graphically and state the coordinates of *all* points in the solution.

$$(x + 3)^2 + (y - 2)^2 = 25$$

$$2y + 4 = -x$$



- 38 Chords \overline{AB} and \overline{CD} intersect at E in circle O , as shown in the diagram below. Secant \overline{FDA} and tangent \overline{FB} are drawn to circle O from external point F and chord \overline{AC} is drawn. The $m\widehat{DA} = 56$, $m\widehat{DB} = 112$, and the ratio of $m\widehat{AC} : m\widehat{CB} = 3 : 1$.



Determine $m\angle CEB$. Determine $m\angle F$. Determine $m\angle DAC$.

0812ge

Answer Section

1 ANS: 4

Parallel lines intercept congruent arcs.

PTS: 2

REF: 081201ge

STA: G.G.52

TOP: Chords

2 ANS: 2

PTS: 2

REF: 081202ge

STA: G.G.55

TOP: Properties of Transformations

3 ANS: 4

$$-5 = \frac{-3+x}{2}, \quad 2 = \frac{6+y}{2}$$

$$-10 = -3 + x \quad 4 = 6 + y$$

$$-7 = x \quad -2 = y$$

PTS: 2

REF: 081203ge

STA: G.G.66

TOP: Midpoint

4 ANS: 3

PTS: 2

REF: 081204ge

STA: G.G.59

TOP: Properties of Transformations

5 ANS: 2

PTS: 2

REF: 081205ge

STA: G.G.17

TOP: Constructions

6 ANS: 4

PTS: 2

REF: 081206ge

STA: G.G.30

TOP: Interior and Exterior Angles of Triangles

7 ANS: 1

$$AB = CD$$

$$AB + BC = CD + BC$$

$$AC = BD$$

PTS: 2

REF: 081207ge

STA: G.G.27

TOP: Triangle Proofs

8 ANS: 3

PTS: 2

REF: 081208ge

STA: G.G.27

TOP: Quadrilateral Proofs

9 ANS: 3

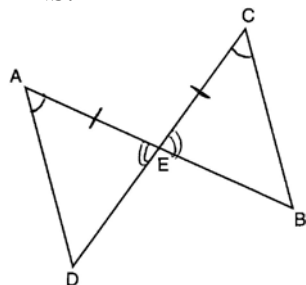
PTS: 2

REF: 081209ge

STA: G.G.71

TOP: Equations of Circles

10 ANS: 1



PTS: 2

REF: 081210ge

STA: G.G.28

TOP: Triangle Congruency

11 ANS: 3

As originally administered, this question read, “Which fact is *not* sufficient to show that planes \mathcal{R} and \mathcal{S} are perpendicular?” The State Education Department stated that since a correct solution was not provided for Question 11, all students shall be awarded credit for this question.

PTS: 2 REF: 081211ge STA: G.G.5 TOP: Planes

12 ANS: 2 PTS: 2 REF: 081212ge STA: G.G.72
TOP: Equations of Circles

13 ANS: 3

$$4x + 14 + 8x + 10 = 180$$

$$12x = 156$$

$$x = 13$$

PTS: 2 REF: 081213ge STA: G.G.35 TOP: Parallel Lines and Transversals

14 ANS: 2 PTS: 2 REF: 081214ge STA: G.G.50
TOP: Tangents KEY: point of tangency

15 ANS: 2

$$V = \frac{4}{3} \pi r^3 = \frac{4}{3} \pi \cdot \left(\frac{6}{2}\right)^3 \approx 36\pi$$

PTS: 2 REF: 081215ge STA: G.G.16 TOP: Volume and Surface Area

16 ANS: 4 PTS: 2 REF: 081216ge STA: G.G.45
TOP: Similarity KEY: basic

17 ANS: 1

$$m = \frac{3}{2} \quad y = mx + b$$

$$2 = \frac{3}{2}(1) + b$$

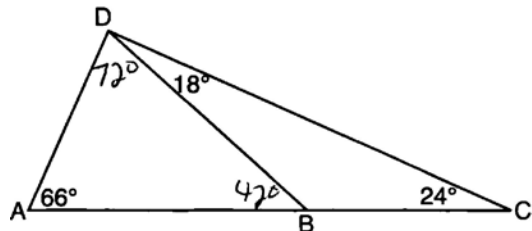
$$\frac{1}{2} = b$$

PTS: 2 REF: 081217ge STA: G.G.65 TOP: Parallel and Perpendicular Lines

18 ANS: 3 PTS: 2 REF: 081218ge STA: G.G.1

TOP: Planes

19 ANS: 1



PTS: 2 REF: 081219ge STA: G.G.34 TOP: Angle Side Relationship

20 ANS: 4

The centroid divides each median into segments whose lengths are in the ratio 2 : 1.

PTS: 2 REF: 081220ge STA: G.G.43 TOP: Centroid

21 ANS: 1

The length of the midsegment of a trapezoid is the average of the lengths of its bases. $\frac{x+3+5x-9}{2} = 2x+2$.

$$6x - 6 = 4x + 4$$

$$2x = 10$$

$$x = 5$$

PTS: 2 REF: 081221ge STA: G.G.40 TOP: Trapezoids

22 ANS: 2

$$3x + x + 20 + x + 20 = 180$$

$$5x = 40$$

$$x = 28$$

PTS: 2 REF: 081222ge STA: G.G.31 TOP: Isosceles Triangle Theorem

23 ANS: 3

$$180(n-2) = n \left(180 - \frac{180(n-2)}{n} \right)$$

$$180n - 360 = 180n - 180n + 360$$

$$180n = 720$$

$$n = 4$$

PTS: 2 REF: 081223ge STA: G.G.36 TOP: Interior and Exterior Angles of Polygons

24 ANS: 4 PTS: 2 REF: 081224ge STA: G.G.21

TOP: Centroid, Orthocenter, Incenter and Circumcenter

25 ANS: 3

The slope of $9x - 3y = 27$ is $m = \frac{-A}{B} = \frac{-9}{-3} = 3$, which is the opposite reciprocal of $-\frac{1}{3}$.

PTS: 2 REF: 081225ge STA: G.G.62 TOP: Parallel and Perpendicular Lines

26 ANS: 2 PTS: 2 REF: 081226ge STA: G.G.69

TOP: Triangles in the Coordinate Plane

27 ANS: 3 PTS: 2 REF: 081227ge STA: G.G.42

TOP: Midsegments

28 ANS: 3

The slope of $2y = x + 2$ is $\frac{1}{2}$, which is the opposite reciprocal of -2 . $3 = -2(4) + b$

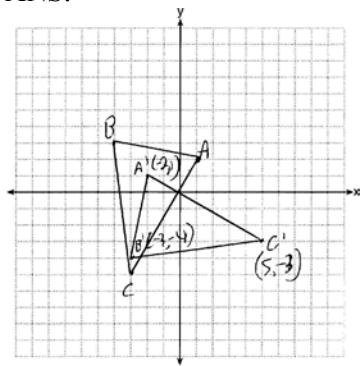
$$11 = b$$

PTS: 2 REF: 081228ge STA: G.G.64 TOP: Parallel and Perpendicular Lines

29 ANS:
2 is not a prime number, false.

PTS: 2 REF: 081229ge STA: G.G.24 TOP: Negations

30 ANS:



$A'(-2, 1)$, $B'(-3, -4)$, and $C'(5, -3)$

PTS: 2 REF: 081230ge STA: G.G.54 TOP: Rotations

31 ANS:

$$V = \pi r^2 h = \pi(5)^2 \cdot 7 = 175\pi$$

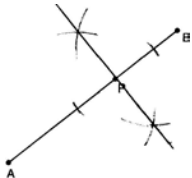
PTS: 2 REF: 081231ge STA: G.G.14 TOP: Volume and Lateral Area

32 ANS:

$$\sqrt{(-4-2)^2 + (3-5)^2} = \sqrt{36+4} = \sqrt{40} = \sqrt{4} \sqrt{10} = 2\sqrt{10}.$$

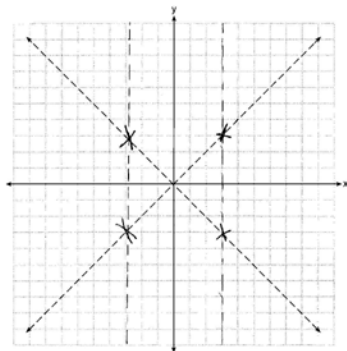
PTS: 2 REF: 081232ge STA: G.G.67 TOP: Distance

33 ANS:



PTS: 2 REF: 081233ge STA: G.G.19 TOP: Constructions

34 ANS:



PTS: 2 REF: 081234ge STA: G.G.23 TOP: Locus

35 ANS:

$$11. \quad x^2 + 6x = x + 14. \quad 6(2) - 1 = 11$$

$$x^2 + 5x - 14 = 0$$

$$(x + 7)(x - 2) = 0$$

$$x = 2$$

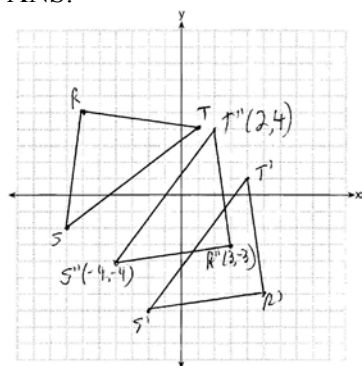
PTS: 2

REF: 081235ge

STA: G.G.38

TOP: Parallelograms

36 ANS:



PTS: 4

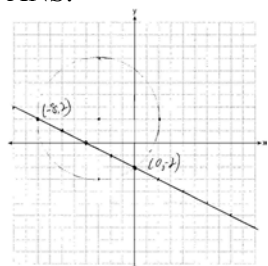
REF: 081236ge

STA: G.G.58

TOP: Compositions of Transformations

KEY: grids

37 ANS:



PTS: 4

REF: 081237ge

STA: G.G.70

TOP: Quadratic-Linear Systems

38 ANS:

$$52, 40, 80. \quad 360 - (56 + 112) = 192. \quad \frac{192 - 112}{2} = 40. \quad \frac{112 + 48}{2} = 80$$

$$\frac{1}{4} \times 192 = 48$$

$$\frac{56 + 48}{2} = 52$$

PTS: 6

REF: 081238ge

STA: G.G.51

TOP: Arcs Determined by Angles

KEY: mixed