

# JEFFERSON MATH PROJECT REGENTS BY STANDARD

All 544 NY Math B Regents Exam Questions  
from June 2001 to June 2006 Sorted by Standard

[www.jmap.org](http://www.jmap.org)



*Dear Sir*

*I have to acknowledge the receipt of your favor of May 14. in which you mention that you have finished the 6. first books of Euclid, plane trigonometry, surveying & algebra and ask whether I think a further pursuit of that branch of science would be useful to you. there are some propositions in the latter books of Euclid, & some of Archimedes, which are useful, & I have no doubt you have been made acquainted with them. trigonometry, so far as this, is most valuable to every man, there is scarcely a day in which he will not resort to it for some of the purposes of common life. the science of calculation also is indispensable as far as the extraction of the square & cube roots; Algebra as far as the quadratic equation & the use of logarithms are often of value in ordinary cases: but all beyond these is but a luxury; a delicious luxury indeed; but not to be indulged in by one who is to have a profession to follow for his subsistence. in this light I view the conic sections, curves of the higher orders, perhaps even spherical trigonometry, Algebraical operations beyond the 2d dimension, and fluxions.*

Letter from Thomas Jefferson to William G. Munford, Monticello, June 18, 1799.

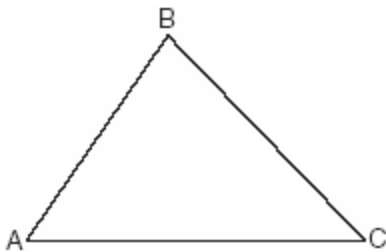
# NEW YORK STATE MATHEMATICS PERFORMANCE STANDARDS

	# of ?s
<b>MATHEMATICAL REASONING</b>	23
Students use mathematical reasoning to analyze mathematical situations, make conjectures, gather evidence, and construct an argument.	
<b>NUMBER AND NUMERATION</b>	49
Students use number sense and numeration to develop an understanding of the multiple use of numbers in the real world, the use of numbers to communicate mathematically, and the use of numbers in the development of mathematical ideas.	
<b>OPERATIONS</b>	58
Students use mathematical operations and relationships among them to understand mathematics.	
<b>MODELING/MULTIPLE REPRESENTATION</b>	119
Students use mathematical modeling/multiple representation to provide a means of presenting, interpreting, communicating, and connecting mathematical information and relationships.	
<b>MEASUREMENT</b>	108
Students use measurement in both metric and English measure to provide a major link between the abstractions of mathematics and the real world in order to describe and compare objects and data.	
<b>UNCERTAINTY</b>	64
Students use the ideas of uncertainty to illustrate that mathematics involves more than exactness when dealing with everyday situations.	
<b>PATTERNS/FUNCTIONS</b>	123
Students use patterns and functions to develop mathematical power, appreciate the true beauty of mathematics, and construct generalizations that describe patterns simply and efficiently.	
<b>Total</b>	<b>544</b>

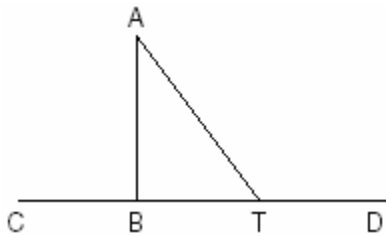
- Tom scored 23 points in a basketball game. He attempted 15 field goals and 6 free throws. If each successful field goal is 2 points and each successful free throw is 1 point, is it possible he successfully made all 6 of his free throws? Justify your answer.
- A ball is thrown straight up at an initial velocity of 54 feet per second. The height of the ball  $t$  seconds after it is thrown is given by the formula  $h(t) = 54t - 12t^2$ . How many seconds after the ball is thrown will it return to the ground?

[A] 9.2    [B] 6    [C] 4    [D] 4.5

- In the accompanying diagram,  $\triangle ABC$  is *not* isosceles. Prove that if altitude  $\overline{BD}$  were drawn, it would *not* bisect  $\overline{AC}$ .

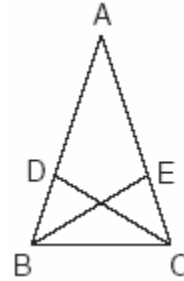


- Given:  $\triangle ABT$ ,  $\overline{CBTD}$ , and  $\overline{AB} \perp \overline{CD}$



Write an indirect proof to show that  $\overline{AT}$  is *not* perpendicular to  $\overline{CD}$ .

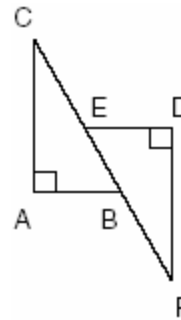
- In the accompanying diagram of  $\triangle ABC$ ,  $\overline{AB} \cong \overline{AC}$ ,  $\overline{BD} = \frac{1}{3}\overline{BA}$ , and  $\overline{CE} = \frac{1}{3}\overline{CA}$ .



Triangle  $EBC$  can be proved congruent to triangle  $DCB$  by

- [A] HL  $\cong$  HL                      [B] SSS  $\cong$  SSS  
[C] SAS  $\cong$  SAS                    [D] ASA  $\cong$  ASA

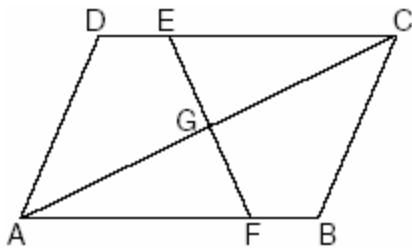
- In the accompanying diagram,  $\overline{CA} \perp \overline{AB}$ ,  $\overline{ED} \perp \overline{DF}$ ,  $\overline{ED} \parallel \overline{AB}$ ,  $\overline{CE} \cong \overline{BF}$ ,  $\overline{AB} \cong \overline{ED}$  and  $m\angle CAB = m\angle FDE = 90$ .



Which statement would *not* be used to prove  $\triangle ABC \cong \triangle DEF$ ?

- [A] SAS  $\cong$  SAS                      [B] HL  $\cong$  HL  
[C] SSS  $\cong$  SSS                      [D] AAS  $\cong$  AAS

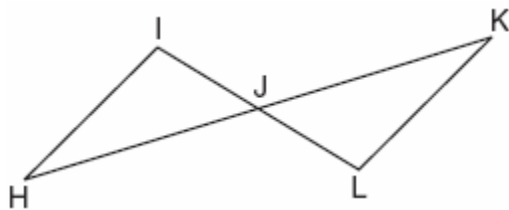
7. In the accompanying diagram of parallelogram  $ABCD$ ,  $\overline{DE} \cong \overline{BF}$ .



Triangle  $EGC$  can be proved congruent to triangle  $FGA$  by

- [A]  $HL \cong HL$                       [B]  $SSA \cong SSA$   
[C]  $AAS \cong AAS$                     [D]  $AAA \cong AAA$

8. In the accompanying diagram,  $\overline{HK}$  bisects  $\overline{IL}$  and  $\angle H \cong \angle K$ .



What is the most direct method of proof that could be used to prove  $\triangle HIJ \cong \triangle KLJ$ ?

- [A]  $SAS \cong SAS$                       [B]  $ASA \cong ASA$   
[C]  $AAS \cong AAS$                     [D]  $HL \cong HL$

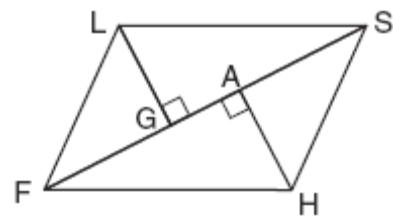
9. Which condition does *not* prove that two triangles are congruent?

- [A]  $SSS \cong SSS$                       [B]  $ASA \cong ASA$   
[C]  $SSA \cong SSA$                     [D]  $SAS \cong SAS$

10. Which statements could be used to prove that  $\triangle ABC$  and  $\triangle A'B'C'$  are congruent?

- [A]  $\overline{AB} \cong \overline{A'B'}$ ,  $\overline{BC} \cong \overline{B'C'}$ , and  $\angle A \cong \angle A'$   
[B]  $\overline{AB} \cong \overline{A'B'}$ ,  $\angle A \cong \angle A'$ , and  $\angle C \cong \angle C'$   
[C]  $\angle A \cong \angle A'$ ,  $\angle B \cong \angle B'$ , and  $\angle C \cong \angle C'$   
[D]  $\angle A \cong \angle A'$ ,  $\overline{AC} \cong \overline{A'C'}$ , and  $\overline{BC} \cong \overline{B'C'}$

11. Given: parallelogram  $FLSH$ , diagonal  $\overline{FGAS}$ ,  $\overline{LG} \perp \overline{FS}$ ,  $\overline{HA} \perp \overline{FS}$

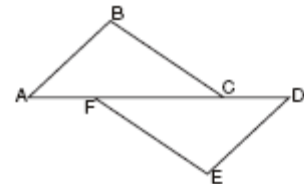


Prove:  $\triangle LGS \cong \triangle HAF$

- 12.

Complete the partial proof below for the accompanying diagram by providing reasons for steps 3, 6, 8, and 9.

- Given:  $\overline{AFCD}$   
 $\overline{AE} \perp \overline{BC}$   
 $\overline{DE} \perp \overline{EF}$   
 $\overline{BC} \parallel \overline{FE}$   
 $\overline{AB} = \overline{DE}$

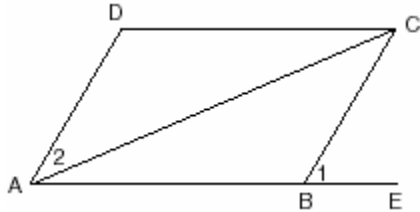


Prove:  $\overline{AC} = \overline{FD}$

Statements	Reasons
1 $\overline{AFCD}$	1 Given
2 $\overline{AE} \perp \overline{BC}$ , $\overline{DE} \perp \overline{EF}$	2 Given
3 $\angle B$ and $\angle E$ are right angles.	3 _____
4 $\angle B = \angle E$	4 All right angles are congruent.
5 $\overline{BC} \parallel \overline{FE}$	5 Given
6 $\angle BCA = \angle FED$	6 _____
7 $\overline{AB} = \overline{DE}$	7 Given
8 $\triangle ABC = \triangle DEF$	8 _____
9 $\overline{AC} = \overline{FD}$	9 _____

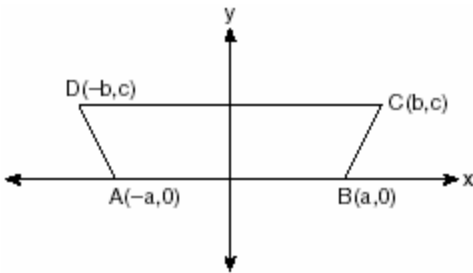
13. Prove that the diagonals of a parallelogram bisect each other.

14. Given: parallelogram  $ABCD$ , diagonal  $\overline{AC}$ , and  $\overline{ABE}$




Prove:  $m\angle 1 > m\angle 2$


15. In the accompanying diagram of  $ABCD$ , where  $a \neq b$ , prove  $ABCD$  is an isosceles trapezoid.




16. Quadrilateral  $KATE$  has vertices  $K(1,5)$ ,  $A(4,7)$ ,  $T(7,3)$ , and  $E(1,-1)$ .  
a Prove that  $KATE$  is a trapezoid. [The use of the grid is optional.]  
b Prove that  $KATE$  is *not* an isosceles trapezoid.




17. The coordinates of quadrilateral  $ABCD$  are  $A(-1,-5)$ ,  $B(8,2)$ ,  $C(11,13)$ , and  $D(2,6)$ . Using coordinate geometry, prove that quadrilateral  $ABCD$  is a rhombus. [The use of the grid is optional.]




18. The coordinates of quadrilateral  $JKLM$  are  $J(1,-2)$ ,  $K(13,4)$ ,  $L(6,8)$ , and  $M(-2,4)$ . Prove that quadrilateral  $JKLM$  is a trapezoid but not an isosceles trapezoid. [The use of the grid is optional.]



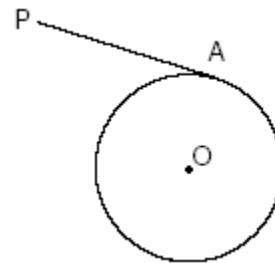
19. Jim is experimenting with a new drawing program on his computer. He created quadrilateral  $TEAM$  with coordinates  $T(-2,3)$ ,  $E(-5,-4)$ ,  $A(2,-1)$ , and  $M(5,6)$ . Jim believes that he has created a rhombus but not a square. Prove that Jim is correct. [The use of the grid is optional.]



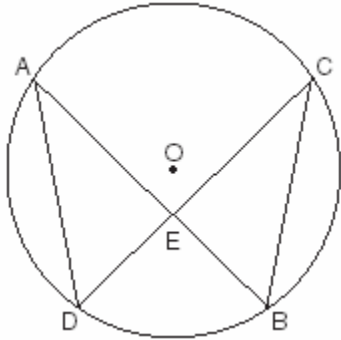
20. Given:  $A(-2,2)$ ,  $B(6,5)$ ,  $C(4,0)$ ,  $D(-4,-3)$   
Prove:  $ABCD$  is a parallelogram but not a rectangle. [The use of the grid is optional.]



21. In the accompanying diagram of circle  $O$ ,  $\overline{PA}$  is drawn tangent to the circle at  $A$ . Place  $B$  on  $\overline{PA}$  anywhere between  $P$  and  $A$  and draw  $\overline{OA}$ ,  $\overline{OP}$ , and  $\overline{OB}$ . Prove that  $\overline{OB}$  is not perpendicular to  $\overline{PA}$ .



22. Given: chords  $\overline{AB}$  and  $\overline{CD}$  of circle  $O$   
intersect at  $E$ , an interior point of circle  $O$ ;  
chords  $\overline{AD}$  and  $\overline{CB}$  are drawn.



Prove:  $(AE)(EB) = (CE)(ED)$

23. Twenty high school students took an examination and received the following scores:  
70, 60, 75, 68, 85, 86, 78, 72, 82, 88, 88, 73,  
74, 79, 86, 82, 90, 92, 93, 73  
Determine what percent of the students scored within one standard deviation of the mean.  
Do the results of the examination approximate a normal distribution? Justify your answer.

1. Which expression is equivalent to  $\frac{4}{3+\sqrt{2}}$ ?

[A]  $\frac{12-4\sqrt{2}}{7}$       [B]  $\frac{12+4\sqrt{2}}{7}$

[C]  $\frac{12-4\sqrt{2}}{11}$       [D]  $\frac{12+4\sqrt{2}}{11}$

2. Which expression is equal to  $\frac{2+\sqrt{3}}{2-\sqrt{3}}$ ?

[A]  $\frac{7+4\sqrt{3}}{7}$       [B]  $7+4\sqrt{3}$

[C]  $\frac{1-4\sqrt{3}}{7}$       [D]  $1-4\sqrt{3}$

3. The expression  $\frac{7}{2-\sqrt{3}}$  is equivalent to

[A]  $\frac{14+\sqrt{3}}{7}$       [B]  $14-7\sqrt{3}$

[C]  $\frac{2+\sqrt{3}}{7}$       [D]  $14+7\sqrt{3}$

4. The expression  $\frac{11}{\sqrt{3}-5}$  is equivalent to

[A]  $\frac{-\sqrt{3}+5}{2}$       [B]  $\frac{\sqrt{3}-5}{2}$

[C]  $\frac{\sqrt{3}+5}{2}$       [D]  $\frac{-\sqrt{3}-5}{2}$

5. The expression  $\frac{7}{3-\sqrt{2}}$  is equivalent to

[A]  $3+\sqrt{2}$       [B]  $\frac{21+\sqrt{2}}{7}$

[C]  $\frac{3+\sqrt{2}}{7}$       [D]  $3-\sqrt{2}$

6. The expression  $\frac{1}{5-\sqrt{13}}$  is equivalent to

[A]  $\frac{5+\sqrt{13}}{12}$       [B]  $\frac{5+\sqrt{13}}{-8}$

[C]  $\frac{5+\sqrt{13}}{8}$       [D]  $\frac{5+\sqrt{13}}{-12}$

7. Which expression represents the sum of  $\frac{1}{\sqrt{3}} + \frac{1}{\sqrt{2}}$ ?

[A]  $\frac{2}{\sqrt{5}}$       [B]  $\frac{2\sqrt{3}+3\sqrt{2}}{6}$

[C]  $\frac{\sqrt{3}+\sqrt{2}}{3}$       [D]  $\frac{\sqrt{3}+\sqrt{2}}{2}$

8. The expression  $\frac{5}{\sqrt{5}-1}$  is equivalent to

[A]  $\frac{5\sqrt{5}-5}{6}$       [B]  $\frac{5\sqrt{5}-5}{4}$

[C]  $\frac{5\sqrt{5}+5}{4}$       [D]  $\frac{5}{4}$

9. Which statement is true for all real number values of  $x$ ?

[A]  $|x-1| > 0$       [B]  $\sqrt{x^2} = x$

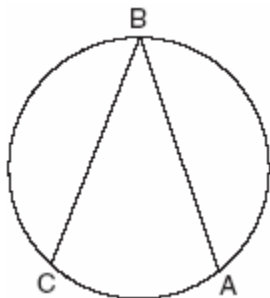
[C]  $|x-1| > (x-1)$       [D]  $\sqrt{x^2} = |x|$



10. If the equation  $x^2 - kx - 36 = 0$  has  $x = 12$  as one root, what is the value of  $k$ ?

[A] 3      [B] -9      [C] 9      [D] -3

11. The new corporate logo created by the design engineers at Magic Motors is shown in the accompanying diagram.



If chords  $\overline{BA}$  and  $\overline{BC}$  are congruent and  $m\widehat{BC} = 140$ , what is  $m\angle B$ ?

[A] 80      [B] 280      [C] 140      [D] 40

12. What is the multiplicative inverse of  $3i$ ?

[A]  $-3$       [B]  $-\frac{i}{3}$       [C]  $\frac{1}{3}$       [D]  $-3i$

13. Express  $\sqrt{-48} + 3.5 + \sqrt{25} + \sqrt{-27}$  in simplest  $a + bi$  form.

14. What is the sum of  $2 - \sqrt{-4}$  and  $-3 + \sqrt{-16}$  expressed in simplest  $a + bi$  form?

[A]  $-1 + i\sqrt{20}$       [B]  $-1 + 12i$   
[C]  $-1 + 2i$       [D]  $-14 + i$

15. If  $f(x) = x^3 - 2x^2$ , then  $f(i)$  is equivalent to

[A]  $2 - i$       [B]  $2 + i$       [C]  $-2 - i$       [D]  $-2 + i$

16. The expression  $\frac{2+i}{3+i}$  is equivalent to

[A]  $\frac{6+i}{8}$       [B]  $\frac{6+5i}{8}$

[C]  $\frac{7-5i}{10}$       [D]  $\frac{7+i}{10}$

17. Melissa and Joe are playing a game with complex numbers. If Melissa has a score of  $5 - 4i$  and Joe has a score of  $3 + 2i$ , what is their total score?

[A]  $8 - 2i$       [B]  $8 + 2i$

[C]  $8 - 6i$       [D]  $8 + 6i$

18. Show that the product of  $a + bi$  and its conjugate is a real number.

19. If the sum of the roots of  $x^2 + 3x - 5$  is added to the product of its roots, the result is

[A]  $-2$       [B]  $-8$       [C]  $15$       [D]  $-15$

20. Jacob is solving a quadratic equation. He executes a program on his graphing calculator and sees that the roots are real, rational, and unequal. This information indicates to Jacob that the discriminant is

[A] negative      [B] zero

[C] not a perfect square

[D] a perfect square

21. Which equation has imaginary roots?

[A]  $x^2 - 1 = 0$       [B]  $x^2 - 2 = 0$

[C]  $x^2 - x - 1 = 0$       [D]  $x^2 + x + 1 = 0$

22. The roots of the equation  $ax^2 + 4x = -2$  are real, rational, and equal when  $a$  has a value of  
[A] 2      [B] 3      [C] 1      [D] 4
23. In the equation  $ax^2 + 6x - 9 = 0$ , imaginary roots will be generated if  
[A]  $-1 < a < 1$       [B]  $a > -1$ , only  
[C]  $a < 1$ , only      [D]  $a < -1$
24. The equation  $2x^2 + 8x + n = 0$  has imaginary roots when  $n$  is equal to  
[A] 6      [B] 8      [C] 4      [D] 10
25. The roots of the equation  $2x^2 - 8x - 4 = 0$  are  
[A] real, irrational, and unequal  
[B] real, rational, and equal  
[C] imaginary  
[D] real, rational, and unequal
26. The roots of the equation  $2x^2 - x = 4$  are  
[A] real and irrational  
[B] real, rational, and equal  
[C] real, rational, and unequal  
[D] imaginary
27. Which statement must be true if a parabola represented by the equation  $y = ax^2 + bx + c$  does not intersect the  $x$ -axis?  
[A]  $b^2 - 4ac > 0$ , and  $b^2 - 4ac$  is a perfect square.  
[B]  $b^2 - 4ac > 0$ , and  $b^2 - 4ac$  is not a perfect square.  
[C]  $b^2 - 4ac < 0$       [D]  $b^2 - 4ac = 0$
28. If the roots of  $ax^2 + bx + c = 0$  are real, rational, and equal, what is true about the graph of the function  $y = ax^2 + bx + c$ ?  
[A] It intersects the  $x$ -axis in two distinct points.  
[B] It is tangent to the  $x$ -axis.  
[C] It lies entirely below the  $x$ -axis.  
[D] It lies entirely above the  $x$ -axis.
29. Find all values of  $k$  such that the equation  $3x^2 - 2x + k = 0$  has imaginary roots.
30. If  $2 + 3i$  is one root of a quadratic equation with real coefficients, what is the sum of the roots of the equation?
31. Which equation has imaginary roots?  
[A]  $x(5 - x) = -3$       [B]  $x(x + 6) = -10$   
[C]  $x(5 + x) = 8$       [D]  $(2x + 1)(x - 3) = 7$
32. The roots of the equation  $2x^2 - 5 = 0$  are  
[A] real, rational, and unequal  
[B] real, rational, and equal  
[C] real and irrational      [D] imaginary
33. Written in simplest form, the expression  $\frac{x^2y^2 - 9}{3 - xy}$  is equivalent to  
[A]  $-1$       [B]  $-(3 + xy)$   
[C]  $\frac{1}{3 + xy}$       [D]  $3 + xy$

34. Express the following rational expression in simplest form:

$$\frac{9 - x^2}{10x^2 - 28x - 6}$$

35. For all values of  $x$  for which the expression is defined,  $\frac{2x + x^2}{x^2 + 5x + 6}$  is equivalent to

[A]  $\frac{1}{x+3}$                       [B]  $\frac{1}{x+2}$

[C]  $\frac{x}{x+3}$                       [D]  $\frac{x}{x+2}$

36. Written in simplest form, the expression

$$\frac{x^2 - 9x}{45x - 5x^2}$$
 is equivalent to

[A]  $-\frac{1}{5}$     [B]  $-5$     [C]  $5$     [D]  $\frac{1}{5}$

37. The expression  $\frac{\frac{a}{b} - \frac{b}{a}}{\frac{1}{a} + \frac{1}{b}}$  is equivalent to

[A]  $ab$                       [B]  $a+b$

[C]  $\frac{a-b}{ab}$                       [D]  $a-b$

38. The fraction  $\frac{\frac{x}{y} + x}{\frac{1}{y} + 1}$  is equivalent to

[A]  $x$     [B]  $\frac{x^2y}{1+y}$     [C]  $\frac{2xy}{1+y}$     [D]  $2x$

39. In simplest form,  $\frac{\frac{1}{x^2} - \frac{1}{y^2}}{\frac{1}{y} + \frac{1}{x}}$  is equal to

[A]  $\frac{y-x}{xy}$                       [B]  $y-x$

[C]  $\frac{x-y}{xy}$                       [D]  $x-y$

40. Express in simplest form:  $\frac{\frac{x}{4} - \frac{4}{x}}{1 - \frac{4}{x}}$

41. The expression  $\frac{\frac{1}{x} + \frac{1}{y}}{\frac{1}{x^2} - \frac{1}{y^2}}$  is equivalent to

[A]  $\frac{xy}{x-y}$                       [B]  $\frac{xy}{y-x}$

[C]  $y-x$                       [D]  $\frac{y-x}{xy}$

42. Which expression is equivalent to the

complex fraction  $\frac{\frac{x}{x+2}}{1 - \frac{x}{x+2}}$ ?

[A]  $\frac{2x}{x^2+4}$     [B]  $\frac{x}{2}$     [C]  $\frac{2x}{x+2}$     [D]  $\frac{2}{x}$

43. When simplified, the complex fraction

$$1 + \frac{1}{\frac{x}{1-x}}, x \neq 0, \text{ is equivalent to}$$

- [A]  $\frac{1}{x-1}$     [B]  $\frac{1}{1-x}$     [C] 1    [D] -1

49. The expression  $\frac{\sec \theta}{\csc \theta}$  is equivalent to

- [A]  $\cos \theta$     [B]  $\frac{\cos \theta}{\sin \theta}$   
[C]  $\frac{\sin \theta}{\cos \theta}$     [D]  $\sin \theta$

44. Express in simplest form:  $\frac{\frac{1}{r} - \frac{1}{s}}{\frac{r}{r^2} - 1}$

45. Simplify completely:  $\frac{1-m}{m - \frac{1}{m}}$

46. Simplify for all values of  $a$  for which the

expression is defined:  $\frac{1 - \frac{2}{a}}{\frac{4}{a^2} - 1}$

47. In a science experiment, when resistor  $A$  and resistor  $B$  are connected in a parallel circuit,

the total resistance is  $\frac{1}{\frac{1}{A} + \frac{1}{B}}$ . This complex

fraction is equivalent to

- [A]  $AB$     [B]  $\frac{AB}{A+B}$     [C] 1    [D]  $A+B$

48. A rectangle is said to have a golden ratio

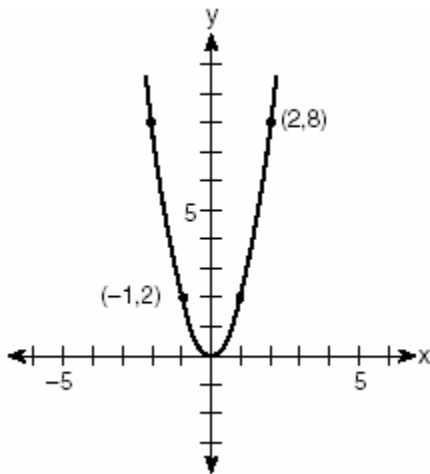
when  $\frac{w}{h} = \frac{h}{w-h}$ , where  $w$  represents width

and  $h$  represents height. When  $w = 3$ , between which two consecutive integers will  $h$  lie?

1. On a trip, a student drove 40 miles per hour for 2 hours and then drove 30 miles per hour for 3 hours. What is the student's average rate of speed, in miles per hour, for the whole trip?

[A] 37 [B] 35 [C] 36 [D] 34

2. Which quadratic function is shown in the accompanying graph?



[A]  $y = -2x^2$  [B]  $y = -\frac{1}{2}x^2$   
[C]  $y = 2x^2$  [D]  $y = \frac{1}{2}x^2$

3. The product of  $(5ab)$  and  $(-2a^2b)^3$  is

[A]  $-40a^7b^4$  [B]  $-40a^6b^4$   
[C]  $-30a^6b^4$  [D]  $-30a^7b^4$

4. The expression  $\frac{(b^{2n+1})^3}{b^n \cdot b^{4n+3}}$  is equivalent to

[A]  $\frac{b^n}{2}$  [B]  $b^{-3n+1}$  [C]  $b^{-3n}$  [D]  $b^n$

5. What is the axis of symmetry of the graph of the equation  $x = y^2$ ?

[A] line  $y = x$  [B]  $y$ -axis  
[C] line  $y = -x$  [D]  $x$ -axis

6. Which transformation is a direct isometry?

[A]  $T_{2,5}$  [B]  $D_2$  [C]  $D_{-2}$  [D]  $r_{y\text{-axis}}$

7. Which transformation is an example of an opposite isometry?

[A]  $(x,y) \rightarrow (y,-x)$  [B]  $(x,y) \rightarrow (3x,3y)$   
[C]  $(x,y) \rightarrow (x+3,y-6)$   
[D]  $(x,y) \rightarrow (y,x)$

8. What are the coordinates of point  $P$ , the image of point  $(3,-4)$  after a reflection in the line  $y = x$ ?

[A]  $(3,4)$  [B]  $(-4,3)$   
[C]  $(-3,4)$  [D]  $(4,-3)$

9. The image of the origin under a certain translation is the point  $(2,-6)$ . The image of point  $(-3,-2)$  under the same translation is the point

[A]  $(-\frac{3}{2}, \frac{1}{3})$  [B]  $(-5,4)$   
[C]  $(-6,12)$  [D]  $(-1,-8)$

10. Point  $P'$  is the image of point  $P(-3,4)$  after a translation defined by  $T_{(7,-1)}$ . Which other transformation on  $P$  would also produce  $P'$ ?

- [A]  $r_{y=-x}$                       [B]  $r_{y-axis}$   
[C]  $R_{-90^\circ}$                       [D]  $R_{90^\circ}$

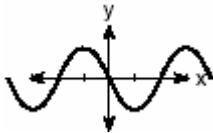
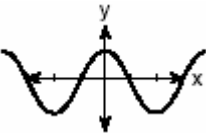

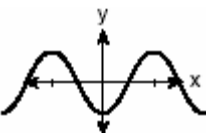
11. If the coordinates of point  $A$  are  $(-2,3)$ , what is the image of  $A$  under  $r_{y-axis} \circ D_3$ ?

- [A]  $(6,9)$                       [B]  $(5,6)$   
[C]  $(-6,-9)$                       [D]  $(9,-6)$

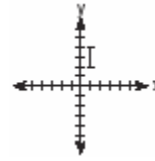
12. What is the image of point  $(1,1)$  under  $r_{x-axis} \circ R_{0,90^\circ}$ ?

- [A]  $(1,1)$                       [B]  $(-1,1)$   
[C]  $(1,-1)$                       [D]  $(-1,-1)$

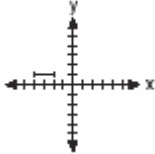
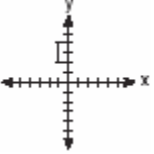
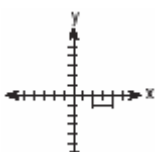
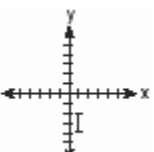
13. If  $f(x) = \cos x$ , which graph represents  $f(x)$  under the composition  $r_{y-axis} \circ r_{x-axis}$ ?

- [A]                       [B]   
[C]                       [D] 

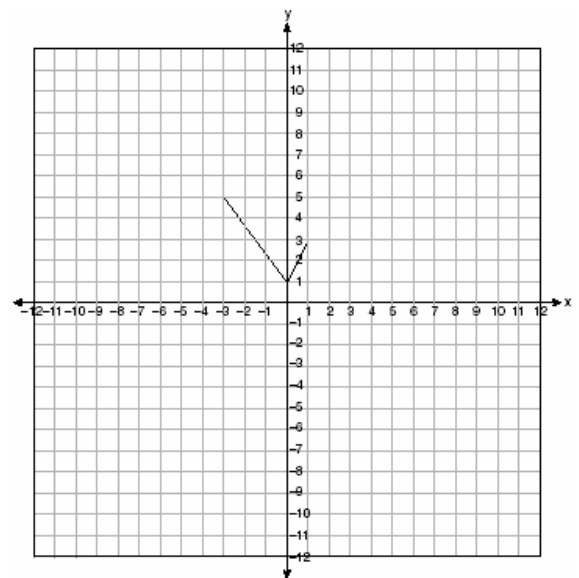
14. The accompanying graph represents the figure  $\square$ .



- Which graph represents  $\square$  after a transformation defined by  $r_{y=x} \circ R_{90^\circ}$ ?

- [A]                       [B]   
[C]                       [D] 

15. The graph of the function  $g(x)$  is shown on the accompanying set of axes. On the same set of axes, sketch the image of  $g(x)$  under the transformation  $D_2$ .



16. A box contains one 2-inch rod, one 3-inch rod, one 4-inch rod, and one 5-inch rod. What is the maximum number of different triangles that can be made using these rods as sides?  
[A] 4 [B] 1 [C] 2 [D] 3
17. At Mogul's Ski Resort, the beginner's slope is inclined at an angle of  $12.3^\circ$ , while the advanced slope is inclined at an angle of  $26.4^\circ$ . If Rudy skis 1,000 meters down the advanced slope while Valerie skis the same distance on the beginner's slope, how much longer was the horizontal distance that Valerie covered?  
[A] 231.6 m [B] 895.7 m  
[C] 977.0 m [D] 81.3 m
18. A regular hexagon is inscribed in a circle. What is the ratio of the length of a side of the hexagon to the minor arc that it intercepts?  
[A]  $\frac{\pi}{6}$  [B]  $\frac{3}{6}$  [C]  $\frac{3}{\pi}$  [D]  $\frac{6}{\pi}$
19. If  $f(x) = 5x^2 - 1$  and  $g(x) = 3x - 1$ , find  $g(f(1))$ .
20. If  $f(x) = 2x^2 + 4$  and  $g(x) = x - 3$ , which number satisfies  $f(x) = (f \circ g)(x)$ ?  
[A] 5 [B]  $\frac{3}{2}$  [C] 4 [D]  $\frac{3}{4}$
21. The temperature generated by an electrical circuit is represented by  $t = f(m) = 0.3m^2$ , where  $m$  is the number of moving parts. The resistance of the same circuit is represented by  $r = g(t) = 150 + 5t$ , where  $t$  is the temperature. What is the resistance in a circuit that has four moving parts?  
[A] 156 [B] 51 [C] 174 [D] 8,670
22. The revenue,  $R(x)$ , from selling  $x$  units of a product is represented by the equation  $R(x) = 35x$ , while the total cost,  $C(x)$ , of making  $x$  units of the product is represented by the equation  $C(x) = 20x + 500$ . The total profit,  $P(x)$ , is represented by the equation  $P(x) = R(x) - C(x)$ . For the values of  $R(x)$  and  $C(x)$  given above, what is  $P(x)$ ?  
[A]  $15x - 500$  [B]  $10x + 100$   
[C]  $15x$  [D]  $15x + 500$
23. Which equation states that the temperature,  $t$ , in a room is less than  $3^\circ$  from  $68^\circ$ ?  
[A]  $|3 + t| < 68$  [B]  $|68 - t| < 3$   
[C]  $|3 - t| < 68$  [D]  $|68 + t| < 3$
24. The solution set of  $|3x + 2| < 1$  contains  
[A] no real numbers  
[B] only negative real numbers  
[C] both positive and negative real numbers  
[D] only positive real numbers

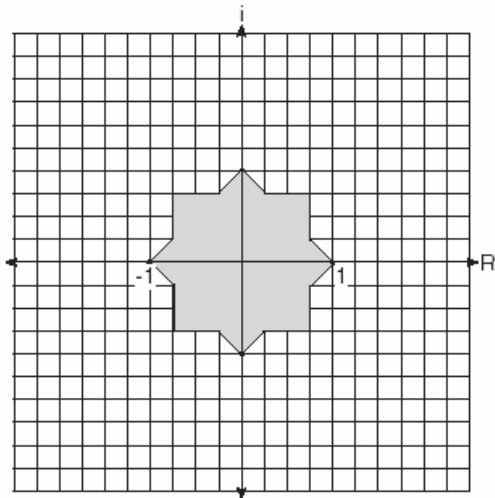
25. The graph of  $y = (x - 3)^2$  is shifted left 4 units and down 2 units. What is the axis of symmetry of the transformed graph?

- [A]  $x = 1$                       [B]  $x = -2$   
[C]  $x = -1$                       [D]  $x = 7$

26. If the point  $(a, b)$  lies on the graph  $y = f(x)$ , the graph of  $y = f^{-1}(x)$  must contain point

- [A]  $(a, 0)$                       [B]  $(-a, -b)$   
[C]  $(b, a)$                       [D]  $(0, b)$

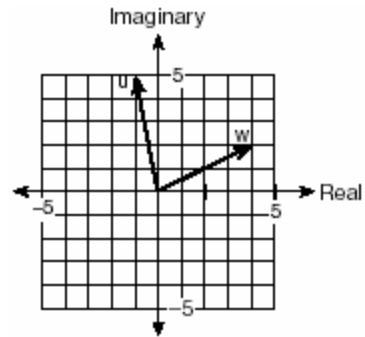
27. Fractal geometry uses the complex number plane to draw diagrams, such as the one shown in the accompanying graph.



Which number is *not* included in the shaded area?

- [A]  $-0.5 - 0.5i$                       [B]  $-0.9$   
[C]  $-0.5i$                               [D]  $-0.9 - 0.9i$

28. Two complex numbers are graphed below.



What is the sum of  $w$  and  $u$ , expressed in standard complex number form?

- [A]  $5 + 7i$                       [B]  $3 + 7i$   
[C]  $-5 + 3i$                       [D]  $7 + 3i$

29. Expressed in simplest form,  $i^{16} + i^6 - 2i^5 + i^{13}$

- [A]  $i$                       [B]  $1$                       [C]  $-1$                       [D]  $-i$

30. When simplified,  $i^{27} + i^{34}$  is equal to

- [A]  $-i-1$                       [B]  $i^{61}$                       [C]  $i-1$                       [D]  $i$

31. What is the value of  $i^{99} - i^3$ ?

- [A]  $0$                       [B]  $i^{96}$                       [C]  $-i$                       [D]  $1$

32. What is the sum of  $\sqrt{-2}$  and  $\sqrt{-18}$ ?

- [A]  $5i\sqrt{2}$                       [B]  $4i\sqrt{2}$   
[C]  $2i\sqrt{5}$                       [D]  $6i$

33. The expression  $i^0 \cdot i^1 \cdot i^2 \cdot i^3 \cdot i^4$  is equal to

- [A]  $-i$                       [B]  $i$                       [C]  $1$                       [D]  $-1$



34. The expression  $\frac{i^{16}}{i^3}$  is equivalent to  
[A] 1 [B] -1 [C]  $-i$  [D]  $i$
35. Mrs. Donahue made up a game to help her class learn about imaginary numbers. The winner will be the student whose expression is equivalent to  $-i$ . Which expression will win the game?  
[A]  $i^{47}$  [B]  $i^{46}$  [C]  $i^{48}$  [D]  $i^{49}$
36. What is the product of  $5 + \sqrt{-36}$  and  $1 - \sqrt{-49}$ , expressed in simplest  $a + bi$  form?  
[A]  $47 + 41i$  [B]  $5 - 71i$   
[C]  $-37 + 41i$  [D]  $47 - 29i$
37. When expressed as a monomial in terms of  $i$ ,  $2\sqrt{-32} - 5\sqrt{-8}$  is equivalent to  
[A]  $2\sqrt{2}i$  [B]  $-2i\sqrt{2}$   
[C]  $18i\sqrt{2}$  [D]  $2i\sqrt{2}$
38. The expression  $(-1 + i)^3$  is equivalent to  
[A]  $-1 - i$  [B]  $2 + 2i$   
[C]  $-2 - 2i$  [D]  $-3i$
39. In an electrical circuit, the voltage,  $E$ , in volts, the current,  $I$ , in amps, and the opposition to the flow of current, called impedance,  $Z$ , in ohms, are related by the equation  $E = IZ$ . A circuit has a current of  $(3 + i)$  amps and an impedance of  $(-2 + i)$  ohms. Determine the voltage in  $a + bi$  form.
40. The relationship between voltage,  $E$ , current,  $I$ , and resistance,  $Z$ , is given by the equation  $E = IZ$ . If a circuit has a current  $I = 3 + 2i$  and a resistance  $Z = 2 - i$ , what is the voltage of this circuit?  
[A]  $8 + i$  [B]  $4 - i$  [C]  $4 + i$  [D]  $8 + 7i$
41. Impedance measures the opposition of an electrical circuit to the flow of electricity. The total impedance in a particular circuit is given by the formula  $Z_T = \frac{Z_1 Z_2}{Z_1 + Z_2}$ . What is the total impedance of a circuit,  $Z_T$ , if  $Z_1 = 1 + 2i$  and  $Z_2 = 1 - 2i$ ?  
[A] 1 [B] 0 [C]  $-\frac{3}{2}$  [D]  $\frac{5}{2}$
42. Express, in simplest  $a + bi$  form, the roots of the equation  $x^2 + 5 = 4x$ .
43. In physics class, Taras discovers that the behavior of electrical power,  $x$ , in a particular circuit can be represented by the function  $f(x) = x^2 + 2x + 7$ . If  $f(x) = 0$ , solve the equation and express your answer in simplest  $a + bi$  form.
44. The value of  $(\frac{3^0}{2})^{-1}$  is  
[A]  $-\frac{1}{9}$  [B] 9 [C]  $-9$  [D]  $\frac{1}{9}$

45. The expression  $\frac{3^{\frac{1}{3}}}{3^{\frac{2}{3}}}$  is equivalent to

- [A]  $\frac{1}{\sqrt[3]{3}}$     [B]  $\sqrt{3}$     [C] 3    [D] 1

46. If  $x$  is a positive integer,  $4x^{\frac{1}{2}}$  is equivalent to

- [A]  $\frac{2}{x}$     [B]  $4\frac{1}{x}$     [C]  $4\sqrt{x}$     [D]  $2x$

47. The expression  $\sqrt[4]{16a^6b^4}$  is equivalent to

- [A]  $2a^2b$     [B]  $4a^{\frac{3}{2}}b$   
[C]  $4a^2b$     [D]  $2a^{\frac{3}{2}}b$

48. When simplified, the expression  $(\sqrt[3]{m^4})(m^{-\frac{1}{2}})$  is equivalent to

- [A]  $\sqrt[3]{m^{-2}}$     [B]  $\sqrt[6]{m^5}$   
[C]  $\sqrt[5]{m^{-4}}$     [D]  $\sqrt[4]{m^3}$

49. Find the value of  $(x+2)^0 + (x+1)^{\frac{2}{3}}$  when  $x = 7$ .

50. If  $(a^x)^{\frac{2}{3}} = \frac{1}{a^2}$ , what is the value of  $x$ ?

- [A] -3    [B] 1    [C] 2    [D] -1

51. If  $f(x) = x^{-\frac{3}{2}}$ , then  $f(\frac{1}{4})$  is equal to

- [A]  $-\frac{1}{8}$     [B] 8    [C] -4    [D] -2

52. If  $\log 5 = a$ , then  $\log 250$  can be expressed as

- [A]  $25a$     [B]  $50a$   
[C]  $10 + 2a$     [D]  $2a + 1$

53. Which function is symmetrical with respect to the origin?

- [A]  $y = -\frac{5}{x}$     [B]  $y = |5 - x|$   
[C]  $y = \sqrt{x+5}$     [D]  $y = 5^x$

54. Express in simplest form:

$$\frac{4x+8}{x+1} \cdot \frac{2-x}{3x-15} \div \frac{x^2-4}{2x^2-8x-10}$$

55. What is the sum of  $\frac{3}{x-3}$  and  $\frac{x}{3-x}$ ?

- [A]  $\frac{x+3}{x-3}$     [B] 0    [C] -1    [D] 1

56. What is the sum of  $(y-5) + \frac{3}{y+2}$ ?

- [A]  $\frac{y^2-7}{y+2}$     [B]  $\frac{y-2}{y+2}$   
[C]  $y-5$     [D]  $\frac{y^2-3y-7}{y+2}$

57. Express in simplest form:  $\frac{1}{x} + \frac{1}{x+3}$

58. Which type of symmetry does the equation  $y = \cos x$  have?

[A] point symmetry with respect to  $(\frac{\pi}{2}, 0)$

[B] line symmetry with respect to the  $x$ -axis

[C] line symmetry with respect to  $y = x$

[D] point symmetry with respect to the origin

1. A store advertises that during its Labor Day sale \$15 will be deducted from every purchase over \$100. In addition, after the deduction is taken, the store offers an early-bird discount of 20% to any person who makes a purchase before 10 a.m. If Hakeem makes a purchase of  $x$  dollars,  $x > 100$ , at 8 a.m., what, in terms of  $x$ , is the cost of Hakeem's purchase?


- [A]  $0.85x - 20$       [B]  $0.20x - 3$   
[C]  $0.80x - 12$       [D]  $0.20x - 15$

2. If Jamar can run  $\frac{3}{5}$  of a mile in 2 minutes 30 seconds, what is his rate in miles per minute?


- [A]  $3\frac{1}{10}$     [B]  $\frac{4}{5}$     [C]  $\frac{6}{25}$     [D]  $4\frac{1}{6}$

3. At the local video rental store, José rents two movies and three games for a total of \$15.50. At the same time, Meg rents three movies and one game for a total of \$12.05. How much money is needed to rent a combination of one game and one movie?
4. The cost of a long-distance telephone call is determined by a flat fee for the first 5 minutes and a fixed amount for each additional minute. If a 15-minute telephone call costs \$3.25 and a 23-minute call costs \$5.17, find the cost of a 30-minute call.


5. Island Rent-a-Car charges a car rental fee of \$40 plus \$5 per hour or fraction of an hour. Wayne's Wheels charges a car rental fee of \$25 plus \$7.50 per hour or fraction of an hour. Under what conditions does it cost *less* to rent from Island Rent-a-Car? [The use of the accompanying grid is optional.]



6. A pelican flying in the air over water drops a crab from a height of 30 feet. The distance the crab is from the water as it falls can be represented by the function  $h(t) = -16t^2 + 30$ , where  $t$  is time, in seconds. To catch the crab as it falls, a gull flies along a path represented by the function  $g(t) = -8t + 15$ . Can the gull catch the crab before the crab hits the water? Justify your answer. [The use of the accompanying grid is optional.]




7. The price of a stock,  $A(x)$ , over a 12-month period decreased and then increased according to the equation  $A(x) = 0.75x^2 - 6x + 20$ , where  $x$  equals the number of months. The price of another stock,  $B(x)$ , increased according to the equation  $B(x) = 2.75x + 1.50$  over the same 12-month period. Graph and label both equations on the accompanying grid. State all prices, to the *nearest dollar*, when both stock values were the same.




8. What is the equation of a parabola that goes through points  $(0,1)$ ,  $(-1,6)$ , and  $(2,3)$ ?
- [A]  $y = x^2 - 3x + 1$   
[B]  $y = 2x^2 - 3x + 1$   
[C]  $y = x^2 + 1$       [D]  $y = 2x^2 + 1$

9. A small rocket is launched from a height of 72 feet. The height of the rocket in feet,  $h$ , is represented by the equation  $h(t) = -16t^2 + 64t + 72$ , where  $t =$  time, in seconds. Graph this equation on the accompanying grid. Use your graph to determine the number of seconds that the rocket will remain at or above 100 feet from the ground. [Only a graphic solution can receive full credit.]



10. For which quadratic equation is the axis of symmetry  $x = 3$ ?
- [A]  $y = x^2 + 6x + 3$   
[B]  $y = -x^2 + 3x + 5$   
[C]  $y = -x^2 + 6x + 2$       [D]  $y = x^2 + x + 3$

11. An acorn falls from the branch of a tree to the ground 25 feet below. The distance,  $S$ , the acorn is from the ground as it falls is represented by the equation  $S(t) = -16t^2 + 25$ , where  $t$  represents time, in seconds. Sketch a graph of this situation on the accompanying grid. Calculate, to the *nearest hundredth of a second*, the time the acorn will take to reach the ground.




12. Two objects are  $2.4 \times 10^{20}$  centimeters apart. A message from one object travels to the other at a rate of  $1.2 \times 10^5$  centimeters per second. How many seconds does it take the message to travel from one object to the other?
- [A]  $2.88 \times 10^{25}$       [B]  $1.2 \times 10^{15}$   
 [C]  $2.0 \times 10^4$       [D]  $2.0 \times 10^{15}$
13. The path of a rocket is represented by the equation  $y = \sqrt{25 - x^2}$ . The path of a missile designed to intersect the path of the rocket is represented by the equation  $x = \frac{3}{2}\sqrt{y}$ . The value of  $x$  at the point of intersection is 3. What is the corresponding value of  $y$ ?
- [A] 4      [B] -2      [C] -4      [D] 2

14. Which transformation best describes the relationship between the functions  $f(x) = 2^x$  and  $g(x) = \left(\frac{1}{2}\right)^x$ ?
- [A] reflection in the  $x$ -axis  
 [B] reflection in the line  $y = x$   
 [C] reflection in the origin  
 [D] reflection in the  $y$ -axis

15. What are the coordinates of point  $A'$ , the image of point  $A(-4,1)$  after the composite transformation  $R_{90^\circ} \circ r_{y=x}$  where the origin is the center of rotation?
- [A] (4,1)      [B] (-4,-1)  
 [C] (1,4)      [D] (-1,-4)

16. a On the accompanying grid, graph the equation  $2y = 2x^2 - 4$  in the interval  $-3 \leq x \leq 3$  and label it  $a$ .  
 b On the same grid, sketch the image of  $a$  under  $T_{5,-2} \circ r_{x\text{-axis}}$  and label it  $b$ .



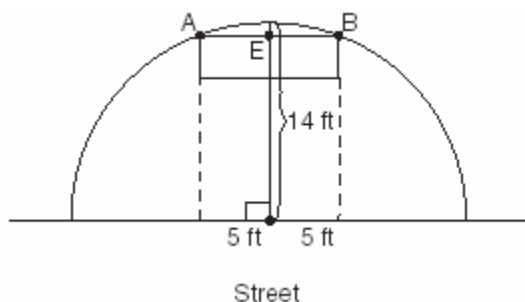
17. Ileana buys a large circular pizza that is divided into eight equal slices. She measures along the outer edge of the crust from one piece and finds it to be  $5\frac{1}{2}$  inches. What is the diameter of the pizza to the *nearest inch*?
- [A] 14      [B] 7      [C] 4      [D] 8

18. Two tow trucks try to pull a car out of a ditch. One tow truck applies a force of 1,500 pounds while the other truck applies a force of 2,000 pounds. The resultant force is 3,000 pounds. Find the angle between the two applied forces, rounded to the *nearest degree*.

19. One force of 20 pounds and one force of 15 pounds act on a body at the same point so that the resultant force is 19 pounds. Find, to the *nearest degree*, the angle between the two original forces.

20. Two equal forces act on a body at an angle of  $80^\circ$ . If the resultant force is 100 newtons, find the value of one of the two equal forces, to the *nearest hundredth of a newton*.

21. The accompanying diagram shows a semicircular arch over a street that has a radius of 14 feet. A banner is attached to the arch at points A and B, such that  $AE = EB = 5$  feet. How many feet above the ground are these points of attachment for the banner?



22. If  $f(x) = 4x^0 + (4x)^{-1}$ , what is the value of  $f(4)$ ?

- [A]  $4\frac{1}{16}$  [B]  $-12$  [C]  $0$  [D]  $1\frac{1}{16}$

23. Which relation is *not* a function?

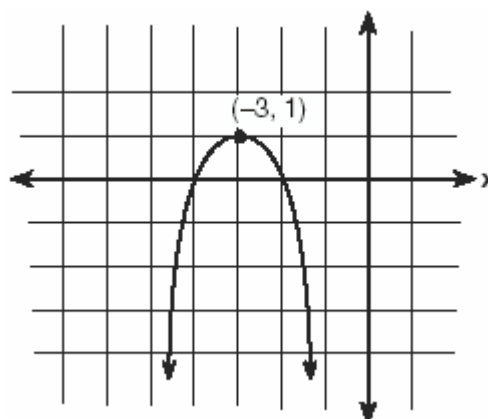
- [A]  $x = 3y - 2$  [B]  $y = x^2 - 4x + 3$   
[C]  $x = y^2 + 2x - 3$  [D]  $y = 2x + 4$

24. A company calculates its profit by finding the difference between revenue and cost. The cost function of producing  $x$  hammers is  $C(x) = 4x + 170$ . If each hammer is sold for \$10, the revenue function for selling  $x$  hammers is  $R(x) = 10x$ .

How many hammers must be sold to make a profit?

How many hammers must be sold to make a profit of \$100?

25. Which equation represents the parabola shown in the accompanying graph?



- [A]  $f(x) = -(x-3)^2 + 1$   
[B]  $f(x) = -(x-3)^2 - 3$   
[C]  $f(x) = (x+1)^2 - 3$   
[D]  $f(x) = -(x+3)^2 + 1$

26. An archer shoots an arrow into the air such that its height at any time,  $t$ , is given by the function  $h(t) = -16t^2 + kt + 3$ . If the maximum height of the arrow occurs at time  $t = 4$ , what is the value of  $k$ ?

- [A] 64 [B] 8 [C] 4 [D] 128

27. What is the turning point, or vertex, of the parabola whose equation is  $y = 3x^2 + 6x - 1$ ?

- [A] (-1,-4)                      [B] (1,8)  
[C] (3,44)                        [D] (-3,8)

28. The height of an object,  $h(t)$ , is determined by the formula  $h(t) = -16t^2 + 256t$ , where  $t$  is time, in seconds. Will the object reach a maximum or a minimum? Explain or show your reasoning.

29. Vanessa throws a tennis ball in the air. The function  $h(t) = -16t^2 + 45t + 7$  represents the distance, in feet, that the ball is from the ground at any time  $t$ . At what time, to the nearest tenth of a second, is the ball at its maximum height?


30. The height,  $h$ , in feet, a ball will reach when thrown in the air is a function of time,  $t$ , in seconds, given by the equation  $h(t) = -16t^2 + 30t + 6$ . Find, to the nearest tenth, the maximum height, in feet, the ball will reach.

31. When a current,  $I$ , flows through a given electrical circuit, the power,  $W$ , of the circuit can be determined by the formula  $W = 120I - 12I^2$ . What amount of current,  $I$ , supplies the maximum power,  $W$ ?

32. The equation  $W = 120I - 12I^2$  represents the power ( $W$ ), in watts, of a 120-volt circuit having a resistance of 12 ohms when a current ( $I$ ) is flowing through the circuit. What is the maximum power, in watts, that can be delivered in this circuit?

33. A baseball player throws a ball from the outfield toward home plate. The ball's height above the ground is modeled by the equation  $y = -16x^2 + 48x + 6$  where  $y$  represents height, in feet, and  $x$  represents time, in seconds. The ball is initially thrown from a height of 6 feet.


How many seconds after the ball is thrown will it again be 6 feet above the ground? What is the maximum height, in feet, that the ball reaches? [The use of the accompanying grid is optional.]



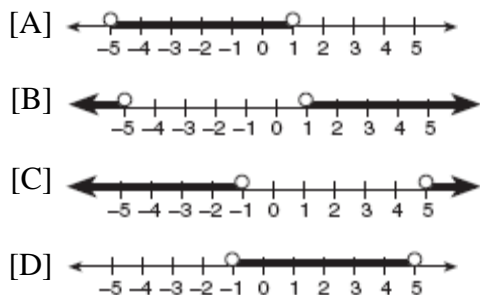
34. When a baseball is hit by a batter, the height of the ball,  $h(t)$ , at time  $t$ ,  $t \geq 0$ , is determined by the equation  $h(t) = -16t^2 + 64t + 4$ . For which interval of time is the height of the ball greater than or equal to 52 feet?



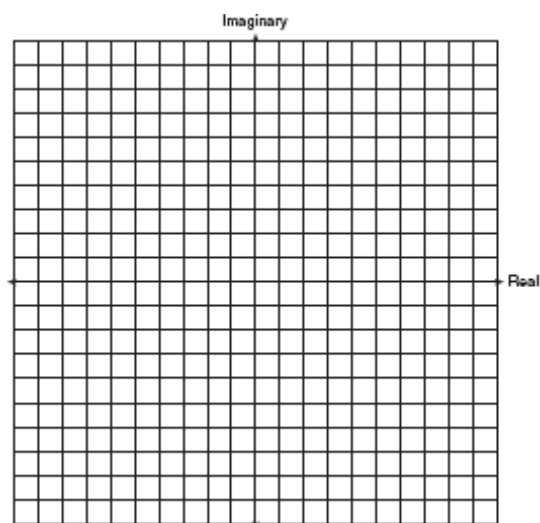
35. The profit,  $P$ , for manufacturing a wireless device is given by the equation  $P = -10x^2 + 750x - 9,000$ , where  $x$  is the selling price, in dollars, for each wireless device. What range of selling prices allows the manufacturer to make a profit on this wireless device? [The use of the grid is optional.]



36. Which graph represents the solution set of the inequality  $x^2 - 4x - 5 < 0$ ?



37. Find the sum of  $-2 + 3i$  and  $-1 - 2i$ . Graph the resultant on the accompanying set of axes.

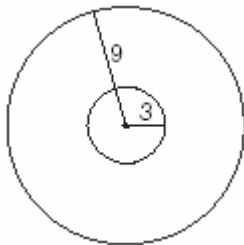


38. The expression  $b^{-\frac{3}{2}}$ ,  $b > 0$ , is equivalent to

- [A]  $(\sqrt[3]{b})^2$                       [B]  $\frac{1}{(\sqrt[3]{b})^2}$
- [C]  $\frac{1}{(\sqrt{b})^3}$                       [D]  $-(\sqrt{b})^3$

39. Meteorologists can determine how long a storm lasts by using the function  $t(d) = 0.07d^{\frac{3}{2}}$ , where  $d$  is the diameter of the storm, in miles, and  $t$  is the time, in hours. If the storm lasts 4.75 hours, find its diameter, to the *nearest tenth of a mile*.

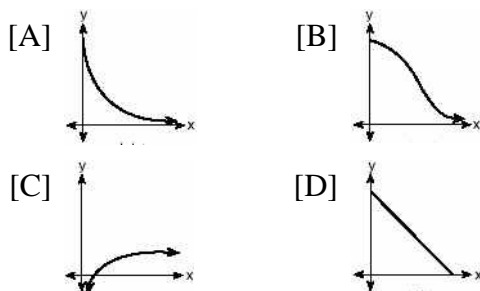
40. As shown in the accompanying diagram, a circular target with a radius of 9 inches has a bull's-eye that has a radius of 3 inches. If five arrows randomly hit the target, what is the probability that *at least* four hit the bull's-eye?




41. Which equation models the data in the accompanying table?

Time in hours, $x$	0	1	2	3	4	5	6
Population, $y$	5	10	20	40	80	160	320


- [A]  $y = 5(2^x)$       [B]  $y = 2x + 5$   
 [C]  $y = 2x$       [D]  $y = 2^x$
42. What is the domain of  $f(x) = 2^x$ ?
- [A]  $x \geq 0$       [B] all integers  
 [C] all real numbers      [D]  $x \leq 0$
43. The strength of a medication over time is represented by the equation  $y = 200(1.5)^{-x}$ , where  $x$  represents the number of hours since the medication was taken and  $y$  represents the number of micrograms per millimeter left in the blood. Which graph best represents this relationship?



44. On January 1, 1999, the price of gasoline was \$1.39 per gallon. If the price of gasoline increased by 0.5% per month, what was the cost of one gallon of gasoline, to the *nearest cent*, on January 1 one year later?
45. The Franklins inherited \$3,500, which they want to invest for their child's future college expenses. If they invest it at 8.25% with interest compounded monthly, determine the value of the account, in dollars, after 5 years. Use the formula  $A = P(1 + \frac{r}{n})^n$ , where  $A$  = value of the investment after  $t$  years,  $P$  = principal invested,  $r$  = annual interest rate, and  $n$  = number of times compounded per year.
46. On the accompanying grid, solve the following system of equations graphically:  
 $y = -x^2 + 2x + 1$   
 $y = 2^x$




47. On the accompanying grid, sketch the graphs of  $y = 2^x$  and  $3y = 7x + 3$  over the interval  $-3 \leq x \leq 4$ . Identify and state the coordinates of all points of intersection.



48. The graphs of the equations  $y = 2^x$  and  $y = -2x + a$  intersect in Quadrant I for which values of  $a$ ?
- [A]  $a \geq 1$                       [B]  $0 < a < 1$   
 [C]  $a > 1$                         [D]  $a < 1$
49. If  $\log_b x = y$ , then  $x$  equals
- [A]  $y \cdot b$     [B]  $y^b$     [C]  $\frac{y}{b}$     [D]  $b^y$
50. For which value of  $x$  is  $y = \log x$  undefined?
- [A]  $\pi$     [B]  $\frac{1}{10}$     [C]  $0$     [D]  $1.483$

51. A hotel finds that its total annual revenue and the number of rooms occupied daily by guests can best be modeled by the function  $R = 3\log(n^2 + 10n)$ ,  $n > 0$ , where  $R$  is the total annual revenue, in millions of dollars, and  $n$  is the number of rooms occupied daily by guests. The hotel needs an annual revenue of \$12 million to be profitable. Graph the function on the accompanying grid over the interval  $0 < n \leq 100$ . Calculate the minimum number of rooms that must be occupied daily to be profitable.



52. Which expression is *not* equivalent to  $\log_b 36$ ?
- [A]  $2\log_b 6$                       [B]  $\log_b 72 - \log_b 2$   
 [C]  $6\log_b 2$                         [D]  $\log_b 9 + \log_b 4$
53. If  $\log a = 2$  and  $\log b = 3$ , what is the numerical value of  $\log \frac{\sqrt{a}}{b^3}$ ?
- [A]  $8$                       [B]  $-25$     [C]  $25$                       [D]  $-8$
54. If  $\log a = x$  and  $\log b = y$ , what is  $\log a\sqrt{b}$ ?
- [A]  $\frac{x+y}{2}$                               [B]  $x + \frac{y}{2}$   
 [C]  $2x+2y$                             [D]  $x+2y$

55. The speed of sound,  $v$ , at temperature  $T$ , in degrees Kelvin, is represented by the equation  $v = 1087\sqrt{\frac{T}{273}}$ . Which expression is equivalent to  $\log v$ ?
- [A]  $\log 1087 + 2\log(T + 273)$   
 [B]  $1087\left(\frac{1}{2}\log T - \frac{1}{2}\log 273\right)$   
 [C]  $1087 + \frac{1}{2}\log T - \log 273$   
 [D]  $\log 1087 + \frac{1}{2}\log T - \frac{1}{2}\log 273$
56. If  $\log k = c\log v + \log p$ ,  $k$  equals
- [A]  $(vp)^c$                       [B]  $v^c + p$   
 [C]  $cv + p$                       [D]  $v^c p$
57. Solve for  $x$ :  $\log_4(x^2 + 3x) - \log_4(x + 5) = 1$
58. In the equation  $\log_x 4 + \log_x 9 = 2$ ,  $x$  is equal to
- [A] 6    [B]  $\sqrt{13}$     [C] 18    [D] 65
59. If  $\log_3 x = 2$ , what is the value of  $\sqrt{x}$ ?
- [A] 25    [B] 5    [C]  $2^{\frac{2}{5}}$     [D]  $\sqrt{5}$
60. The relationship between the relative size of an earthquake,  $S$ , and the measure of the earthquake on the Richter scale,  $R$ , is given by the equation  $\log S = R$ . If an earthquake measured 3.2 on the Richter scale, what was its relative size to the *nearest hundredth*?
61. The magnitude ( $R$ ) of an earthquake is related to its intensity ( $I$ ) by  $R = \log\left(\frac{I}{T}\right)$ , where  $T$  is the threshold below which the earthquake is not noticed. If the intensity is doubled, its magnitude can be represented by
- [A]  $2(\log I - \log T)$   
 [B]  $\log 2 + \log I - \log T$   
 [C]  $\log I - \log T$               [D]  $2 \log I - \log T$
62. The scientists in a laboratory company raise amebas to sell to schools for use in biology classes. They know that one ameba divides into two amebas every hour and that the formula  $t = \log_2 N$  can be used to determine how long in hours,  $t$ , it takes to produce a certain number of amebas,  $N$ . Determine, to the *nearest tenth of an hour*, how long it takes to produce 10,000 amebas if they start with one ameba.
63. Solve for  $x$ :  $\log_2(x + 1) = 3$
64. What is the value of  $x$  in the equation  $81^{x+2} = 27^{5x+4}$ ?
- [A]  $-\frac{2}{11}$                       [B]  $-\frac{3}{2}$   
 [C]  $-\frac{4}{11}$                       [D]  $\frac{4}{11}$
65. The growth of bacteria in a dish is modeled by the function  $f(t) = 2^{\frac{t}{3}}$ . For which value of  $t$  is  $f(t) = 32$ ?
- [A] 8              [B] 16              [C] 15              [D] 2

66. Depreciation (the decline in cash value) on a car can be determined by the formula  $V = C(1 - r)^t$ , where  $V$  is the value of the car after  $t$  years,  $C$  is the original cost, and  $r$  is the rate of depreciation. If a car's cost, when new, is \$15,000, the rate of depreciation is 30%, and the value of the car now is \$3,000, how old is the car to the *nearest tenth of a year*?

67. Growth of a certain strain of bacteria is modeled by the equation  $G = A(2.7)^{0.584t}$ , where:  
 $G$  = final number of bacteria  
 $A$  = initial number of bacteria  
 $t$  = time (in hours)  
 In approximately how many hours will 4 bacteria first increase to 2,500 bacteria? Round your answer to the *nearest hour*.


68. The equation for radioactive decay is  $p = (0.5)^{\frac{t}{H}}$ , where  $p$  is the part of a substance with half-life  $H$  remaining radioactive after a period of time,  $t$ . A given substance has a half-life of 6,000 years. After  $t$  years, one-fifth of the original sample remains radioactive. Find  $t$ , to the *nearest thousand years*.

69. An archaeologist can determine the approximate age of certain ancient specimens by measuring the amount of carbon-14, a radioactive substance, contained in the specimen. The formula used to determine the age of a specimen is  $A = A_0 2^{\frac{-t}{5760}}$ , where  $A$  is the amount of carbon-14 that a specimen contains,  $A_0$  is the original amount of carbon-14,  $t$  is time, in years, and 5760 is the half-life of carbon-14.  
 A specimen that originally contained 120 milligrams of carbon-14 now contains 100 milligrams of this substance. What is the age of the specimen, to the *nearest hundred years*?


70. An amount of  $P$  dollars is deposited in an account paying an annual interest rate  $r$  (as a decimal) compounded  $n$  times per year. After  $t$  years, the amount of money in the account, in dollars, is given by the equation

$$A = P\left(1 + \frac{r}{n}\right)^{nt}$$

Rachel deposited \$1,000 at 2.8% annual interest, compounded monthly. In how many years, to the *nearest tenth of a year*, will she have \$2,500 in the account? [The use of the grid is optional.]



71. The current population of Little Pond, New York, is 20,000. The population is *decreasing*, as represented by the formula  $P = A(1.3)^{-0.234t}$ , where  $P$  = final population,  $t$  = time, in years, and  $A$  = initial population. What will the population be 3 years from now? Round your answer to the *nearest hundred people*. To the *nearest tenth of a year*, how many years will it take for the population to reach half the present population? [The use of the grid is optional.]



72. Explain how a person can determine if a set of data represents inverse variation and give an example using a table of values.
73. If  $R$  varies inversely as  $S$ , when  $S$  is doubled,  $R$  is multiplied by  
 [A] 2      [B] 4      [C]  $\frac{1}{4}$       [D]  $\frac{1}{2}$
74. To balance a seesaw, the distance, in feet, a person is from the fulcrum is inversely proportional to the person's weight, in pounds. Bill, who weighs 150 pounds, is sitting 4 feet away from the fulcrum. If Dan weighs 120 pounds, how far from the fulcrum should he sit to balance the seesaw?  
 [A] 4.5 ft    [B] 5 ft    [C] 3.5 ft    [D] 3 ft

75. For a rectangular garden with a fixed area, the length of the garden varies inversely with the width. Which equation represents this situation for an area of 36 square units?  
 [A]  $y = 36x$       [B]  $y = \frac{36}{x}$   
 [C]  $x + y = 36$       [D]  $x - y = 36$
76. When air is pumped into an automobile tire, the pressure is inversely proportional to the volume. If the pressure is 35 pounds when the volume is 120 cubic inches, what is the pressure, in pounds, when the volume is 140 cubic inches?
77. A pulley that has a diameter of 8 inches is belted to a pulley that has a diameter of 12 inches. The 8-inch-diameter pulley is running at 1,548 revolutions per minute. If the speeds of the pulleys vary inversely to their diameters, how many revolutions per minute does the larger pulley make?
78. Boyle's Law states that the pressure of compressed gas is inversely proportional to its volume. The pressure of a certain sample of a gas is 16 kilopascals when its volume is 1,800 liters. What is the pressure, in kilopascals, when its volume is 900 liters?
79. The time it takes to travel to a location varies inversely to the speed traveled. It takes 4 hours driving at an average speed of 55 miles per hour to reach a location. To the *nearest tenth of an hour*, how long will it take to reach the same location driving at an average speed of 50 miles per hour?

80. The speed of a laundry truck varies inversely with the time it takes to reach its destination. If the truck takes 3 hours to reach its destination traveling at a constant speed of 50 miles per hour, how long will it take to reach the same location when it travels at a constant speed of 60 miles per hour?

- [A]  $2\frac{2}{3}$  hours      [B] 2 hours  
[C]  $2\frac{1}{2}$  hours      [D]  $2\frac{1}{3}$  hours

81. In a given rectangle, the length varies inversely as the width. If the length is doubled, the width will

- [A] be multiplied by 2  
[B] increase by 2      [C] remain the same  
[D] be divided by 2

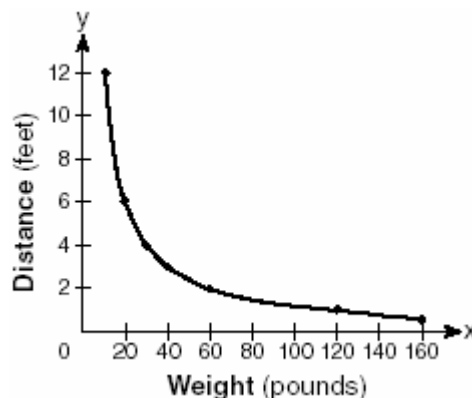
82. Camisha is paying a band \$330 to play at her graduation party. The amount each member earns,  $d$ , varies inversely as the number of members who play,  $n$ . The graph of the equation that represents the relationship between  $d$  and  $n$  is an example of

- [A] a line      [B] a parabola  
[C] a hyperbola      [D] an ellipse

83. According to Boyle's Law, the pressure,  $p$ , of a compressed gas is inversely proportional to the volume,  $v$ . If a pressure of 20 pounds per square inch exists when the volume of the gas is 500 cubic inches, what is the pressure when the gas is compressed to 400 cubic inches?

- [A] 25 lb/in<sup>2</sup>      [B] 16 lb/in<sup>2</sup>  
[C] 40 lb/in<sup>2</sup>      [D] 50 lb/in<sup>2</sup>

84. The accompanying graph shows the relationship between a person's weight and the distance that the person must sit from the center of a seesaw to make it balanced.



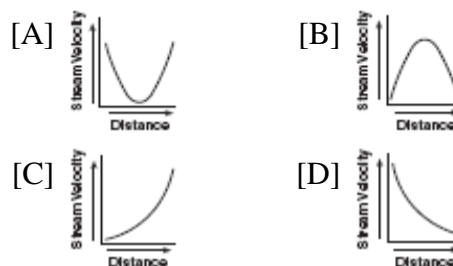
Which equation best represents this graph?

- [A]  $y = 2 \log x$       [B]  $y = -120x$   
[C]  $y = 12x^2$       [D]  $y = \frac{120}{x}$

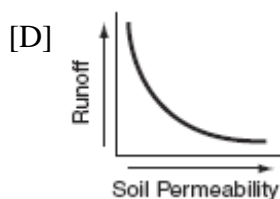
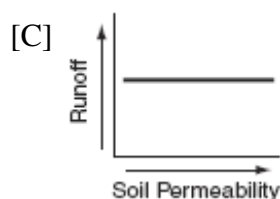
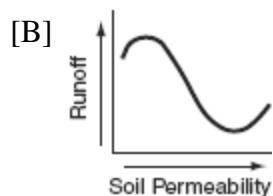
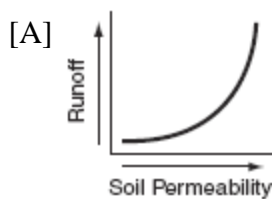
85. Which equation represents a hyperbola?

- [A]  $y^2 = 16 - x^2$       [B]  $y = \frac{16}{x}$   
[C]  $y = 16 - x^2$       [D]  $y = 16x^2$

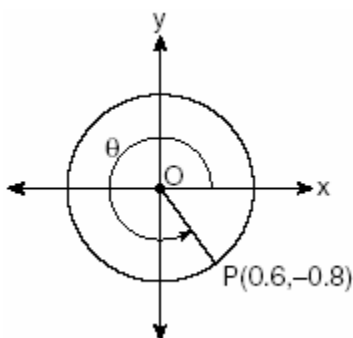
86. Which graph represents an inverse variation between stream velocity and the distance from the center of the stream?



87. Which graph shows that soil permeability varies inversely to runoff?



88. In the accompanying diagram, point  $P(0.6, -0.8)$  is on unit circle  $O$ . What is the value of  $\theta$ , to the nearest degree?



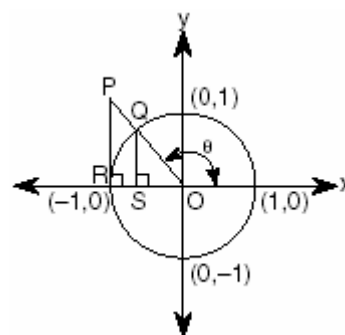
89. If  $\sin \theta$  is negative and  $\cos \theta$  is negative, in which quadrant does the terminal side of  $\theta$  lie?

[A] IV [B] II [C] I [D] III

90. Expressed as a function of a positive acute angle,  $\sin(-230^\circ)$  is equal to

[A]  $\cos 50^\circ$  [B]  $-\sin 50^\circ$   
[C]  $\sin 50^\circ$  [D]  $-\cos 50^\circ$

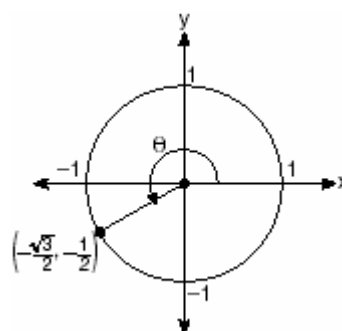
91. In the accompanying diagram,  $\overline{PR}$  is tangent to circle  $O$  at  $R$ ,  $\overline{QS} \perp \overline{OR}$ , and  $\overline{PR} \perp \overline{OR}$ .



Which measure represents  $\sin \theta$ ?

[A] QS [B] SO [C] PR [D] RO

92. In the accompanying diagram of a unit circle, the ordered pair  $(-\frac{\sqrt{3}}{2}, -\frac{1}{2})$  represents the point where the terminal side of  $\theta$  intersects the unit circle.



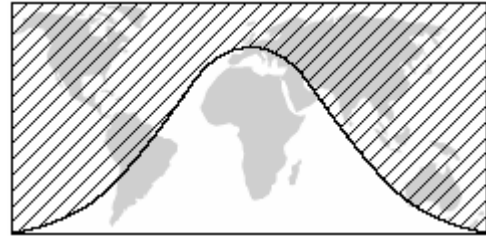
What is  $m\angle \theta$ ?

[A] 233 [B] 225 [C] 240 [D] 210



93. If  $\theta$  is an angle in standard position and  $P(-3,4)$  is a point on the terminal side of  $\theta$ , what is the value of  $\sin \theta$ ?
- [A]  $\frac{4}{5}$     [B]  $\frac{3}{5}$     [C]  $-\frac{4}{5}$     [D]  $-\frac{3}{5}$
94. Through how many radians does the minute hand of a clock turn in 24 minutes?
- [A]  $0.6\pi$                       [B]  $0.2\pi$   
[C]  $0.8\pi$                       [D]  $0.4\pi$
95. A wedge-shaped piece is cut from a circular pizza. The radius of the pizza is 6 inches. The rounded edge of the crust of the piece measures 4.2 inches. To the *nearest tenth*, the angle of the pointed end of the piece of pizza, in radians, is
- [A] 1.4    [B] 25.2    [C] 7.0    [D] 0.7

97. The shaded portion of the accompanying map indicates areas of night, and the unshaded portion indicates areas of daylight at a particular moment in time.



Which type of function best represents the curve that divides the area of night from the area of daylight?

- [A] logarithmic                      [B] quadratic  
[C] tangent                              [D] cosine

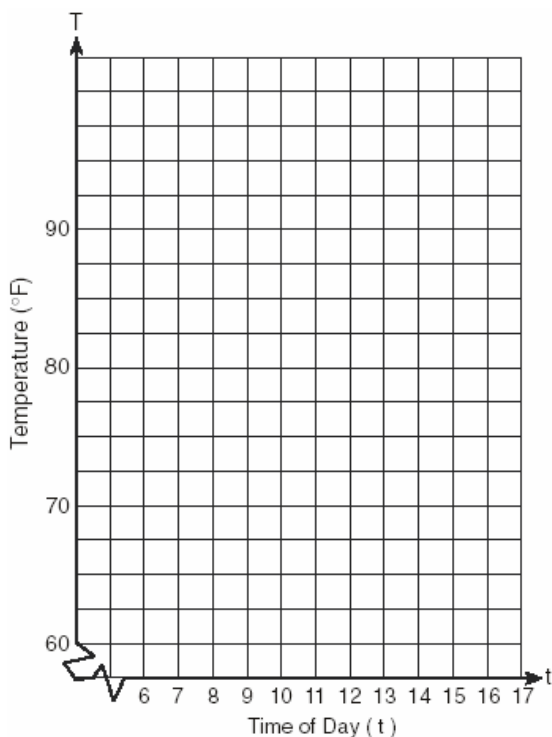
96. A student attaches one end of a rope to a wall at a fixed point 3 feet above the ground, as shown in the accompanying diagram, and moves the other end of the rope up and down, producing a wave described by the equation  $y = a \sin bx + c$ . The range of the rope's height above the ground is between 1 and 5 feet. The period of the wave is  $4\pi$ . Write the equation that represents this wave.




98. A building's temperature,  $T$ , varies with time of day,  $t$ , during the course of 1 day, as follows:

$$T = 8 \cos t + 78$$

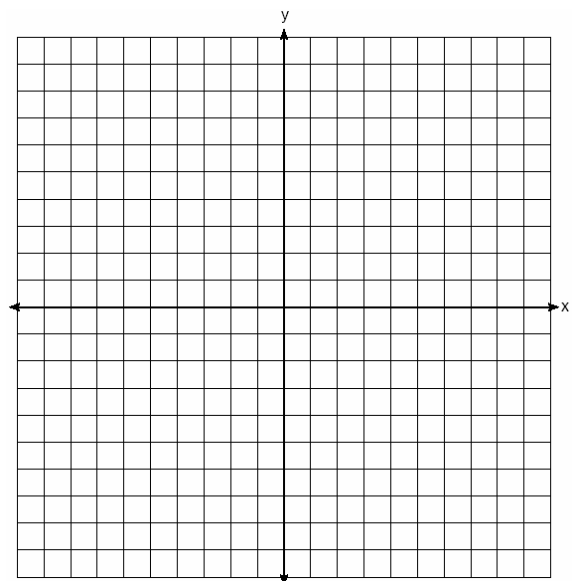
The air-conditioning operates when  $T \geq 80^\circ F$ . Graph this function for  $6 \leq t < 17$  and determine, to the *nearest tenth of an hour*, the amount of time in 1 day that the air-conditioning is on in the building.



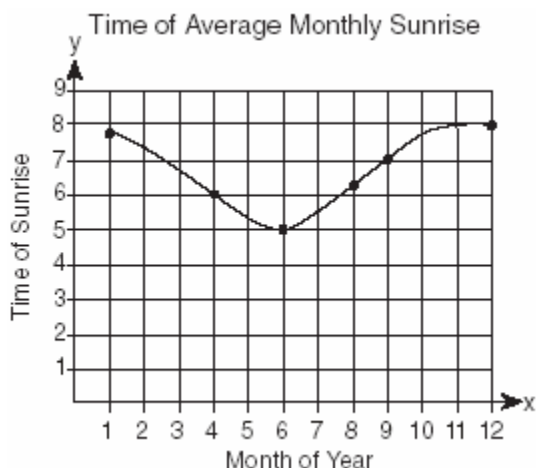
99. The tide at a boat dock can be modeled by the equation  $y = -2 \cos\left(\frac{\pi}{6}t\right) + 8$ , where  $t$  is the number of hours past noon and  $y$  is the height of the tide, in feet. For how many hours between  $t = 0$  and  $t = 12$  is the tide at least 7 feet? [The use of the grid is optional.]



100. On the accompanying set of axes, graph the equations  $y = 4 \cos x$  and  $y = 2$  in the domain  $-\pi \leq x \leq \pi$ . Express, in terms of  $\pi$ , the interval for which  $4 \cos x \geq 2$ .

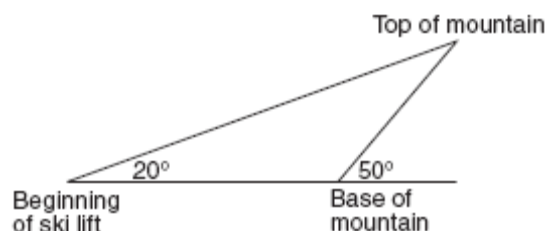


101. The times of average monthly sunrise, as shown in the accompanying diagram, over the course of a 12-month interval can be modeled by the equation  $y = A \cos(Bx) + D$ . Determine the values of  $A$ ,  $B$ , and  $D$ , and explain how you arrived at your values.

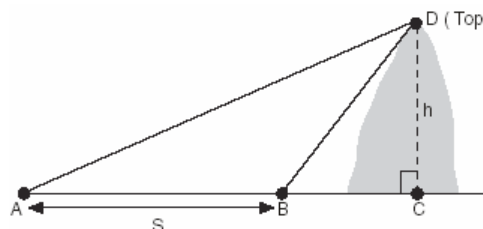


102. A ship at sea is 70 miles from one radio transmitter and 130 miles from another. The angle between the signals sent to the ship by the transmitters is  $117.4^\circ$ . Find the distance between the two transmitters, to the nearest mile.
103. A wooden frame is to be constructed in the form of an isosceles trapezoid, with diagonals acting as braces to strengthen the frame. The sides of the frame each measure 5.30 feet, and the longer base measures 12.70 feet. If the angles between the sides and the longer base each measure  $68.4^\circ$ , find the length of one brace to the nearest tenth of a foot.
104. A ship captain at sea uses a sextant to sight an angle of elevation of  $37^\circ$  to the top of a lighthouse. After the ship travels 250 feet directly toward the lighthouse, another sighting is made, and the new angle of elevation is  $50^\circ$ . The ship's charts show that there are dangerous rocks 100 feet from the base of the lighthouse. Find, to the nearest foot, how close to the rocks the ship is at the time of the second sighting.

105. A ski lift begins at ground level 0.75 mile from the base of a mountain whose face has a  $50^\circ$  angle of elevation, as shown in the accompanying diagram. The ski lift ascends in a straight line at an angle of  $20^\circ$ . Find the length of the ski lift from the beginning of the ski lift to the top of the mountain, to the nearest hundredth of a mile.



106. A ship at sea heads directly toward a cliff on the shoreline. The accompanying diagram shows the top of the cliff,  $D$ , sighted from two locations,  $A$  and  $B$ , separated by distance  $S$ . If  $m\angle DAC = 30^\circ$ ,  $m\angle DBC = 45^\circ$ , and  $S = 30$  feet, what is the height of the cliff, to the nearest foot?



107. The center of a circular sunflower with a diameter of 4 centimeters is  $(-2, 1)$ . Which equation represents the sunflower?
- [A]  $(x - 2)^2 + (y - 1)^2 = 4$
- [B]  $(x - 2)^2 + (y + 1)^2 = 2$
- [C]  $(x + 2)^2 + (y - 1)^2 = 4$
- [D]  $(x + 2)^2 + (y - 1)^2 = 2$

108. What is the equation of a circle with center  $(-3, 1)$  and radius 7?

[A]  $(x + 3)^2 + (y - 1)^2 = 49$

[B]  $(x - 3)^2 + (y + 1)^2 = 49$

[C]  $(x + 3)^2 + (y - 1)^2 = 7$

[D]  $(x - 3)^2 + (y + 1)^2 = 7$

109. A circle has the equation  $(x + 1)^2 + (y - 3)^2 = 16$ . What are the coordinates of its center and the length of its radius?

[A]  $(1, -3)$  and 4      [B]  $(-1, 3)$  and 4

[C]  $(-1, 3)$  and 16      [D]  $(1, -3)$  and 16

110. What are the coordinates of the center of the circle represented by the equation

$(x + 3)^2 + (y - 4)^2 = 25$ ?

[A]  $(-3, -4)$       [B]  $(3, -4)$

[C]  $(3, 4)$       [D]  $(-3, 4)$

111. The center of a circle represented by the equation  $(x - 2)^2 + (y + 3)^2 = 100$  is located in Quadrant

[A] II      [B] IV      [C] III      [D] I

112. A commercial artist plans to include an ellipse in a design and wants the length of the horizontal axis to equal 10 and the length of the vertical axis to equal 6. Which equation could represent this ellipse?

[A]  $3y = 20x^2$       [B]  $9x^2 + 25y^2 = 225$

[C]  $9x^2 - 25y^2 = 225$

[D]  $x^2 + y^2 = 100$

113. Which equation, when graphed on a Cartesian coordinate plane, would best represent an elliptical racetrack?

[A]  $30xy = 288,000$

[B]  $3x^2 + 10y^2 = 288,000$

[C]  $3x^2 - 10y^2 = 288,000$

[D]  $3x + 10y = 288,000$

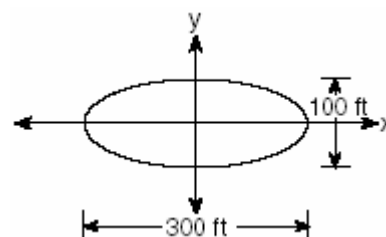
114. An object orbiting a planet travels in a path represented by the equation

$3(y + 1)^2 + 5(x + 4)^2 = 15$ . In which type of pattern does the object travel?

[A] circle      [B] hyperbola

[C] ellipse      [D] parabola

115. The accompanying diagram represents the elliptical path of a ride at an amusement park.



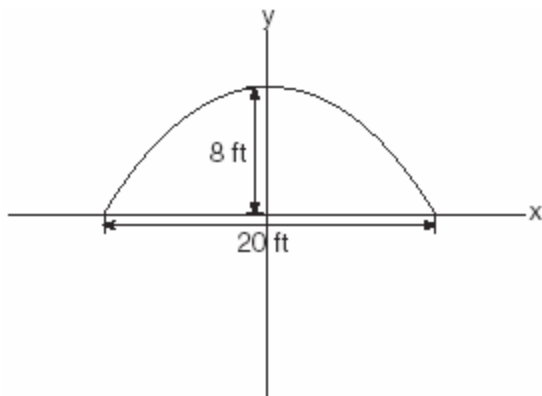
Which equation represents this path?

[A]  $x^2 + y^2 = 300$       [B]  $\frac{x^2}{150^2} - \frac{y^2}{50^2} = 1$

[C]  $\frac{x^2}{150^2} + \frac{y^2}{50^2} = 1$

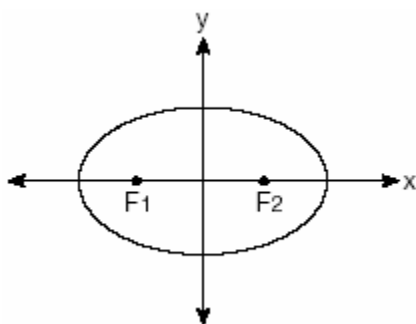
[D]  $y = x^2 + 100x + 300$

116. An architect is designing a building to include an arch in the shape of a semi-ellipse (half an ellipse), such that the width of the arch is 20 feet and the height of the arch is 8 feet, as shown in the accompanying diagram.



Which equation models this arch?

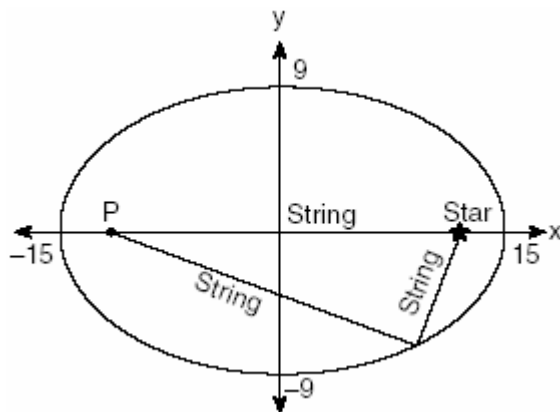
- [A]  $\frac{x^2}{400} + \frac{y^2}{64} = 1$       [B]  $\frac{x^2}{64} + \frac{y^2}{400} = 1$   
 [C]  $\frac{x^2}{100} + \frac{y^2}{64} = 1$       [D]  $\frac{x^2}{64} + \frac{y^2}{100} = 1$
117. The accompanying diagram shows the elliptical orbit of a planet. The foci of the elliptical orbit are  $F_1$  and  $F_2$ .



If  $a$ ,  $b$ , and  $c$  are all positive and  $a \neq b \neq c$ , which equation could represent the path of the planet?

- [A]  $ax^2 - by^2 = c^2$       [B]  $ax^2 + by^2 = c^2$   
 [C]  $y = ax^2 + c^2$       [D]  $x^2 + y^2 = c^2$

118. The accompanying diagram shows the construction of a model of an elliptical orbit of a planet traveling around a star. Point  $P$  and the center of the star represent the foci of the orbit.

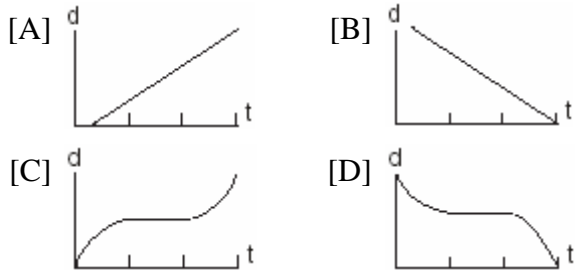


Which equation could represent the relation shown?

- [A]  $\frac{x^2}{15} + \frac{y^2}{9} = 1$       [B]  $\frac{x^2}{225} + \frac{y^2}{81} = 1$   
 [C]  $\frac{x^2}{81} + \frac{y^2}{225} = 1$       [D]  $\frac{x^2}{15} - \frac{y^2}{9} = 1$
119. Solve the following system of equations algebraically:

$$\begin{aligned} 9x^2 + y^2 &= 9 \\ 3x - y &= 3 \end{aligned}$$

1. A bug travels up a tree, from the ground, over a 30-second interval. It travels fast at first and then slows down. It stops for 10 seconds, then proceeds slowly, speeding up as it goes. Which sketch best illustrates the bug's distance ( $d$ ) from the ground over the 30-second interval ( $t$ )?



2. On her first trip, Sari biked 24 miles in  $T$  hours. The following week Sari biked 32 miles in  $T$  hours. Determine the ratio of her average speed on her second trip to her average speed on her first trip.

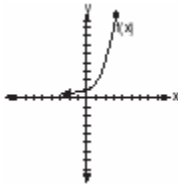
- [A]  $\frac{4}{3}$     [B]  $\frac{2}{3}$     [C]  $\frac{3}{2}$     [D]  $\frac{3}{4}$

3. In a mathematics class of ten students, the teacher wanted to determine how a homework grade influenced a student's performance on the subsequent test. The homework grade and subsequent test grade for each student are given in the accompanying table.

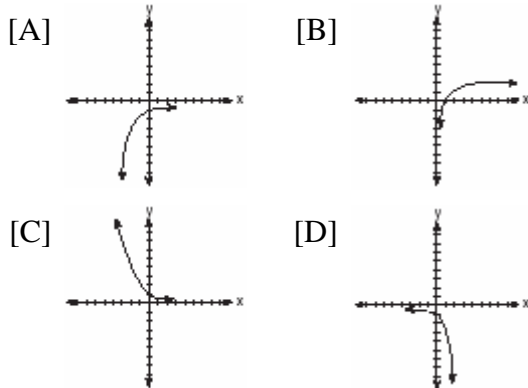
Homework Grade ( $x$ )	Test Grade ( $y$ )
94	98
95	94
92	95
87	89
82	85
80	78
75	73
65	67
50	45
20	40

- a Give the equation of the linear regression line for this set of data.  
b A new student comes to the class and earns a homework grade of 78. Based on the equation in part *a*, what grade would the teacher predict the student would receive on the subsequent test, to the *nearest integer*?

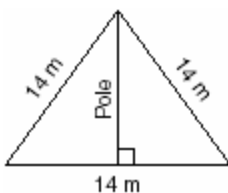
4. The graph of  $f(x)$  is shown in the accompanying diagram.



Which graph represents  $f(x)$  on the  $x$ -axis or  $y$ -axis?



5. The accompanying diagram shows two cables of equal length supporting a pole. Both cables are 14 meters long, and they are anchored to points in the ground that are 14 meters apart.



What is the exact height of the pole, in meters?

- [A]  $7\sqrt{3}$  [B] 7 [C] 14 [D]  $7\sqrt{2}$

6. An architect commissions a contractor to produce a triangular window. The architect describes the window as  $\triangle ABC$ , where  $m\angle A = 50$ ,  $BC = 10$  inches, and  $AB = 12$  inches. How many distinct triangles can the contractor construct using these dimensions?

- [A] more than 2 [B] 2 [C] 0 [D] 1

7. Sam is designing a triangular piece for a metal sculpture. He tells Martha that two of the sides of the piece are 40 inches and 15 inches, and the angle opposite the 40-inch side measures  $120^\circ$ . Martha decides to sketch the piece that Sam described. How many different triangles can she sketch that match Sam's description?

- [A] 0 [B] 2 [C] 1 [D] 3

8. How many distinct triangles can be formed if  $m\angle A = 30$ , side  $b = 12$ , and side  $a = 8$ ?

- [A] 2 [B] 0 [C] 1 [D] 3

9. A landscape designer is designing a triangular garden with two sides that are 4 feet and 6 feet, respectively. The angle opposite the 4-foot side is  $30^\circ$ . How many distinct triangular gardens can the designer make using these measurements?

10. Main Street and Central Avenue intersect, making an angle measuring  $34^\circ$ . Angela lives at the intersection of the two roads, and Caitlin lives on Central Avenue 10 miles from the intersection. If Leticia lives 7 miles from Caitlin, which conclusion is valid?

- [A] Leticia can live at one of three locations on Main Street.  
[B] Leticia cannot live on Main Street.  
[C] Leticia can live at one of two locations on Main Street.  
[D] Leticia can live at only one location on Main Street.

11. In  $\triangle ABC$ , if  $AC = 12$ ,  $BC = 11$ , and  $m\angle A = 30$ , angle  $C$  could be

- [A] either an obtuse angle or an acute angle  
[B] an obtuse angle, only  
[C] an acute angle, only  
[D] a right angle, only

12. What is the total number of distinct triangles that can be constructed if  $AC = 13$ ,  $BC = 8$ , and  $m\angle A = 36^\circ$ ?

[A] 3 [B] 0 [C] 2 [D] 1

13. Sam needs to cut a triangle out of a sheet of paper. The only requirements that Sam must follow are that one of the angles must be  $60^\circ$ , the side opposite the  $60^\circ$  angle must be 40 centimeters, and one of the other sides must be 15 centimeters. How many different triangles can Sam make?

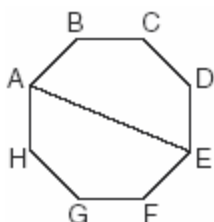
[A] 2 [B] 0 [C] 3 [D] 1

14. A homeowner wants to increase the size of a rectangular deck that now measures 15 feet by 20 feet, but building code laws state that a homeowner cannot have a deck larger than 900 square feet. If the length and the width are to be increased by the same amount, find, to the *nearest tenth*, the maximum number of feet that the length of the deck may be increased in size legally.

15. A garden in the shape of an equilateral triangle has sides whose lengths are 10 meters. What is the area of the garden?

[A]  $25\sqrt{3} m^2$  [B]  $50\sqrt{3} m^2$   
[C]  $50 m^2$  [D]  $25 m^2$

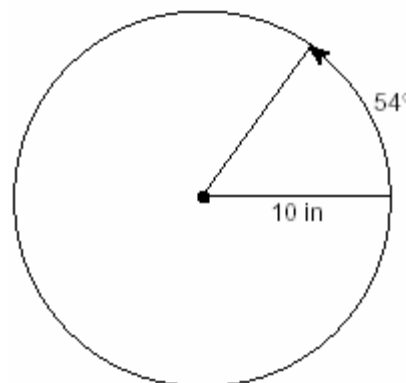
16. A picnic table in the shape of a regular octagon is shown in the accompanying diagram. If the length of  $\overline{AE}$  is 6 feet, find the length of one side of the table to the *nearest tenth of a foot*, and find the area of the table's surface to the *nearest tenth of a square foot*.



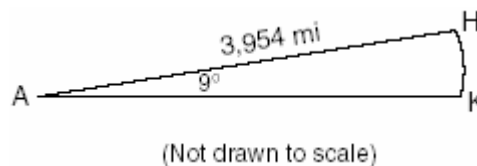
17. Every time the pedals go through a  $360^\circ$  rotation on a certain bicycle, the tires rotate three times. If the tires are 24 inches in diameter, what is the minimum number of complete rotations of the pedals needed for the bicycle to travel at least 1 mile?

[A] 281 [B] 5,280 [C] 12 [D] 561

18. A ball is rolling in a circular path that has a radius of 10 inches, as shown in the accompanying diagram. What distance has the ball rolled when the subtended arc is  $54^\circ$ ? Express your answer to the *nearest hundredth of an inch*.

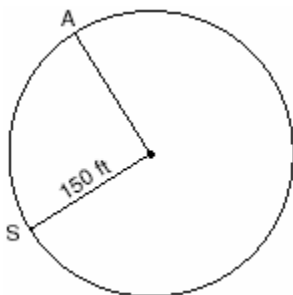


19. Cities  $H$  and  $K$  are located on the same line of longitude and the difference in the latitude of these cities is  $9^\circ$ , as shown in the accompanying diagram. If Earth's radius is 3,954 miles, how many miles north of city  $K$  is city  $H$  along arc  $HK$ ? Round your answer to the *nearest tenth of a mile*.

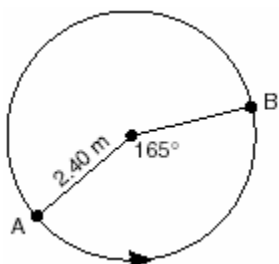




20. Kathy and Tami are at point  $A$  on a circular track that has a radius of 150 feet, as shown in the accompanying diagram. They run counterclockwise along the track from  $A$  to  $S$ , a distance of 247 feet. Find, to the *nearest degree*, the measure of minor arc  $AS$ .

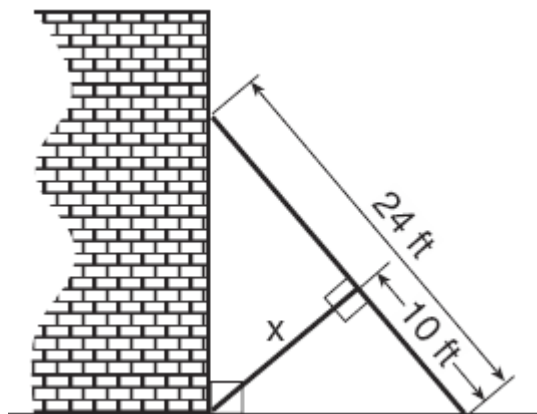


21. The accompanying diagram shows the path of a cart traveling on a circular track of radius 2.40 meters. The cart starts at point  $A$  and stops at point  $B$ , moving in a counterclockwise direction. What is the length of minor arc  $AB$ , over which the cart traveled, to the *nearest tenth of a meter*?



22. The circumference of a circular plot of land is increased by 10%. What is the best estimate of the total percentage that the area of the plot increased?
- [A] 21%                      [B] 10%  
[C] 25%                      [D] 31%

23. The accompanying diagram shows a 24-foot ladder leaning against a building. A steel brace extends from the ladder to the point where the building meets the ground. The brace forms a right angle with the ladder.

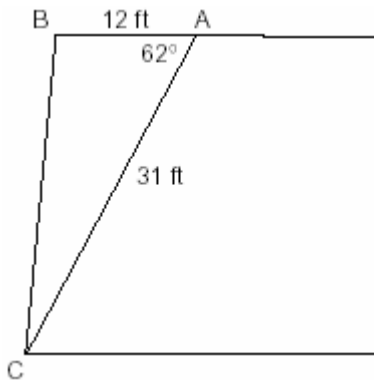


If the steel brace is connected to the ladder at a point that is 10 feet from the foot of the ladder, which equation can be used to find the length,  $x$ , of the steel brace?

- [A]  $10^2 + x^2 = 24^2$       [B]  $10^2 + x^2 = 14^2$   
[C]  $\frac{10}{x} = \frac{x}{24}$               [D]  $\frac{10}{x} = \frac{x}{14}$

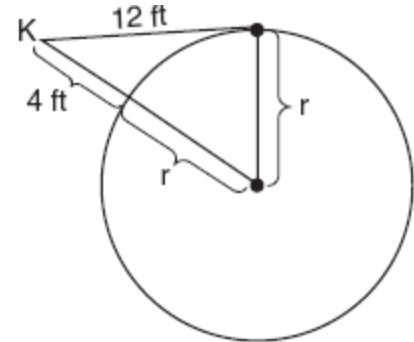
24. Gregory wants to build a garden in the shape of an isosceles triangle with one of the congruent sides equal to 12 yards. If the area of his garden will be 55 square yards, find, to the *nearest tenth of a degree*, the *three* angles of the triangle.

25. The accompanying diagram shows the floor plan for a kitchen. The owners plan to carpet all of the kitchen except the "work space," which is represented by scalene triangle  $ABC$ . Find the area of this work space to the *nearest tenth of a square foot*.



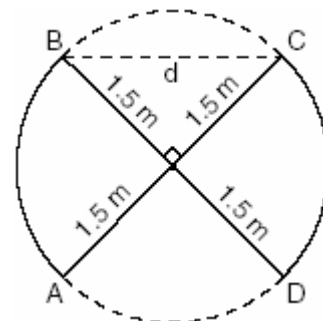
26. Two sides of a triangular-shaped pool measure 16 feet and 21 feet, and the included angle measures  $58^\circ$ . What is the area, to the *nearest tenth of a square foot*, of a nylon cover that would exactly cover the surface of the pool?
27. The triangular top of a table has two sides of 14 inches and 16 inches, and the angle between the sides is  $30^\circ$ . Find the area of the tabletop, in square inches.
28. A landscape architect is designing a triangular garden to fit in the corner of a lot. The corner of the lot forms an angle of  $70^\circ$ , and the sides of the garden including this angle are to be 11 feet and 13 feet, respectively. Find, to the *nearest integer*, the number of square feet in the area of the garden.

29. Kimi wants to determine the radius of a circular pool without getting wet. She is located at point  $K$ , which is 4 feet from the pool and 12 feet from the point of tangency, as shown in the accompanying diagram.



What is the radius of the pool?

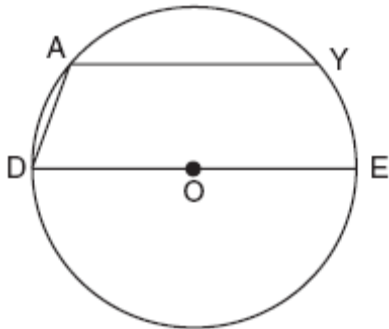
- [A]  $4\sqrt{10}$  ft      [B] 32 ft  
[C] 16 ft              [D] 20 ft
30. An overhead view of a revolving door is shown in the accompanying diagram. Each panel is 1.5 meters wide.



What is the approximate width of  $d$ , the opening from  $B$  to  $C$ ?

- [A] 1.73 m              [B] 3.00 m  
[C] 2.12 m              [D] 1.50 m

31. In the accompanying diagram of circle  $O$ , chord  $\overline{AY}$  is parallel to diameter  $\overline{DOE}$ ,  $\overline{AD}$  is drawn, and  $m\widehat{AD} = 40$ .

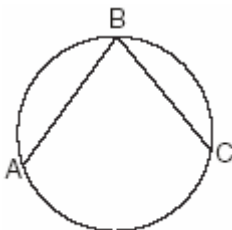


What is  $m\angle DAY$ ?

- [A] 90 [B] 150 [C] 130 [D] 110

32. A toy truck is located within a circular play area. Alex and Dominic are sitting on opposite endpoints of a chord that contains the truck. Alex is 4 feet from the truck, and Dominic is 3 feet from the truck. Meira and Tamara are sitting on opposite endpoints of another chord containing the truck. Meira is 8 feet from the truck. How many feet, to the nearest tenth of a foot, is Tamara from the truck? Draw a diagram to support your answer.

33. In the accompanying diagram, the length of  $\widehat{ABC}$  is  $\frac{3\pi}{2}$  radians.

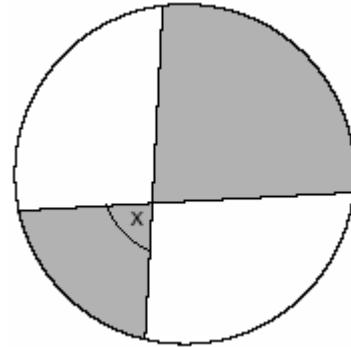


(Not drawn to scale)

What is  $m\angle ABC$ ?

- [A] 45 [B] 36 [C] 53 [D] 72

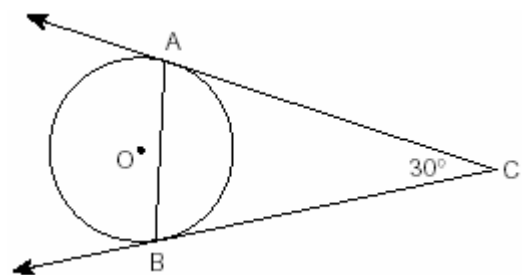
34. The accompanying diagram shows a child's spin toy that is constructed from two chords intersecting in a circle. The curved edge of the larger shaded section is one-quarter of the circumference of the circle, and the curved edge of the smaller shaded section is one-fifth of the circumference of the circle.



What is the measure of angle  $x$ ?

- [A]  $108^\circ$  [B]  $72^\circ$  [C]  $81^\circ$  [D]  $40^\circ$

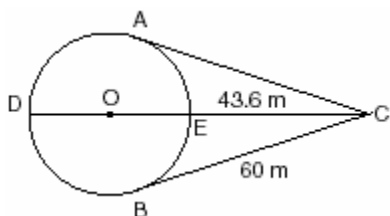
35. The accompanying diagram represents circular pond  $O$  with docks located at points  $A$  and  $B$ . From a cabin located at  $C$ , two sightings are taken that determine an angle of  $30^\circ$  for tangents  $\overline{CA}$  and  $\overline{CB}$ .



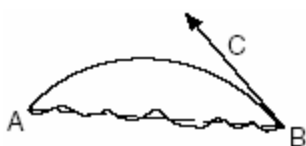
What is  $m\angle CAB$ ?

- [A] 30 [B] 75 [C] 150 [D] 60

36. An architect is designing a park with an entrance represented by point  $C$  and a circular garden with center  $O$ , as shown in the accompanying diagram. The architect plans to connect three points on the circumference of the garden,  $A$ ,  $B$ , and  $D$ , to the park entrance,  $C$ , with walkways so that walkways  $\overline{CA}$  and  $\overline{CB}$  are tangent to the garden, walkway  $\overline{DOEC}$  is a path through the center of the garden,  $m\widehat{ADB} : m\widehat{AEB} = 3 : 2$ ,  $BC = 60$  meters, and  $EC = 43.6$  meters. Find the measure of the angle between walkways  $\overline{CA}$  and  $\overline{CB}$ . Find the diameter of the circular garden, to the nearest meter.



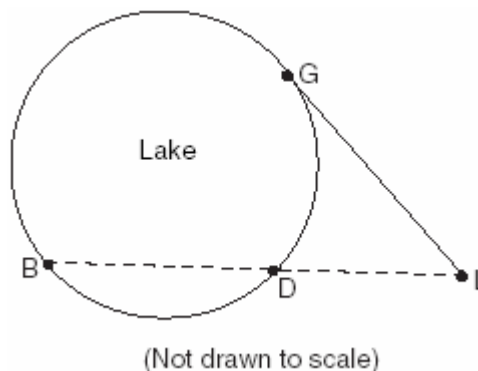
37. A small fragment of something brittle, such as pottery, is called a shard. The accompanying diagram represents the outline of a shard from a small round plate that was found at an archaeological dig.



If  $\overline{BC}$  is a tangent to  $\widehat{AC}$  at  $B$  and  $m\angle ABC = 45$ , what is the measure of  $\widehat{AC}$ , the outside edge of the shard?

- [A]  $225^\circ$                       [B]  $135^\circ$   
[C]  $90^\circ$                         [D]  $45^\circ$

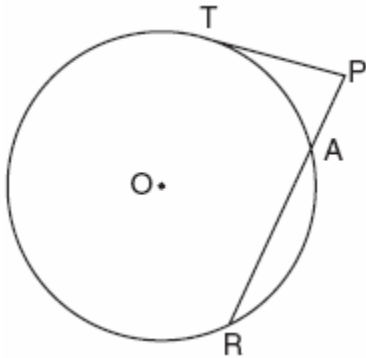
38. Point  $P$  lies outside circle  $O$ , which has a diameter of  $\overline{AOC}$ . The angle formed by tangent  $\overline{PA}$  and secant  $\overline{PBC}$  measures  $30^\circ$ . Sketch the conditions given above and find the number of degrees in the measure of minor arc  $CB$ .
39. In the accompanying diagram, cabins  $B$  and  $G$  are located on the shore of a circular lake, and cabin  $L$  is located near the lake. Point  $D$  is a dock on the lake shore and is collinear with cabins  $B$  and  $L$ . The road between cabins  $G$  and  $L$  is 8 miles long and is tangent to the lake. The path between cabin  $L$  and dock  $D$  is 4 miles long.



What is the length, in miles, of  $\overline{BD}$ ?

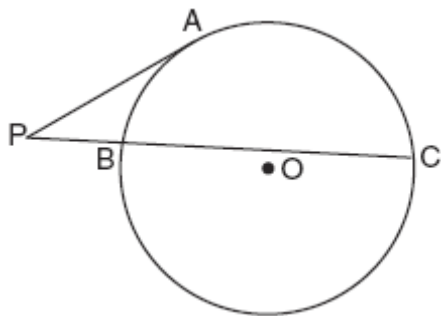
- [A] 24      [B] 8      [C] 4      [D] 12

40. The accompanying diagram shows a circular machine part that has rods  $\overline{PT}$  and  $\overline{PAR}$  attached at points  $T$ ,  $A$ , and  $R$ , which are located on the circle;  
 $m\widehat{TA} : m\widehat{AR} : m\widehat{RT} = 1 : 3 : 5$ ;  $RA = 12$  centimeters; and  $PA = 5$  centimeters.

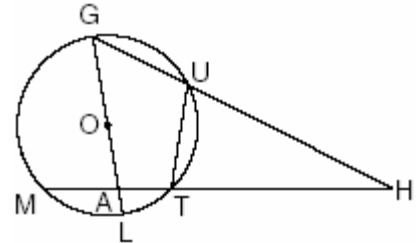


Find the measure of  $\angle P$ , in degrees, and find the length of rod  $\overline{PT}$ , to the nearest tenth of a centimeter.

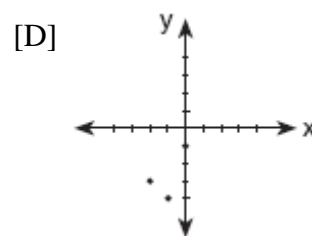
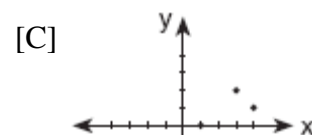
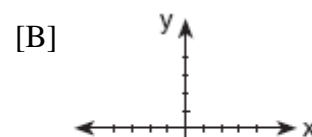
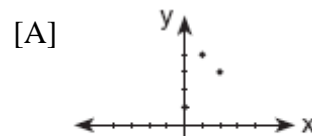
41. In the accompanying diagram,  $\overline{PA}$  is tangent to circle  $O$  at  $A$ , secant  $\overline{PBC}$  is drawn,  $PB = 4$ , and  $BC = 12$ . Find  $PA$ .



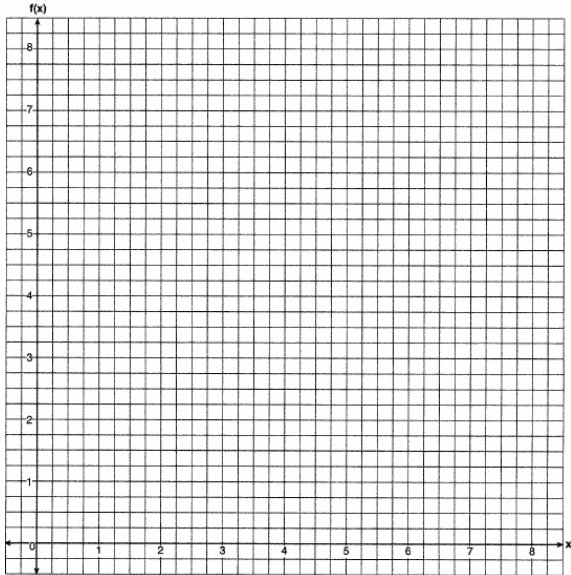
42. Given circle  $O$  with diameter  $\overline{GOAL}$ ; secants  $\overline{HUG}$  and  $\overline{HTAM}$  intersect at point  $H$ ;  $m\widehat{GM} : m\widehat{ML} : m\widehat{LT} = 7 : 3 : 2$ ; and chord  $\overline{GU} \cong$  chord  $\overline{UT}$ . Find the ratio of  $m\angle UGL$  to  $m\angle H$ .



43. Which graph represents the inverse of  $f(x) = \{(0,1), (1,4), (2,3)\}$ ?




44. Draw  $f(x) = 2x^2$  and  $f^{-1}(x)$  in the interval  $0 \leq x \leq 2$  on the accompanying set of axes. State the coordinates of the points of intersection.



45. The table below, created in 1996, shows a history of transit fares from 1955 to 1995. On the accompanying grid, construct a scatter plot where the independent variable is years. State the exponential regression equation with the coefficient and base rounded to the *nearest thousandth*. Using this equation, determine the prediction that should have been made for the year 1998, to the *nearest cent*.

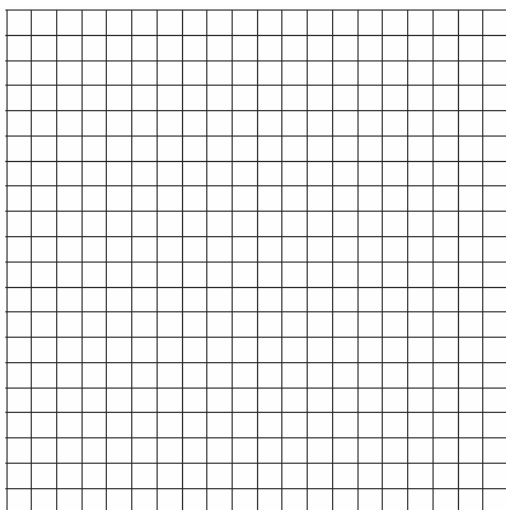
Year	Fare (\$)
55	0.10
60	0.15
65	0.20
70	0.30
75	0.40
80	0.60
85	0.80
90	1.15
95	1.50



46. The breaking strength,  $y$ , in tons, of steel cable with diameter  $d$ , in inches, is given in the table below.

$d$ (in)	$y$ (tons)
0.50	9.85
0.75	21.80
1.00	38.30
1.25	59.20
1.50	84.40
1.75	114.00

On the accompanying grid, make a scatter plot of these data. Write the exponential regression equation, expressing the regression coefficients to the *nearest tenth*.



47. Determine the value of  $x$  and  $y$  if  $2^y = 8^x$  and  $3^y = 3^{x+4}$ .
- [A]  $x = 2, y = 6$       [B]  $x = -2, y = -6$   
 [C]  $x = 6, y = 2$       [D]  $x = y$
48. The amount  $A$ , in milligrams, of a 10-milligram dose of a drug remaining in the body after  $t$  hours is given by the formula  $A = 10(0.8)^t$ . Find, to the *nearest tenth of an hour*, how long it takes for half of the drug dose to be left in the body.
49. The price per person to rent a limousine for a prom varies inversely as the number of passengers. If five people rent the limousine, the cost is \$70 each. How many people are renting the limousine when the cost *per couple* is \$87.50?
50. A rectangular prism has a length of  $\frac{2x^2 + 2x - 24}{4x^2 + x}$ , a width of  $\frac{x^2 + x - 6}{x + 4}$ , and a height of  $\frac{8x^2 + 2x}{x^2 - 9}$ . For all values of  $x$  for which it is defined, express, in terms of  $x$ , the volume of the prism in simplest form.
51. If the length of a rectangular garden is represented by  $\frac{x^2 + 2x}{x^2 + 2x - 15}$  and its width is represented by  $\frac{2x - 6}{2x + 4}$ , which expression represents the area of the garden?
- [A]  $x + 5$       [B]  $\frac{x}{x + 5}$   
 [C]  $x$       [D]  $\frac{x^2 + 2x}{2(x + 5)}$
52. Working by herself, Mary requires 16 minutes more than Antoine to solve a mathematics problem. Working together, Mary and Antoine can solve the problem in 6 minutes. If this situation is represented by the equation  $\frac{6}{t} + \frac{6}{t + 16} = 1$ , where  $t$  represents the number of minutes Antoine works alone to solve the problem, how many minutes will it take Antoine to solve the problem if he works by himself?
53. If the sine of an angle is  $\frac{3}{5}$  and the angle is *not* in Quadrant I, what is the value of the cosine of the angle?

54. If  $\theta$  is an angle in standard position and its terminal side passes through the point  $(\frac{1}{2}, \frac{\sqrt{3}}{2})$  on a unit circle, a possible value of  $\theta$  is

[A]  $60^\circ$  [B]  $120^\circ$  [C]  $150^\circ$  [D]  $30^\circ$

55. If  $\sin \theta > 0$  and  $\sec \theta < 0$ , in which quadrant does the terminal side of angle  $\theta$  lie?

[A] II [B] III [C] I [D] IV

56. If the tangent of an angle is negative and its secant is positive, in which quadrant does the angle terminate?

[A] IV [B] III [C] II [D] I

57. Which angle is coterminal with an angle of  $125^\circ$ ?

[A]  $235^\circ$  [B]  $-125^\circ$   
[C]  $425^\circ$  [D]  $-235^\circ$

58. If  $\theta$  is an obtuse angle and  $\sin \theta = b$ , then it can be concluded that

[A]  $\sin 2\theta < b$  [B]  $\cos \theta > b$   
[C]  $\tan \theta > b$  [D]  $\cos 2\theta > b$

59. Two straight roads intersect at an angle whose measure is  $125^\circ$ . Which expression is equivalent to the cosine of this angle?

[A]  $\cos 35^\circ$  [B]  $\cos 55^\circ$   
[C]  $-\cos 35^\circ$  [D]  $-\cos 55^\circ$

60. If  $\tan \theta = 2.7$  and  $\csc \theta < 0$ , in which quadrant does  $\theta$  lie?

[A] II [B] III [C] IV [D] I

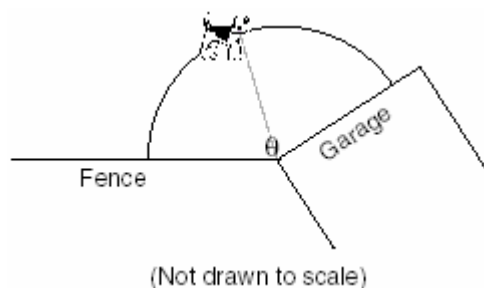
61. An art student wants to make a string collage by connecting six equally spaced points on the circumference of a circle to its center with string. What would be the radian measure of the angle between two adjacent pieces of string, in simplest form?

62. An arc of a circle that is 6 centimeters in length intercepts a central angle of 1.5 radians. Find the number of centimeters in the radius of the circle.

63. What is the radian measure of the angle formed by the hands of a clock at 2:00 p.m.?

[A]  $\frac{\pi}{3}$  [B]  $\frac{\pi}{4}$  [C]  $\frac{\pi}{6}$  [D]  $\frac{\pi}{2}$

64. A dog has a 20-foot leash attached to the corner where a garage and a fence meet, as shown in the accompanying diagram. When the dog pulls the leash tight and walks from the fence to the garage, the arc the leash makes is 55.8 feet.

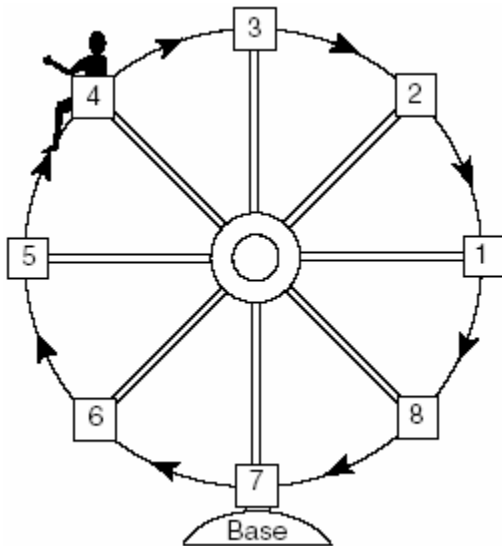


What is the measure of angle  $\theta$  between the garage and the fence, in radians?

[A] 2.79 [B] 0.36 [C] 160 [D] 3.14

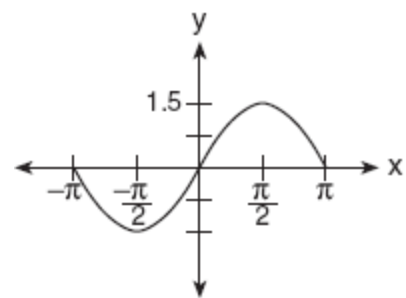


65. Kristine is riding in car 4 of the Ferris wheel represented in the accompanying diagram. The Ferris wheel is rotating in the direction indicated by the arrows. The eight cars are equally spaced around the circular wheel. Express, in radians, the measure of the *smallest* angle through which she will travel to reach the bottom of the Ferris wheel.



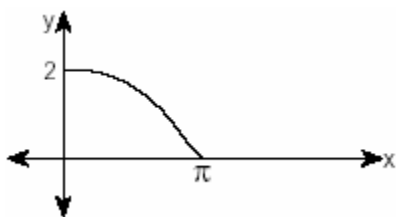
66. The pendulum of a clock swings through an angle of 2.5 radians as its tip travels through an arc of 50 centimeters. Find the length of the pendulum, in centimeters.
67. The brightness of the star MIRA over time is given by the equation  $y = 2 \sin \frac{\pi}{4}x + 6$ , where  $x$  represents time and  $y$  represents brightness. What is the period of this function, in radian measure?
68. A monitor displays the graph  $y = 3 \sin 5x$ . What will be the amplitude after a dilation of 2?  
[A] 7 [B] 10 [C] 6 [D] 5

69. What is the amplitude of the function  $y = \frac{2}{3} \sin 4x$ ?  
[A]  $3\pi$  [B] 4 [C]  $\frac{2}{3}$  [D]  $\frac{\pi}{2}$
70. The path traveled by a roller coaster is modeled by the equation  $y = 27 \sin 13x + 30$ . What is the maximum altitude of the roller coaster?  
[A] 13 [B] 57 [C] 30 [D] 27
71. A certain radio wave travels in a path represented by the equation  $y = 5 \sin 2x$ . What is the period of this wave?  
[A] 2 [B]  $\pi$  [C]  $2\pi$  [D] 5
72. A sound wave is modeled by the curve  $y = 3 \sin 4x$ . What is the period of this curve?  
[A] 4 [B]  $\frac{\pi}{2}$  [C]  $\pi$  [D] 3
73. A radio transmitter sends a radio wave from the top of a 50-foot tower. The wave is represented by the accompanying graph.



- What is the equation of this radio wave?  
[A]  $y = 2 \sin x$  [B]  $y = \sin 1.5x$   
[C]  $y = \sin x$  [D]  $y = 1.5 \sin x$

74. The accompanying diagram shows a section of a sound wave as displayed on an oscilloscope.



Which equation could represent this graph?

- [A]  $y = 2 \sin \frac{x}{2}$       [B]  $y = 2 \cos \frac{x}{2}$   
 [C]  $y = \frac{1}{2} \sin \frac{\pi}{2} x$       [D]  $y = \frac{1}{2} \cos 2x$
75. If  $\sin A = \frac{4}{5}$ ,  $\tan B = \frac{5}{12}$ , and angles  $A$  and  $B$  are in Quadrant I, what is the value of  $\sin(A + B)$ ?
- [A]  $-\frac{33}{65}$       [B]  $-\frac{63}{65}$   
 [C]  $\frac{63}{65}$       [D]  $\frac{33}{65}$
76. If  $A$  is a positive acute angle and  $\sin A = \frac{\sqrt{5}}{3}$ , what is  $\cos 2A$ ?
- [A]  $-\frac{1}{9}$       [B]  $\frac{1}{9}$       [C]  $\frac{1}{3}$       [D]  $-\frac{1}{3}$
77. If  $\sin x = \frac{12}{13}$ ,  $\cos y = \frac{3}{5}$ , and  $x$  and  $y$  are acute angles, the value of  $\cos(x - y)$  is
- [A]  $-\frac{14}{65}$       [B]  $-\frac{33}{65}$   
 [C]  $\frac{63}{65}$       [D]  $\frac{21}{65}$

78. If  $x$  is an acute angle and  $\sin x = \frac{12}{13}$ , then  $\cos 2x$  equals

[A]  $\frac{119}{169}$       [B]  $-\frac{25}{169}$   
 [C]  $\frac{25}{169}$       [D]  $-\frac{119}{169}$

79. If  $A$  and  $B$  are positive acute angles,  $\sin A = \frac{5}{13}$ , and  $\cos B = \frac{4}{5}$ , what is the value of  $\sin(A + B)$ ?

[A]  $\frac{33}{65}$       [B]  $\frac{56}{65}$       [C]  $-\frac{16}{65}$       [D]  $\frac{63}{65}$

80. The expression  $\cos 40^\circ \cos 10^\circ + \sin 40^\circ \sin 10^\circ$  is equivalent to

[A]  $\sin 50^\circ$       [B]  $\cos 30^\circ$   
 [C]  $\sin 30^\circ$       [D]  $\cos 50^\circ$

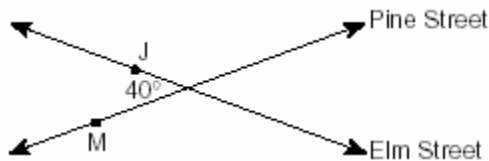
81. If  $\theta$  is a positive acute angle and  $\sin 2\theta = \frac{\sqrt{3}}{2}$ , then  $(\cos \theta + \sin \theta)^2$  equals

[A]  $60^\circ$       [B] 1      [C]  $1 + \frac{\sqrt{3}}{2}$       [D]  $30^\circ$

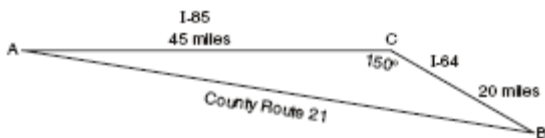
82. What value of  $x$  in the interval  $0^\circ \leq x \leq 180^\circ$  satisfies the equation  $\sqrt{3} \tan x + 1 = 0$ ?

[A]  $-30^\circ$       [B]  $60^\circ$       [C]  $150^\circ$       [D]  $30^\circ$

83. Two straight roads, Elm Street and Pine Street, intersect creating a  $40^\circ$  angle, as shown in the accompanying diagram. John's house ( $J$ ) is on Elm Street and is 3.2 miles from the point of intersection. Mary's house ( $M$ ) is on Pine Street and is 5.6 miles from the intersection. Find, to the *nearest tenth of a mile*, the direct distance between the two houses.

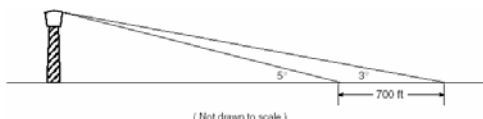


84. Kieran is traveling from city  $A$  to city  $B$ . As the accompanying map indicates, Kieran could drive directly from  $A$  to  $B$  along County Route 21 at an average speed of 55 miles per hour or travel on the interstates, 45 miles along I-85 and 20 miles along I-64. The two interstates intersect at an angle of  $150^\circ$  at  $C$  and have a speed limit of 65 miles per hour. How much time will Kieran save by traveling along the interstates at an average speed of 65 miles per hour?



85. To measure the distance through a mountain for a proposed tunnel, surveyors chose points  $A$  and  $B$  at each end of the proposed tunnel and a point  $C$  near the mountain. They determined that  $AC = 3,800$  meters,  $BC = 2,900$  meters, and  $m\angle ACB = 110$ . Draw a diagram to illustrate this situation and find the length of the tunnel, to the *nearest meter*.
86. A surveyor is mapping a triangular plot of land. He measures two of the sides and the angle formed by these two sides and finds that the lengths are 400 yards and 200 yards and the included angle is  $50^\circ$ . What is the measure of the third side of the plot of land, to the *nearest yard*? What is the area of this plot of land, to the *nearest square yard*?
87. A farmer has determined that a crop of strawberries yields a yearly profit of \$1.50 per square yard. If strawberries are planted on a triangular piece of land whose sides are 50 yards, 75 yards, and 100 yards, how much profit, to the *nearest hundred dollars*, would the farmer expect to make from this piece of land during the next harvest?
88. The Vietnam Veterans Memorial in Washington, D.C., is made up of two walls, each 246.75 feet long, that meet at an angle of  $125.2^\circ$ . Find, to the *nearest foot*, the distance between the ends of the walls that do not meet.
89. A triangular plot of land has sides that measure 5 meters, 7 meters, and 10 meters. What is the area of this plot of land, to the *nearest tenth of a square meter*?
90. Carmen and Jamal are standing 5,280 feet apart on a straight, horizontal road. They observe a hot-air balloon between them directly above the road. The angle of elevation from Carmen is  $60^\circ$  and from Jamal is  $75^\circ$ . Draw a diagram to illustrate this situation and find the height of the balloon to the *nearest foot*.

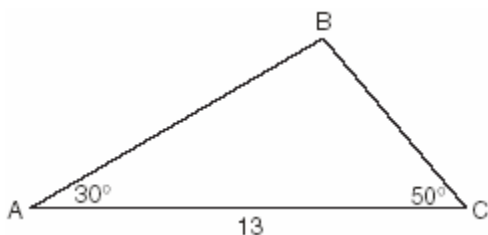
91. While sailing a boat offshore, Donna sees a lighthouse and calculates that the angle of elevation to the top of the lighthouse is  $3^\circ$ , as shown in the accompanying diagram. When she sails her boat 700 feet closer to the lighthouse, she finds that the angle of elevation is now  $5^\circ$ . How tall, to the *nearest tenth of a foot*, is the lighthouse?



92. A sign 46 feet high is placed on top of an office building. From a point on the sidewalk level with the base of the building, the angle of elevation to the top of the sign and the angle of elevation to the bottom of the sign are  $40^\circ$  and  $32^\circ$ , respectively. Sketch a diagram to represent the building, the sign, and the two angles, and find the height of the building to the *nearest foot*.

93. In  $\triangle ABC$ ,  $m\angle A = 33$ ,  $a = 12$ , and  $b = 15$ . What is  $m\angle B$  to the *nearest degree*?  
[A] 43 [B] 48 [C] 41 [D] 44

94. In the accompanying diagram of  $\triangle ABC$ ,  $m\angle A = 30$ ,  $m\angle C = 50$ , and  $AC = 13$ .



What is the length of side  $\overline{AB}$  to the *nearest tenth*?

- [A] 11.5 [B] 12.0 [C] 6.6 [D] 10.1

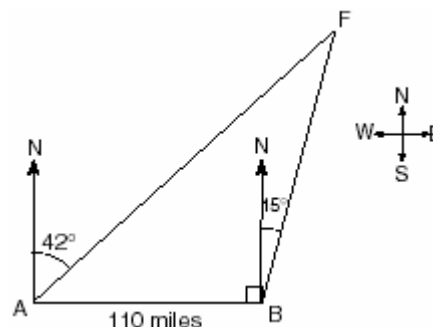
95. In  $\triangle ABC$ ,  $a = 19$ ,  $c = 10$ , and  $m\angle A = 111$ . Which statement can be used to find the value of  $\angle C$ ?

[A]  $\sin C = \frac{10}{19}$  [B]  $\sin C = \frac{19 \sin 69^\circ}{10}$

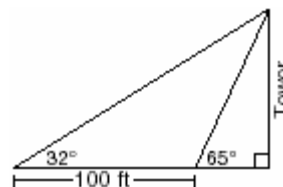
[C]  $\sin C = \frac{10 \sin 21^\circ}{19}$

[D]  $\sin C = \frac{10 \sin 69^\circ}{19}$

96. As shown in the accompanying diagram, two tracking stations,  $A$  and  $B$ , are on an east-west line 110 miles apart. A forest fire is located at  $F$ , on a bearing  $42^\circ$  northeast of station  $A$  and  $15^\circ$  northeast of station  $B$ . How far, to the *nearest mile*, is the fire from station  $A$ ?

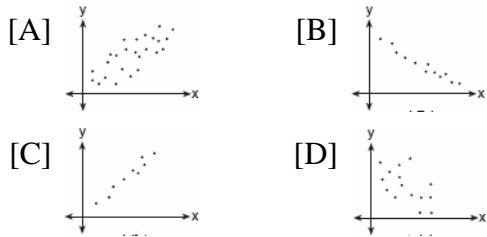


97. The accompanying diagram shows the plans for a cell-phone tower that is to be built near a busy highway. Find the height of the tower, to the *nearest foot*.



98. In  $\triangle ABC$ ,  $m\angle A = 53$ ,  $m\angle B = 14$ , and  $a = 10$ . Find  $b$  to the *nearest integer*.

99. Which graph represents data used in a linear regression that produces a correlation coefficient closest to  $-1$ ?



100. On a standardized test, a score of 86 falls exactly 1.5 standard deviations below the mean. If the standard deviation for the test is 2, what is the mean score for this test?  
[A] 87.5 [B] 84 [C] 89 [D] 84.5

101. An electronics company produces a headphone set that can be adjusted to accommodate different-sized heads. Research into the distance between the top of people's heads and the top of their ears produced the following data, in inches: 4.5, 4.8, 6.2, 5.5, 5.6, 5.4, 5.8, 6.0, 5.8, 6.2, 4.6, 5.0, 5.4, 5.8  
The company decides to design their headphones to accommodate three standard deviations from the mean. Find, to the *nearest tenth*, the mean, the standard deviation, and the range of distances that must be accommodated.

102. Jean's scores on five mathematics tests were 98, 97, 99, 98, and 96. Her scores on five English tests were 78, 84, 95, 72, and 79. Which statement is true about the standard deviations for the scores?

- [A] The standard deviations for both sets of scores are equal.  
[B] The standard deviation for the English scores is greater than the standard deviation for the math scores.  
[C] The standard deviation for the math scores is greater than the standard deviation for the English scores.  
[D] More information is needed to determine the relationship between the standard deviations.

103. In a certain school district, the ages of all new teachers hired during the last 5 years are normally distributed. Within this curve, 95.4% of the ages, centered about the mean, are between 24.6 and 37.4 years. Find the mean age and the standard deviation of the data.

104. Professor Bartrich has 184 students in her mathematics class. The scores on the final examination are normally distributed and have a mean of 72.3 and a standard deviation of 8.9. How many students in the class can be expected to receive a score between 82 and 90?

105. The amount of ketchup dispensed from a machine at Hamburger Palace is normally distributed with a mean of 0.9 ounce and a standard deviation of 0.1 ounce. If the machine is used 500 times, approximately how many times will it be expected to dispense 1 or more ounces of ketchup?

- [A] 5 [B] 16 [C] 80 [D] 100

106. The amount of juice dispensed from a machine is normally distributed with a mean of 10.50 ounces and a standard deviation of 0.75 ounce. Which interval represents the amount of juice dispensed about 68.2% of the time?

- [A] 9.75-11.25      [B] 9.00-12.00  
[C] 9.75-10.50      [D] 10.50-11.25

107. The mean of a normally distributed set of data is 56, and the standard deviation is 5. In which interval do approximately 95.4% of all cases lie?

- [A] 56-71      [B] 51-61  
[C] 46-66      [D] 46-56

108. The national mean for verbal scores on an exam was 428 and the standard deviation was 113. Approximately what percent of those taking this test had verbal scores between 315 and 541?

- [A] 38.2%      [B] 68.2%  
[C] 52.8%      [D] 26.4%

1. What is the mean of the data in the accompanying table?

Scores ( $x_i$ )	Frequency ( $f_i$ )
25	3
20	2
11	5
10	4

[A] 16 [B] 14.5 [C] 15 [D] 11

2. The 1999 win-loss statistics for the American League East baseball teams on a particular date is shown in the accompanying chart.

	W	L
New York	52	34
Boston	49	39
Toronto	47	43
Tampa Bay	39	49
Baltimore	36	51

Find the mean for the number of wins,  $\bar{W}$ , and the mean for the number of losses,  $\bar{L}$ , and determine if the point  $(\bar{W}, \bar{L})$  is a point on the line of best fit. Justify your answer.


3. A real estate agent plans to compare the price of a cottage,  $y$ , in a town on the seashore to the number of blocks,  $x$ , the cottage is from the beach. The accompanying table shows a random sample of sales and location data. Write a linear regression equation that relates the price of a cottage to its distance from the beach. Use the equation to predict the price of a cottage, to the *nearest dollar*, located three blocks from the beach.

Number of Blocks from the Beach ( $x$ )	Price of a Cottage ( $y$ )
5	\$132,000
0	\$310,000
4	\$204,000
2	\$238,000
1	\$275,000
7	\$60,800

4. The table below shows the results of an experiment that relates the height at which a ball is dropped,  $x$ , to the height of its first bounce,  $y$ .

Drop Height ( $x$ ) (cm)	Bounce Height ( $y$ ) (cm)
100	26
90	23
80	21
70	18
60	16


Find  $\bar{x}$ , the mean of the drop heights.  
 Find  $\bar{y}$ , the mean of the bounce heights.  
 Find the linear regression equation that best fits the data.  
 Show that  $(\bar{x}, \bar{y})$  is a point on the line of regression. [The use of the grid is optional.]



5. Two different tests were designed to measure understanding of a topic. The two tests were given to ten students with the following results:

Test $x$	75	78	88	92	95	67	58	72	74	81
Test $y$	81	73	85	88	89	73	66	75	70	78

Construct a scatter plot for these scores, and then write an equation for the line of best fit (round slope and intercept to the *nearest hundredth*).



Find the correlation coefficient.  
 Predict the score, to the *nearest integer*, on test  $y$  for a student who scored 87 on test  $x$ .



6. The accompanying table illustrates the number of movie theaters showing a popular film and the film's weekly gross earnings, in millions of dollars.

Number of Theaters ( $x$ )	Gross Earnings ( $y$ ) (millions of dollars)
443	2.57
455	2.65
493	3.73
530	4.05
569	4.76
657	4.76
723	5.15
1,064	9.35

Write the linear regression equation for this set of data, rounding values to *five decimal places*.

Using this linear regression equation, find the approximate gross earnings, in millions of dollars, generated by 610 theaters. Round your answer to *two decimal places*.

Find the minimum number of theaters that would generate at least 7.65 million dollars in gross earnings in one week.

7. Since 1990, fireworks usage nationwide has grown, as shown in the accompanying table, where  $t$  represents the number of years since 1990, and  $p$  represents the fireworks usage per year, in millions of pounds.

Number of Years Since 1990 ( $t$ )	Fireworks Usage per Year, In Millions of Pounds ( $p$ )
0	67.6
2	88.8
4	119.0
6	120.1
7	132.5
8	118.3
9	159.2
11	161.6

Find the equation of the linear regression model for this set of data, where  $t$  is the independent variable. Round values to *four decimal places*.

Using this equation, determine in what year fireworks usage would have reached 99 million pounds.

Based on this linear model, how many millions of pounds of fireworks would be used in the year 2008? Round your answer to the *nearest tenth*.

8. A factory is producing and stockpiling metal sheets to be shipped to an automobile manufacturing plant. The factory ships only when there is a minimum of 2,050 sheets in stock. The accompanying table shows the day,  $x$ , and the number of sheets in stock,  $f(x)$ .

Day ( $x$ )	Sheets in Stock ( $f(x)$ )
1	860
2	930
3	1000
4	1150
5	1200
6	1360

Write the linear regression equation for this set of data, rounding the coefficients to *four decimal places*.

Use this equation to determine the day the sheets will be shipped.

9. A cellular telephone company has two plans. Plan *A* charges \$11 a month and \$0.21 per minute. Plan *B* charges \$20 a month and \$0.10 per minute. After how much time, to the *nearest minute*, will the cost of plan *A* be equal to the cost of plan *B*?

- [A] 1 hr 36 min      [B] 81 hr 48 min  
[C] 1 hr 22 m      [D] 81 hr 8 min

10. What is the domain of the function

$$f(x) = \frac{2x^2}{x^2 - 9}?$$

- [A] all real numbers except 0  
[B] all real numbers  
[C] all real numbers except 3 and -3  
[D] all real numbers except 3

11. What is the domain of the function

$$f(x) = \frac{3x^2}{x^2 - 49}?$$

- [A]  $\{x \mid x \in \text{real numbers}, x \neq 7\}$   
[B]  $\{x \mid x \in \text{real numbers}, x \neq \pm 7\}$   
[C]  $\{x \mid x \in \text{real numbers}\}$   
[D]  $\{x \mid x \in \text{real numbers}, x \neq 0\}$

12. If  $f(x) = \frac{1}{\sqrt{2x-4}}$ , the domain of  $f(x)$  is

- [A]  $x < 2$       [B]  $x \geq 2$   
[C]  $x > 2$       [D]  $x = 2$

13. The roots of the equation  $x^2 - 3x - 2 = 0$  are

- [A] real, rational, and equal  
[B] real, rational, and unequal  
[C] real, irrational, and unequal  
[D] imaginary

14. What is the *last* term in the expansion of  $(x + 2y)^5$ ?

- [A]  $y^5$     [B]  $10y^5$     [C]  $32y^5$     [D]  $2y^5$

15. What is the middle term in the expansion of  $(x + y)^4$ ?

- [A]  $x^2y^2$       [B]  $4x^2y^2$   
[C]  $2x^2y^2$       [D]  $6x^2y^2$

16. What is the fourth term in the expansion of  $(y - 1)^7$ ?

- [A]  $35y^3$       [B]  $35y^4$   
[C]  $-35y^3$       [D]  $-35y^4$

17. What is the third term in the expansion of  $(\cos x + 3)^5$ ?
- [A]  $90\cos^3 x$                       [B]  $270\cos^2 x$   
[C]  $60\cos^3 x$                       [D]  $90\cos^2 x$
18. At a certain intersection, the light for eastbound traffic is red for 15 seconds, yellow for 5 seconds, and green for 30 seconds. Find, to the *nearest tenth*, the probability that out of the next eight eastbound cars that arrive randomly at the light, exactly three will be stopped by a red light.
19. Team A and team B are playing in a league. They will play each other five times. If the probability that team A wins a game is  $\frac{1}{3}$ , what is the probability that team A will win *at least* three of the five games?
20. After studying a couple's family history, a doctor determines that the probability of any child born to this couple having a gene for disease X is 1 out of 4. If the couple has three children, what is the probability that *exactly* two of the children have the gene for disease X?
21. Which fraction represents the probability of obtaining *exactly* eight heads in ten tosses of a fair coin?
- [A]  $\frac{90}{1,024}$                               [B]  $\frac{180}{1,024}$   
[C]  $\frac{64}{1,024}$                               [D]  $\frac{45}{1,024}$
22. The probability that Kyla will score above a 90 on a mathematics test is  $\frac{4}{5}$ . What is the probability that she will score above a 90 on three of the four tests this quarter?
- [A]  ${}_4C_3\left(\frac{4}{5}\right)^1\left(\frac{1}{5}\right)^3$       [B]  $\frac{3}{4}\left(\frac{4}{5}\right)^3\left(\frac{1}{5}\right)^1$   
[C]  $\frac{3}{4}\left(\frac{4}{5}\right)^1\left(\frac{1}{5}\right)^3$       [D]  ${}_4C_3\left(\frac{4}{5}\right)^3\left(\frac{1}{5}\right)^1$
23. On any given day, the probability that the entire Watson family eats dinner together is  $\frac{2}{5}$ . Find the probability that, during any 7-day period, the Watsons eat dinner together *at least* six times.
24. When Joe bowls, he can get a strike (knock down all the pins) 60% of the time. How many times more likely is it for Joe to bowl *at least* three strikes out of four tries as it is for him to bowl zero strikes out of four tries? Round your answer to the *nearest whole number*.
25. A board game has a spinner on a circle that has five equal sectors, numbered 1, 2, 3, 4, and 5, respectively. If a player has four spins, find the probability that the player spins an even number *no more than* two times on those four spins.
26. The Hiking Club plans to go camping in a State park where the probability of rain on any given day is 0.7. Which expression can be used to find the probability that it will rain *exactly* three of the seven days they are there?
- [A]  ${}_7C_3(0.7)^3(0.3)^4$       [B]  ${}_4C_3(0.4)^4(0.3)^3$   
[C]  ${}_7C_3(0.3)^3(0.7)^4$       [D]  ${}_4C_3(0.7)^3(0.7)^4$

27. Tim Parker, a star baseball player, hits one home run for every ten times he is at bat. If Parker goes to bat five times during tonight's game, what is the probability that he will hit *at least* four home runs?
28. If the probability that it will rain on any given day this week is 60%, find the probability it will rain *exactly* 3 out of 7 days this week.
29. The probability that a planted watermelon seed will sprout is  $\frac{3}{4}$ . If Peyton plants seven seeds from a slice of watermelon, find, to the *nearest ten thousandth*, the probability that *at least* five will sprout.
30. The Coolidge family's favorite television channels are 3, 6, 7, 10, 11, and 13. If the Coolidge family selects a favorite channel at random to view each night, what is the probability that they choose *exactly* three even-numbered channels in five nights? Express your answer as a fraction or as a decimal rounded to *four decimal places*.
31. During a recent survey, students at Franconia College were asked if they drink coffee in the morning. The results showed that two-thirds of the students drink coffee in the morning and the remainder do not. What is the probability that of six students selected at random, *exactly* two of them drink coffee in the morning? Express your answer as a fraction or as a decimal rounded to *four decimal places*.
32. Ginger and Mary Anne are planning a vacation trip to the island of Capri, where the probability of rain on any day is 0.3. What is the probability that during their five days on the island, they have *no* rain on *exactly* three of the five days?

33. A used car was purchased in July 1999 for \$11,900. If the car depreciates 13% of its value each year, what is the value of the car, to the *nearest hundred dollars*, in July 2002?
34. A box containing 1,000 coins is shaken, and the coins are emptied onto a table. Only the coins that land heads up are returned to the box, and then the process is repeated. The accompanying table shows the number of trials and the number of coins returned to the box after each trial.

Trial	0	1	3	4	6
Coins Returned	1,000	610	220	132	45


Write an exponential regression equation, rounding the calculated values to the *nearest ten-thousandth*.

Use the equation to predict how many coins would be returned to the box after the eighth trial.


35. The accompanying table shows the average salary of baseball players since 1984. Using the data in the table, create a scatter plot on the grid and state the exponential regression equation with the coefficient and base rounded to the *nearest hundredth*. Using your written regression equation, estimate the salary of a baseball player in the year 2005, to the *nearest thousand dollars*.

**Baseball Players' Salaries**

Numbers of Years Since 1984	Average Salary (thousands of dollars)
0	290
1	320
2	400
3	495
4	600
5	700
6	820
7	1,000
8	1,250
9	1,580



37. For a carnival game, John is painting two circles,  $V$  and  $M$ , on a square dartboard. a On the accompanying grid, draw and label circle  $V$ , represented by the equation  $x^2 + y^2 = 25$ , and circle  $M$ , represented by the equation  $(x - 8)^2 + (y + 6)^2 = 4$ .

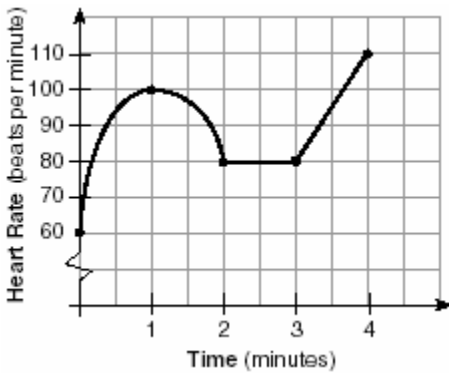


b A point,  $(x,y)$ , is randomly selected such that  $-10 \leq x \leq 10$  and  $-10 \leq y \leq 10$ . What is the probability that point  $(x,y)$  lies outside both circle  $V$  and circle  $M$ ?

38. Two social studies classes took the same current events examination that was scored on the basis of 100 points. Mr. Wong's class had a median score of 78 and a range of 4 points, while Ms. Rizzo's class had a median score of 78 and a range of 22 points. Explain how these classes could have the same median score while having very different ranges.

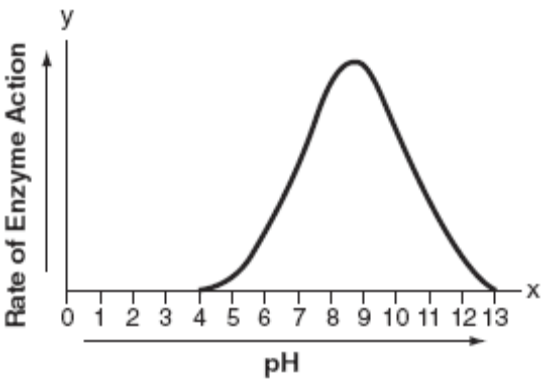
36. If  $\sin x = \frac{4}{5}$ , where  $0^\circ < x < 90^\circ$ , find the value of  $\cos (x + 180^\circ)$ .

39. The accompanying graph shows the heart rate, in beats per minute, of a jogger during a 4-minute interval.



What is the range of the jogger's heart rate during this interval?

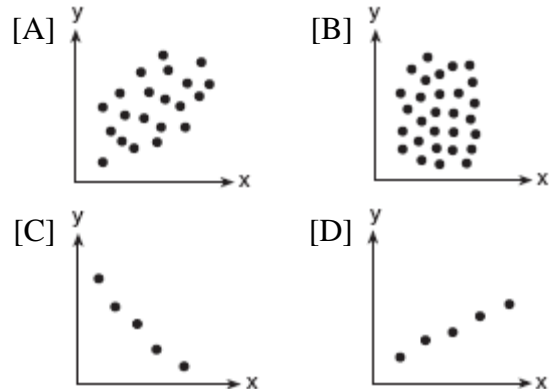
- [A] 0-4                      [B] 60-110  
[C] 1-4                      [D] 0-110
40. The effect of pH on the action of a certain enzyme is shown on the accompanying graph.



What is the domain of this function?

- [A]  $y \geq 0$                       [B]  $4 \leq x \leq 13$   
[C]  $4 \leq y \leq 13$                       [D]  $x \geq 0$

41. Which scatter diagram shows the strongest positive correlation?



42. The relationship of a woman's shoe size and length of a woman's foot, in inches, is given in the accompanying table.

Woman's Shoe Size	5	6	7	8
Foot Length (in)	9.00	9.25	9.50	9.75

The linear correlation coefficient for this relationship is

- [A] -1      [B] 0.5      [C] 1      [D] 0
43. A linear regression equation of best fit between a student's attendance and the degree of success in school is  $h = 0.5x + 68.5$ . The correlation coefficient,  $r$ , for these data would be
- [A]  $0 < r < 1$                       [B]  $r = -1$   
[C]  $-1 < r < 0$                       [D]  $r = 0$
44. On a nationwide examination, the Adams School had a mean score of 875 and a standard deviation of 12. The Boswell School had a mean score of 855 and a standard deviation of 20. In which school was there greater consistency in the scores? Explain how you arrived at your answer.

45. In a New York City high school, a survey revealed the mean amount of cola consumed each week was 12 bottles and the standard deviation was 2.8 bottles. Assuming the survey represents a normal distribution, how many bottles of cola per week will approximately 68.2% of the students drink?  
[A] 6.4 to 12                      [B] 12 to 20.4  
[C] 9.2 to 14.8                    [D] 6.4 to 17.6
46. Battery lifetime is normally distributed for large samples. The mean lifetime is 500 days and the standard deviation is 61 days. Approximately what percent of batteries have lifetimes *longer than* 561 days?  
[A] 34%    [B] 16%    [C] 84%    [D] 68%
47. On a standardized test, the distribution of scores is normal, the mean of the scores is 75, and the standard deviation is 5.8. If a student scored 83, the student's score ranks  
[A] between the 75th percentile and the 84th percentile  
[B] below the 75th percentile  
[C] above the 97th percentile  
[D] between the 84th percentile and the 97th percentile
48. The mean score on a normally distributed exam is 42 with a standard deviation of 12.1. Which score would be expected to occur less than 5% of the time?  
[A] 67    [B] 32    [C] 25    [D] 60
49. Mrs. Ramírez is a real estate broker. Last month, the sale prices of homes in her area approximated a normal distribution with a mean of \$150,000 and a standard deviation of \$25,000.  
A house had a sale price of \$175,000. What is the percentile rank of its sale price, to the *nearest whole number*? Explain what that percentile means.  
Mrs. Ramírez told a customer that most of the houses sold last month had selling prices between \$125,000 and \$175,000. Explain why she is correct.
50. A set of normally distributed student test scores has a mean of 80 and a standard deviation of 4. Determine the probability that a randomly selected score will be between 74 and 82.
51. The amount of time that a teenager plays video games in any given week is normally distributed. If a teenager plays video games an average of 15 hours per week, with a standard deviation of 3 hours, what is the probability of a teenager playing video games between 15 and 18 hours a week?
52. A shoe manufacturer collected data regarding men's shoe sizes and found that the distribution of sizes exactly fits the normal curve. If the mean shoe size is 11 and the standard deviation is 1.5, find:  
*a* the probability that a man's shoe size is greater than or equal to 11  
*b* the probability that a man's shoe size is greater than or equal to 12.5  
*c*  $\frac{P(\text{size} \geq 12.5)}{P(\text{size} \geq 8)}$
53. What is the value of  $\sum_{m=1}^3 (2m+1)^{m-1}$  ?  
[A] 15    [B] 245    [C] 57    [D] 55

54. What is the value of  $\sum_{m=2}^5 (m^2 - 1)$ ?
- [A] 58      [B] 50      [C] 53      [D] 54
55. Evaluate:  $2\sum_{n=1}^5 (2n - 1)$
56. Evaluate:  $\sum_{n=1}^5 (n^2 + n)$
57. The projected total annual profits, in dollars, for the Nutyme Clothing Company from 2002 to 2004 can be approximated by the model  $\sum_{n=0}^2 (13,567n + 294)$ , where  $n$  is the year and  $n = 0$  represents 2002. Use this model to find the company's projected total annual profits, in dollars, for the period 2002 to 2004.
58. A ball is dropped from a height of 8 feet and allowed to bounce. Each time the ball bounces, it bounces back to half its previous height. The vertical distance the ball travels,  $d$ , is given by the formula  $d = 8 + 16\sum_{k=1}^n \left(\frac{1}{2}\right)^k$ , where  $n$  is the number of bounces. Based on this formula, what is the total vertical distance that the ball has traveled after four bounces?
- [A] 8.9 ft                      [B] 15.0 ft  
[C] 22.0 ft                      [D] 23.0 ft
59. If  ${}_n C_r$  represents the number of combinations of  $n$  items taken  $r$  at a time, what is the value of  $\sum_{r=1}^3 {}_4 C_r$ ?
- [A] 6      [B] 24      [C] 4      [D] 14
60. The value of  $\sum_{r=2}^4 {}_5 C_r$  is
- [A] 25      [B] 10      [C] 5      [D] 45
61. Evaluate:  $\sum_{k=0}^3 (3\cos k\pi + 1)$
62. Evaluate:  $\sum_{k=1}^2 \frac{(-1)^{k-1}}{(2k - 1)!}$
63. What is the value of  $\sum_{b=0}^3 (2 - (b)i)$ ?
- [A]  $2-6i$       [B]  $8-6i$       [C]  $2-5i$       [D]  $8-5i$
64. What is the value of  $\sum_{n=1}^5 (-2n + 100)$ ?
- [A] 530      [B] 130      [C] 70      [D] 470



1. The availability of leaded gasoline in New York State is decreasing, as shown in the accompanying table.

Year	1984	1988	1992	1996	2000
Gallons Available (in thousands)	150	124	104	76	50


Determine a linear relationship for  $x$  (years) versus  $y$  (gallons available), based on the data given. The data should be entered using the year and gallons available (in thousands), such as (1984,150).

If this relationship continues, determine the number of gallons of leaded gasoline available in New York State in the year 2005. If this relationship continues, during what year will leaded gasoline first become unavailable in New York State?


2. Solve for  $x$ :  $x^{-3} = \frac{27}{64}$
3. The solution set of the equation  $\sqrt{x+6} = x$  is  
[A]  $\{-2\}$  [B]  $\{\}$  [C]  $\{-2,3\}$  [D]  $\{3\}$
4. What is the solution set of the equation  
 $x = 2\sqrt{2x-3}$ ?  
[A]  $\{\}$  [B]  $\{2\}$  [C]  $\{2,6\}$  [D]  $\{6\}$
5. Solve algebraically:  $\sqrt{x+5} + 1 = x$
6. What is the solution set of the equation  
 $\sqrt{9x+10} = x$   
[A]  $\{-1\}$  [B]  $\{9\}$   
[C]  $\{10\}$  [D]  $\{10, -1\}$
7. If  $\sqrt{2x-1} + 2 = 5$ , then  $x$  is equal to  
[A] 1 [B] 5 [C] 4 [D] 2

8. Solve for all values of  $q$  that satisfy the equation  $\sqrt{3q+7} = q+3$ .
9. Solve algebraically for  $x$ :  $\sqrt{3x+1} + 1 = x$
10. A wrecking ball suspended from a chain is a type of pendulum. The relationship between the rate of speed of the ball,  $R$ , the mass of the ball,  $m$ , the length of the chain,  $L$ , and the force,  $F$ , is  $R = 2\pi\sqrt{\frac{mL}{F}}$ . Determine the force,  $F$ , to the *nearest hundredth*, when  $L = 12$ ,  $m = 50$ , and  $R = 0.6$ .
11. The lateral surface area of a right circular cone,  $s$ , is represented by the equation  $s = \pi r\sqrt{r^2 + h^2}$ , where  $r$  is the radius of the circular base and  $h$  is the height of the cone. If the lateral surface area of a large funnel is 236.64 square centimeters and its radius is 4.75 centimeters, find its height, to the *nearest hundredth of a centimeter*.

12. The equation  $V = 20\sqrt{C + 273}$  relates speed of sound,  $V$ , in meters per second, to air temperature,  $C$ , in degrees Celsius. What is the temperature, in degrees Celsius, when the speed of sound is 320 meters per second? [The use of the accompanying grid is optional.]



13. The number of people,  $y$ , involved in recycling in a community is modeled by the function  $y = 90\sqrt{3x} + 400$ , where  $x$  is the number of months the recycling plant has been open. Construct a table of values, sketch the function on the grid, and find the number of people involved in recycling exactly 3 months after the plant opened. After how many months will 940 people be involved in recycling?



14. What is the domain of  $h(x) = \sqrt{x^2 - 4x - 5}$ ?
- [A]  $\{x \mid x \geq 5 \text{ or } x \leq -1\}$   
 [B]  $\{x \mid -1 \leq x \leq 5\}$   
 [C]  $\{x \mid -5 \leq x \leq 1\}$       [D]  $\{x \mid x \geq 1 \text{ or } x \leq -5\}$
15. Which transformation of the graph of  $y = x^2$  would result in the graph of  $y = x^2 + 2$ ?
- [A]  $T_{0,2}$     [B]  $D_2$     [C]  $r_{y=2}$     [D]  $R_{0,90}$
16. Which transformation is *not* an isometry?
- [A]  $T_{3,6}$     [B]  $D_2$     [C]  $R_{0,90^\circ}$     [D]  $r_{y=x}$

17. Which transformation is *not* an isometry?

- [A] translation            [B] dilation  
[C] rotation            [D] line reflection

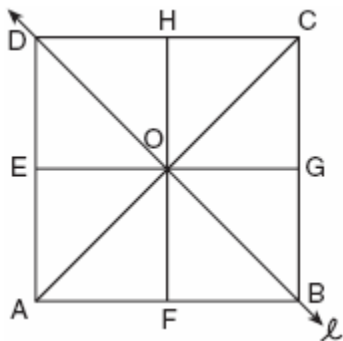
18. Which transformation is an opposite isometry?

- [A] translation            [B] dilation  
[C] rotation of  $90^\circ$     [D] line reflection

19. Which transformation does *not* preserve orientation?

- [A] translation  
[B] reflection in the  $y$ -axis  
[C] dilation            [D] rotation

20. In the accompanying diagram of square  $ABCD$ ,  $F$  is the midpoint of  $\overline{AB}$ ,  $G$  is the midpoint of  $\overline{BC}$ ,  $H$  is the midpoint of  $\overline{CD}$ , and  $E$  is the midpoint of  $\overline{DA}$ .



Find the image of  $\triangle EOA$  after it is reflected in line  $l$ .

Is this isometry direct or opposite? Explain your answer.

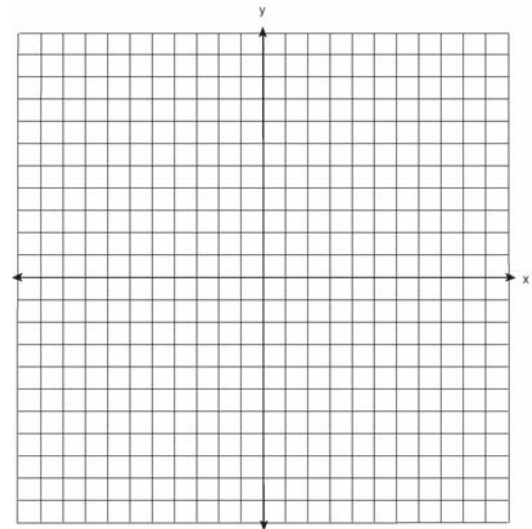
21. The graph below represents  $f(x)$ .



Which graph best represents  $f(-x)$ ?

- [A]            [B]
- [C]            [D]

22. Two parabolic arches are to be built. The equation of the first arch can be expressed as  $y = -x^2 + 9$ , with a range of  $0 \leq y \leq 9$ , and the second arch is created by the transformation  $T_{7,0}$ . On the accompanying set of axes, graph the equations of the two arches. Graph the line of symmetry formed by the parabola and its transformation and label it with the proper equation.

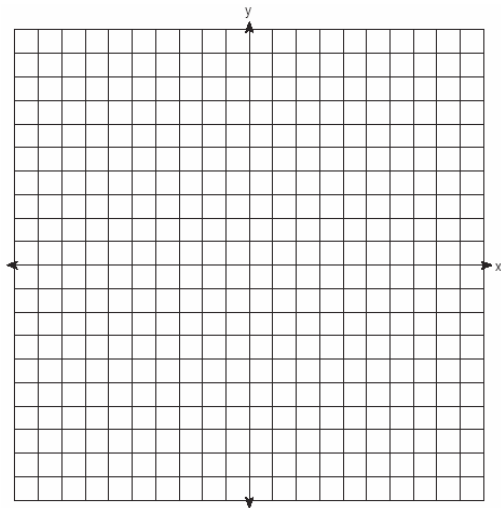


23. Graph and label the following equations,  $a$  and  $b$ , on the accompanying set of coordinate axes.


$$a: y = x^2$$

$$b: y = -(x-4)^2 + 3$$

Describe the composition of transformations performed on  $a$  to get  $b$ .

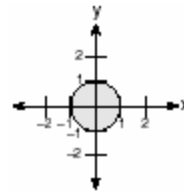


24. On the accompanying grid, graph and label  $\overline{AB}$ , where  $A$  is  $(0,5)$  and  $B$  is  $(2,0)$ . Under the transformation  $r_{x\text{-axis}} \circ r_{y\text{-axis}}(\overline{AB})$ ,  $A$  maps to  $A''$  and  $B$  maps to  $B''$ . Graph and label  $\overline{A''B''}$ . What single transformation would map  $\overline{AB}$  to  $\overline{A''B''}$ ?

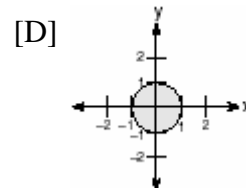
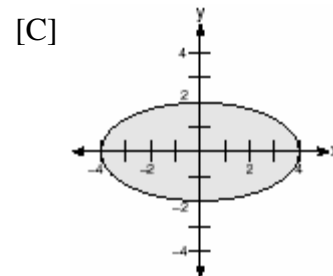
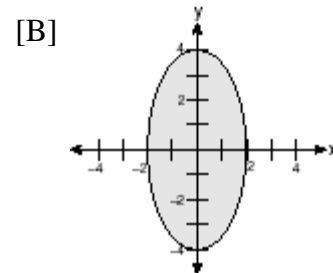
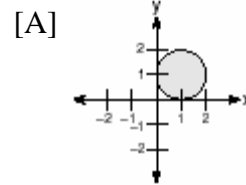


25. In which quadrant would the image of point  $(5,-3)$  fall after a dilation using a factor of  $-3$ ?  
[A] II [B] IV [C] III [D] I

26. In the accompanying graph, the shaded region represents set  $A$  of all points  $(x,y)$  such that  $x^2 + y^2 \leq 1$ . The transformation  $T$  maps point  $(x, y)$  to point  $(2x, 4y)$ .

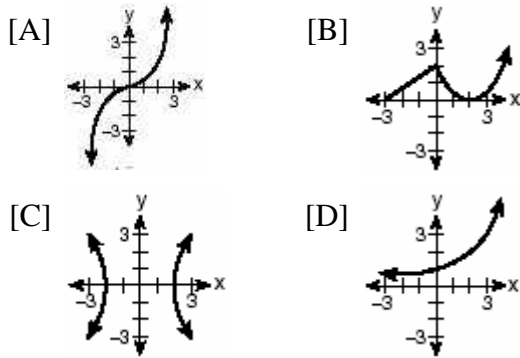


Which graph shows the mapping of set  $A$  by the transformation  $T$ ?

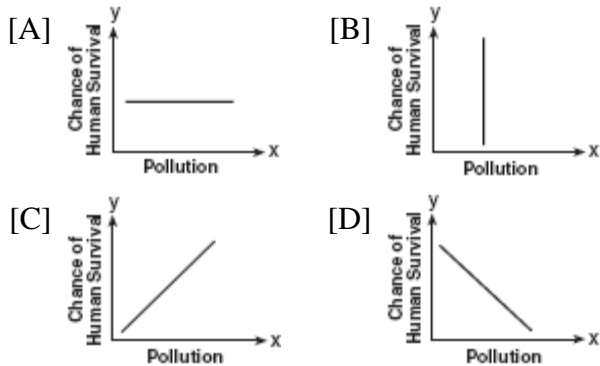




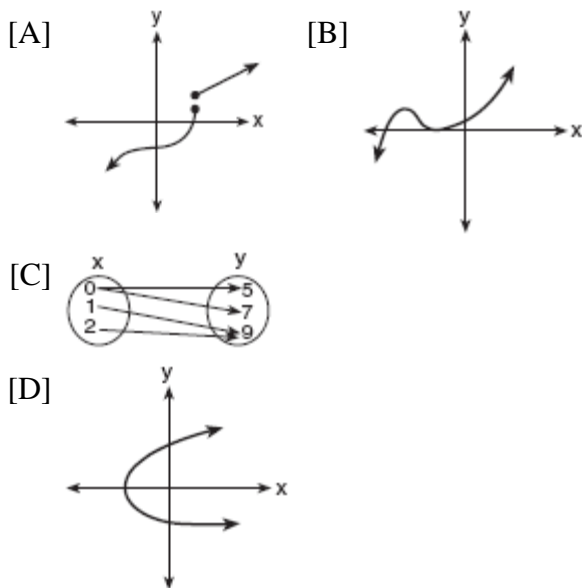
35. Which graph is *not* a function?



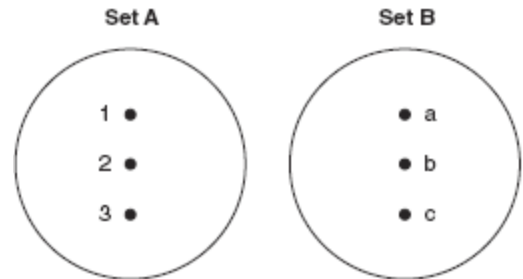
36. Which graph does not represent a function of  $x$ ?



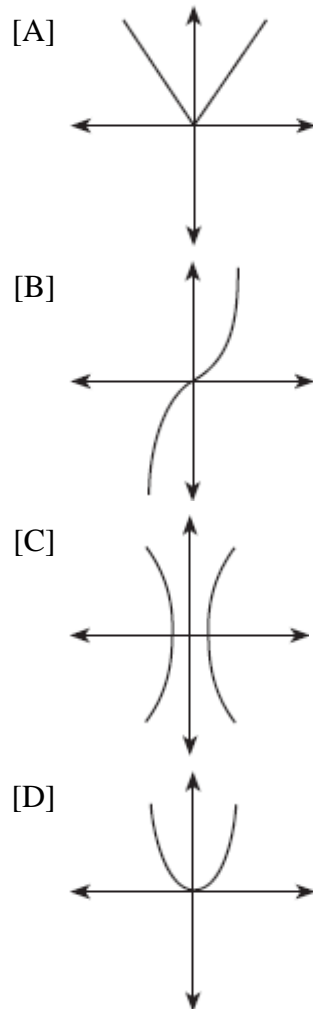
37. Which diagram represents a relation in which each member of the domain corresponds to only one member of its range?



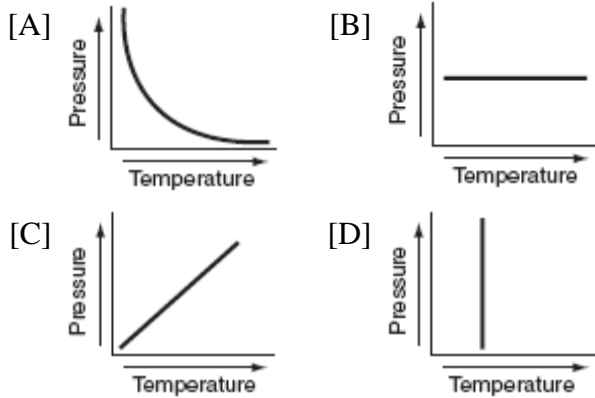
38. On the accompanying diagram, draw a mapping of a relation from set  $A$  to set  $B$  that is *not* a function. Explain why the relationship you drew is *not* a function.



39. Which diagram represents a one-to-one function?



40. Each graph below represents a possible relationship between temperature and pressure. Which graph does *not* represent a function?



41. If  $f(x) = 5x^2$  and  $g(x) = \sqrt{2x}$ , what is the value of  $(f \circ g)(8)$ ?
- [A] 16    [B] 80    [C] 1,280    [D]  $8\sqrt{10}$

42. If  $f(x) = x^{\frac{2}{3}}$  and  $g(x) = 8x^{\frac{1}{2}}$ , find  $(f \circ g)(x)$  and  $(f \circ g)(27)$ .

43. If  $f(x) = 2^x - 1$  and  $g(x) = x^2 - 1$ , determine the value of  $(f \circ g)(3)$ .

44. If  $f(x) = -2x + 7$  and  $g(x) = x^2 - 2$ , then  $f(g(3))$  is equal to
- [A] -3    [B] 7    [C] -7    [D] -1

45. If  $f$  and  $g$  are two functions defined by  $f(x) = 3x + 5$  and  $g(x) = x^2 + 1$ , then  $g(f(x))$  is
- [A]  $3x^2 + 8$                       [B]  $9x^2 + 30x + 26$   
[C]  $9x^2 + 26$                       [D]  $x^2 + 3x + 6$

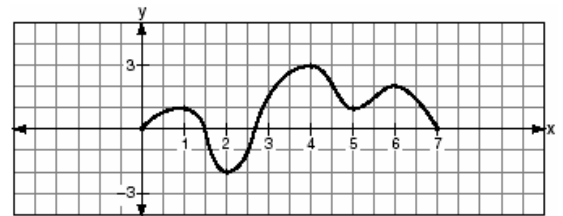
46. If  $f(x) = \frac{2}{x+3}$  and  $g(x) = \frac{1}{x}$ , then  $(g \circ f)(x)$  is equal to

[A]  $\frac{x+3}{2x}$                       [B]  $\frac{1+3x}{2x}$   
[C]  $\frac{2x}{1+3x}$                       [D]  $\frac{x+3}{2}$

47. If  $f(x) = x + 1$  and  $g(x) = x^2 - 1$ , the expression  $(g \circ f)(x)$  equals 0 when  $x$  is equal to

[A] 0 and -2                      [B] -2, only  
[C] 1 and -1                      [D] 0, only

48. The accompanying graph is a sketch of the function  $y = f(x)$  over the interval  $0 \leq x \leq 7$ .



What is the value of  $(f \circ f)(6)$ ?

[A] -2    [B] 0    [C] 1    [D] 2

49. A certain drug raises a patient's heart rate,  $h(x)$ , in beats per minute, according to the function  $h(x) = 70 + 0.2x$ , where  $x$  is the bloodstream drug level, in milligrams. The level of the drug in the patient's bloodstream is a function of time,  $t$ , in hours, according to the formula  $g(t) = 300(0.8)^t$ . Find the value of  $h(g(4))$ , the patient's heart rate in beats per minute, to the *nearest whole number*.


50. The cost ( $C$ ) of selling  $x$  calculators in a store is modeled by the equation

$$C = \frac{3,200,000}{x} + 60,000.$$

The store profit ( $P$ ) for these sales is modeled by the equation  $P = 500x$ . What is the minimum number of calculators that have to be sold for profit to be greater than cost?

51. The profit a coat manufacturer makes each day is modeled by the equation

$P(x) = -x^2 + 120x - 2000$ , where  $P$  is the profit and  $x$  is the price for each coat sold. For what values of  $x$  does the company make a profit? [The use of the accompanying grid is optional.]



52. What is the solution set of the inequality  $|3 - 2x| \geq 4$ ?

[A]  $\{x | -\frac{1}{2} \leq x \leq \frac{7}{2}\}$       [B]  $\{x | \frac{7}{2} \leq x \leq -\frac{1}{2}\}$

[C]  $\{x | x \leq \frac{7}{2} \text{ or } x \geq \frac{1}{2}\}$

[D]  $\{x | x \leq -\frac{1}{2} \text{ or } x \geq \frac{7}{2}\}$

53. What is the solution of the inequality  $|x + 3| \leq 5$ ?

[A]  $-8 \leq x \leq 2$       [B]  $-2 \leq x \leq 8$

[C]  $x \leq -8 \text{ or } x \geq 2$       [D]  $x \leq -2 \text{ or } x \geq 8$

54. The solution of  $|2x - 3| < 5$  is

[A]  $x < 4$       [B]  $-1 < x < 4$

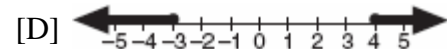

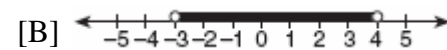
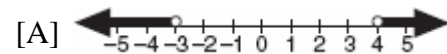
[C]  $x < -1 \text{ or } x > 4$       [D]  $x > -1$

55. What is the solution of the inequality  $|y + 8| > 3$ ?

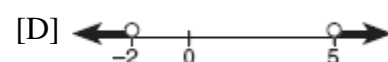
[A]  $-11 < y < -5$       [B]  $y > -5 \text{ or } y < -11$

[C]  $y > -5$       [D]  $-5 < y < 11$

56. Which graph represents the solution set of  $|2x - 1| < 7$ ?




57. Which graph represents the solution set for the expression  $|2x + 3| > 7$ ?





58. The solution set of which inequality is represented by the accompanying graph?



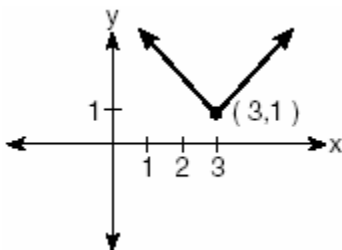
- [A]  $|x - 2| > 7$       [B]  $|2 - x| < -7$   
[C]  $|x - 2| < 7$       [D]  $|2 - x| > -7$

59. The inequality  $|1.5C - 24| \leq 30$  represents the range of monthly average temperatures,  $C$ , in degrees Celsius, for Toledo, Ohio. Solve for  $C$ .

60. A depth finder shows that the water in a certain place is 620 feet deep. The difference between  $d$ , the actual depth of the water, and the reading is  $|d - 620|$  and must be less than or equal to  $0.05d$ . Find the minimum and maximum values of  $d$ , to the *nearest tenth of a foot*.

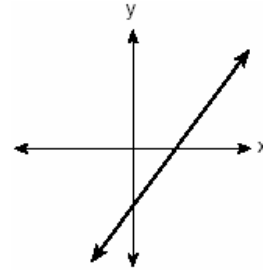
61. The heights,  $h$ , of the students in the chorus at Central Middle School satisfy the inequality  $\left| \frac{h - 57.5}{2} \right| \leq 3.25$ , when  $h$  is measured in *inches*. Determine the interval in which these heights lie and express your answer to the *nearest tenth of a foot*. [Only an algebraic solution can receive full credit.]

62. Which equation is represented by the accompanying graph?



- [A]  $y = |x - 3| + 1$       [B]  $y = (x - 3)^2 + 1$   
[C]  $y = |x + 3| - 1$       [D]  $y = |x| - 3$

63. The graph below represents  $f(x)$ .




Which graph best represents  $|f(x)|$ ?

- [A] (1)      [B] (3)  
[C] (4)      [D] (2)

64. Given the function  $y = f(x)$ , such that the entire graph of the function lies above the  $x$ -axis. Explain why the equation  $f(x) = 0$  has no real solutions.

65. A rock is thrown vertically from the ground with a velocity of 24 meters per second, and it reaches a height of  $2 + 24t - 4.9t^2$  after  $t$  seconds. How many seconds after the rock is thrown will it reach maximum height, and what is the maximum height the rock will reach, in meters? How many seconds after the rock is thrown will it hit the ground? Round your answers to the *nearest hundredth*. [Only an algebraic or graphic solution will be accepted.]



66. If a function is defined by the equation  $y = 3x + 2$ , which equation defines the inverse of this function?

- [A]  $y = -3x - 2$       [B]  $y = \frac{1}{3}x + \frac{1}{2}$   
[C]  $y = \frac{1}{3}x - \frac{2}{3}$       [D]  $x = \frac{1}{3}y + \frac{1}{2}$

67. A function is defined by the equation  $y = 5x - 5$ . Which equation defines the inverse of this function?

- [A]  $y = \frac{1}{5x-5}$       [B]  $y = 5x + 5$   
[C]  $x = \frac{1}{5y-5}$       [D]  $x = 5y - 5$

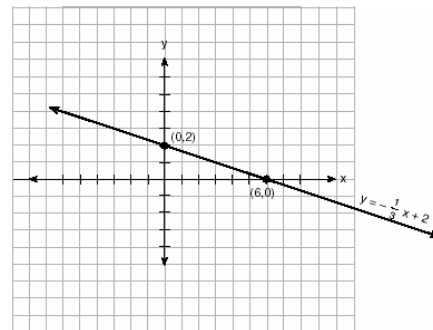
68. A function is defined by the equation  $y = \frac{1}{2}x - \frac{3}{2}$ . Which equation defines the inverse of this function?

- [A]  $y = 2x - 3$       [B]  $y = 2x + \frac{3}{2}$   
[C]  $y = 2x + 3$       [D]  $y = 2x - \frac{3}{2}$

69. Given:  $f(x) = x^2$  and  $g(x) = 2^x$   
a The inverse of  $g$  is a function, but the inverse of  $f$  is not a function. Explain why this statement is true.

b Find  $g^{-1}(f(3))$  to the *nearest tenth*.

70. The accompanying diagram shows the graph of the line whose equation is  $y = -\frac{1}{3}x + 2$ . On the same set of axes, sketch the graph of the inverse of this function. State the coordinates of a point on the inverse function.




71. What is the inverse of the function  $y = \log_4 x$ ?

- [A]  $x^4 = y$       [B]  $y^4 = x$   
[C]  $4^y = x$       [D]  $4^x = y$

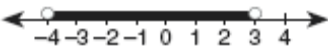
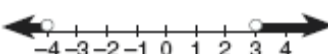
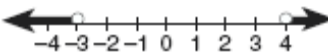
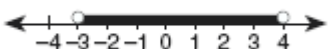
72. The inverse of a function is a logarithmic function in the form  $y = \log_b x$ . Which equation represents the original function?

- [A]  $y = b^x$                       [B]  $y = bx$   
[C]  $by = x$                       [D]  $x = b^y$

73. The height of a projectile is modeled by the equation  $y = -2x^2 + 38x + 10$ , where  $x$  is time, in seconds, and  $y$  is height, in feet. During what interval of time, to the nearest tenth of a second, is the projectile at least 125 feet above ground? [The use of the accompanying grid is optional.]



74. Which graph represents the solution set of  $x^2 - x - 12 < 0$ ?

- [A] 
- [B] 
- [C] 
- [D] 

75. What is the value of  $x$  in the equation  $\sqrt{5-2x} = 3i$ ?

- [A] 1            [B] -2            [C] 4            [D] 7

76. Solve for  $x$  in simplest  $a + bi$  form:  
 $x^2 + 8x + 25 = 0$

77. The roots of a quadratic equation are real, rational, and equal when the discriminant is

- [A] -2            [B] 2            [C] 0            [D] 4

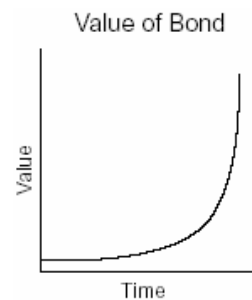
78. For which positive value of  $m$  will the equation  $4x^2 + mx + 9 = 0$  have roots that are real, equal, and rational?

- [A] 12            [B] 4            [C] 9            [D] 3

79. The height,  $f(x)$ , of a bouncing ball after  $x$  bounces is represented by  $f(x) = 80(0.5)^x$ . How many times higher is the first bounce than the fourth bounce?

- [A] 16            [B] 4            [C] 8            [D] 2

80. The accompanying graph represents the value of a bond over time.



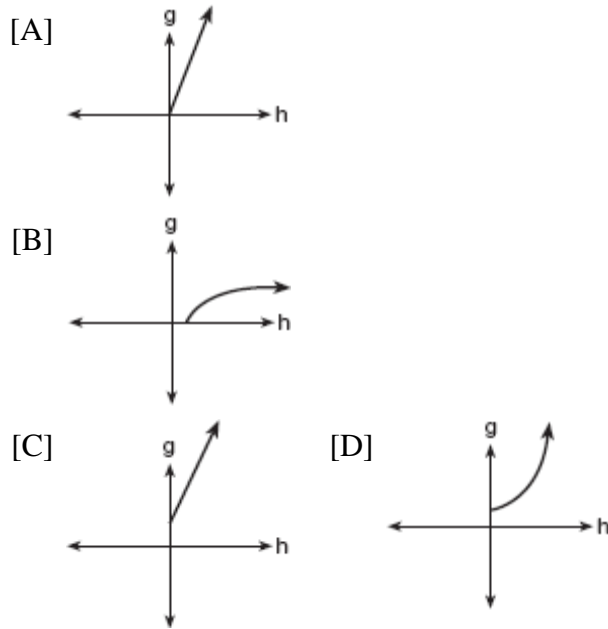
Which type of function does this graph best model?

- [A] logarithmic                      [B] quadratic  
[C] exponential                      [D] trigonometric

81. The expression  $\log_3(8-x)$  is defined for all values of  $x$  such that

- [A]  $x \geq 8$                       [B]  $x \leq 8$   
[C]  $x < 8$                         [D]  $x > 8$

82. The cells of a particular organism increase logarithmically. If  $g$  represents cell growth and  $h$  represents time, in hours, which graph best represents the growth pattern of the cells of this organism?



83. If  $\log x = a$ ,  $\log y = b$ , and  $\log z = c$ , then

$\log \frac{x^2y}{\sqrt{z}}$  is equivalent to

- [A]  $a^2 + b - \frac{1}{2}c$                       [B]  $2a + b - \frac{1}{2}c$   
[C]  $42a + b + \frac{1}{2}c$                       [D]  $2ab - \frac{1}{2}c$

84. The expression  $\log 10^{x+2} - \log 10^x$  is equivalent to

- [A]  $\frac{1}{100}$     [B] 100    [C] -2    [D] 2

85. The solution set of  $2^{x^2+2x} = 2^{-1}$  is

- [A] {1}    [B] {-1}    [C] {}    [D] {-1, 1}

86. Solve algebraically for  $x$ :  $27^{2x+1} = 9^{4x}$

87. Solve for  $m$ :  $3^{m+1} - 5 = 22$

88. Solve algebraically for  $x$ :  $8^{2x} = 4^6$

89. Sean invests \$10,000 at an annual rate of 5% compounded continuously, according to the formula  $A = Pe^{rt}$ , where  $A$  is the amount,  $P$  is the principal,  $e = 2.718$ ,  $r$  is the rate of interest, and  $t$  is time, in years.

Determine, to the *nearest dollar*, the amount of money he will have after 2 years.

Determine how many years, to the *nearest year*, it will take for his initial investment to double.

90. What is the solution set of the equation

$$\frac{x}{x-4} - \frac{1}{x+3} = \frac{28}{x^2 - x - 12}?$$

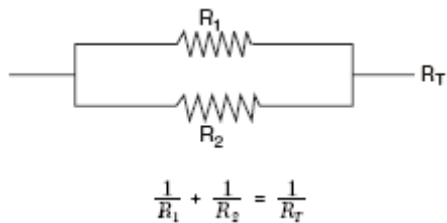
- [A] {4,-6}    [B] {4}    [C] {}    [D] {-6}

91. Solve for  $x$  and express your answer in simplest radical form:

$$\frac{4}{x} - \frac{3}{x+1} = 7$$

92. Solve for all values of  $x$ :  $\frac{9}{x} + \frac{9}{x-2} = 12$

93. Electrical circuits can be connected in series, one after another, or in parallel circuits that branch off a main line. If circuits are hooked up in parallel, the reciprocal of the total resistance in the series is found by adding the reciprocals of each resistance, as shown in the accompanying diagram.



If  $R_1 = x$ ,  $R_2 = x + 3$ , and the total resistance,  $R_T$ , is 2.25 ohms, find the positive value of  $R_1$  to the nearest tenth of an ohm.

94. Is  $\frac{1}{2} \sin 2x$  the same expression as  $\sin x$ ?

Justify your answer.

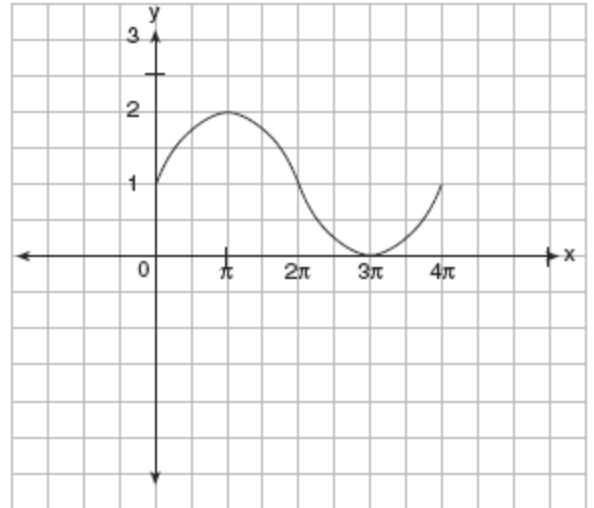
95. A modulated laser heats a diamond. Its variable temperature, in degrees Celsius, is given by  $f(t) = T \sin at$ . What is the period of the curve?

[A]  $\frac{1}{a}$    [B]  $\frac{2\pi}{a}$    [C]  $|T|$    [D]  $\frac{2a\pi}{a}$

96. What is the period of the function  $y = 5 \sin 3x$ ?

[A] 3   [B]  $\frac{2\pi}{5}$    [C]  $\frac{2\pi}{3}$    [D] 5

97. In physics class, Eva noticed the pattern shown in the accompanying diagram on an oscilloscope.



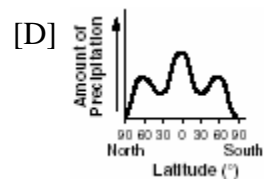
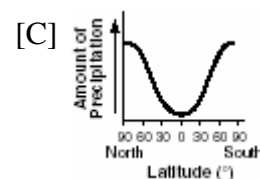
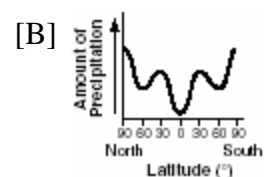
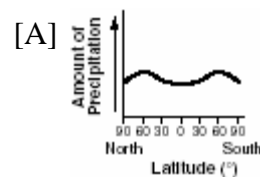
Which equation best represents the pattern shown on this oscilloscope?

[A]  $y = \sin x + 1$


[B]  $y = 2 \sin\left(-\frac{1}{2}x\right) + 1$

[C]  $y = \sin\left(\frac{1}{2}x\right) + 1$    [D]  $y = 2 \sin x + 1$

98. The graphs below show the average annual precipitation received at different latitudes on Earth. Which graph is a translated cosine curve?



99. A pair of figure skaters graphed part of their routine on a grid. The male skater's path is represented by the equation  $m(x) = 3 \sin \frac{1}{2}x$ , and the female skater's path is represented by the equation  $f(x) = -2 \cos x$ . On the accompanying grid, sketch both paths and state how many times the paths of the skaters intersect between  $x = 0$  and  $x = 4\pi$ .



100. An object that weighs 2 pounds is suspended in a liquid. When the object is depressed 3 feet from its equilibrium point, it will oscillate according to the formula  $x = 3 \cos(8t)$ , where  $t$  is the number of seconds after the object is released. How many seconds are in the period of oscillation?

[A]  $\pi$       [B]  $2\pi$       [C]  $\frac{\pi}{4}$       [D] 3

101. The expression  $(1 + \cos x)(1 - \cos x)$  is equivalent to

[A]  $\sec^2 x$                       [B]  $\csc^2 x$   
[C]  $\sin^2 x$                       [D] 1

102. If  $\theta$  is a positive acute angle and  $\sin \theta = a$ , which expression represents  $\cos \theta$  in terms of  $a$ ?

[A]  $\frac{1}{\sqrt{a}}$                       [B]  $\sqrt{a}$   
[C]  $\sqrt{1-a^2}$                       [D]  $\frac{1}{\sqrt{1-a^2}}$

103. The expression  $\frac{\tan \theta}{\sec \theta}$  is equivalent to

[A]  $\frac{\cos^2 \theta}{\sin \theta}$                       [B]  $\cos \theta$   
[C]  $\frac{\sin \theta}{\cos^2 \theta}$                       [D]  $\sin \theta$

104. The expression  $\frac{2 \cos \theta}{\sin 2\theta}$  is equivalent to

[A]  $\cot \theta$                       [B]  $\csc \theta$   
[C]  $\sec \theta$                       [D]  $\sin \theta$

105. The expression  $\frac{1 - \cos^2 x}{\sin^2 x}$  is equivalent to

[A]  $\cos x$       [B]  $\sin x$       [C] 1      [D]  $-1$

106. A crate weighing  $w$  pounds sits on a ramp positioned at an angle of  $\theta$  with the horizontal. The forces acting on this crate are modeled by the equation  $Mw \cos \theta = w \sin \theta$ , where  $M$  is the coefficient of friction. What is an expression for  $M$  in terms of  $\theta$ ?

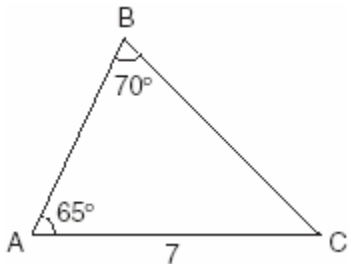
[A]  $M = \cot \theta$                       [B]  $M = \csc \theta$   
[C]  $M = \sec \theta$                       [D]  $M = \tan \theta$

107. Express in simplest terms:  $\frac{2 - 2 \sin^2 x}{\cos x}$

108. If  $\theta$  is an acute angle such that  $\sin \theta = \frac{5}{13}$ , what is the value of  $\sin 2\theta$ ?
- [A]  $\frac{12}{13}$  [B]  $\frac{60}{169}$  [C]  $\frac{120}{169}$  [D]  $\frac{10}{26}$
109. If  $\sin \theta = \frac{\sqrt{5}}{3}$ , then  $\cos 2\theta$  equals
- [A]  $\frac{1}{3}$  [B]  $-\frac{1}{9}$  [C]  $-\frac{1}{3}$  [D]  $\frac{1}{9}$
110. If  $x$  is a positive acute angle and  $\sin x = \frac{1}{2}$ , what is  $\sin 2x$ ?
- [A]  $\frac{1}{2}$  [B]  $-\frac{\sqrt{3}}{2}$  [C]  $-\frac{1}{2}$  [D]  $\frac{\sqrt{3}}{2}$
111. On a monitor, the graphs of two impulses are recorded on the same screen, where  $0^\circ \leq x < 360^\circ$ . The impulses are given by the following equations:
- $$y = 2 \sin^2 x$$
- $$y = 1 - \sin x$$
- Find all values of  $x$ , in degrees, for which the two impulses meet in the interval  $0^\circ \leq x < 360^\circ$ . [Only an algebraic solution will be accepted.]
112. If  $(\sec x - 2)(2 \sec x - 1) = 0$ , then  $x$  terminates in
- [A] Quadrants I and IV, only  
[B] Quadrants I, II, III, and IV  
[C] Quadrants I and II, only  
[D] Quadrant I, only
113. If  $\sin 6A = \cos 9A$ , then  $m\angle A$  is equal to
- [A] 54 [B] 36 [C] 6 [D]  $1\frac{1}{2}$
114. What is a positive value of  $x$  for which  $9^{-\cos x} = \frac{1}{3}$ ?
- [A]  $60^\circ$  [B]  $90^\circ$  [C]  $45^\circ$  [D]  $30^\circ$
115. Navigators aboard ships and airplanes use nautical miles to measure distance. The length of a nautical mile varies with latitude. The length of a nautical mile,  $L$ , in feet, on the latitude line  $\theta$  is given by the formula  $L = 6,077 - 31 \cos 2\theta$ . Find, to the *nearest degree*, the angle  $\theta$ ,  $0 \leq \theta \leq 90^\circ$ , at which the length of a nautical mile is approximately 6,076 feet.
116. Solve algebraically for all values of  $\theta$  in the interval  $0^\circ \leq \theta \leq 360^\circ$  that satisfy the equation  $\frac{\sin^2 \theta}{1 + \cos \theta} = 1$ .
117. Solve the following equation algebraically for all values of  $\theta$  in the interval  $0^\circ \leq x \leq 180^\circ$ .
- $$2 \sin \theta - 1 = 0$$
118. In the interval  $0^\circ \leq A \leq 360^\circ$ , solve for all values of  $A$  in the equation  $\cos 2A = -3 \sin A - 1$ .
119. Find, to the *nearest degree*, all values of  $\theta$  in the interval  $0^\circ < \theta < 360^\circ$  that satisfy the equation  $3 \cos 2\theta + \sin \theta - 1 = 0$ .

120. An architect is using a computer program to design the entrance of a railroad tunnel. The outline of the opening is modeled by the function  $f(x) = 8\sin x + 2$ , in the interval  $0 \leq x \leq \pi$ , where  $x$  is expressed in radians. Solve algebraically for all values of  $x$  in the interval  $0 \leq x \leq \pi$ , where the height of the opening,  $f(x)$ , is 6. Express your answer in terms of  $\pi$ .  
If the  $x$ -axis represents the base of the tunnel, what is the maximum height of the entrance of the tunnel?

121. In the accompanying diagram of  $\triangle ABC$ ,  $m\angle A = 65$ ,  $m\angle B = 70$ , and the side opposite vertex  $B$  is 7. Find the length of the side opposite vertex  $A$ , and find the area of  $\triangle ABC$ .



122. The number of children of each of the first 41 United States presidents is given in the accompanying table. For this population, determine the mean and the standard deviation to the *nearest tenth*.  
How many of these presidents fall within one standard deviation of the mean?

Number of Children ( $x_i$ )	Number of Presidents ( $f_i$ )
0	6
1	2
2	8
3	6
4	7
5	3
6	5
7	1
8	1
10	1
15	1

123. From 1984 to 1995, the winning scores for a golf tournament were 276, 279, 279, 277, 278, 278, 280, 282, 285, 272, 279, and 278. Using the standard deviation for the sample,  $S_x$ , find the percent of these winning scores that fall within one standard deviation of the mean.