

0809ia

- 1 If h represents a number, which equation is a correct translation of "Sixty more than 9 times a number is 375"?
- 1) $9h = 375$
 - 2) $9h + 60 = 375$
 - 3) $9h - 60 = 375$
 - 4) $60h + 9 = 375$

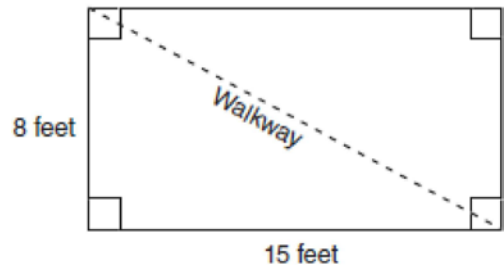
- 2 Which expression is equivalent to $9x^2 - 16$?
- 1) $(3x + 4)(3x - 4)$
 - 2) $(3x - 4)(3x - 4)$
 - 3) $(3x + 8)(3x - 8)$
 - 4) $(3x - 8)(3x - 8)$

- 3 Which expression represents $(3x^2y^4)(4xy^2)$ in simplest form?
- 1) $12x^2y^8$
 - 2) $12x^2y^6$
 - 3) $12x^3y^8$
 - 4) $12x^3y^6$

- 4 An online music club has a one-time registration fee of \$13.95 and charges \$0.49 to buy each song. If Emma has \$50.00 to join the club and buy songs, what is the maximum number of songs she can buy?
- 1) 73
 - 2) 74
 - 3) 130
 - 4) 131

- 5 The local ice cream stand offers three flavors of soft-serve ice cream: vanilla, chocolate, and strawberry; two types of cone: sugar and wafer; and three toppings: sprinkles, nuts, and cookie crumbs. If Dawn does not order vanilla ice cream, how many different choices can she make that have one flavor of ice cream, one type of cone, and one topping?
- 1) 7
 - 2) 8
 - 3) 12
 - 4) 18

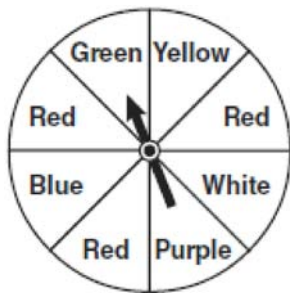
- 6 Nancy's rectangular garden is represented in the diagram below.



If a diagonal walkway crosses her garden, what is its length, in feet?

- 1) 17
- 2) 22
- 3) $\sqrt{161}$
- 4) $\sqrt{529}$

- 7 The spinner below is divided into eight equal regions and is spun once. What is the probability of *not* getting red?



- 1) $\frac{3}{5}$
 2) $\frac{3}{8}$
 3) $\frac{5}{8}$
 4) $\frac{7}{8}$
- 8 Which relationship can best be described as causal?
 1) height and intelligence
 2) shoe size and running speed
 3) number of correct answers on a test and test score
 4) number of students in a class and number of students with brown hair

9 Solve for x : $\frac{3}{5}(x+2) = x - 4$

- 1) 8
 2) 13
 3) 15
 4) 23

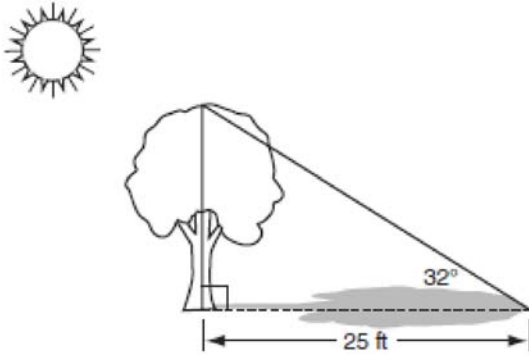
- 10 Erica is conducting a survey about the proposed increase in the sports budget in the Hometown School District. Which survey method would likely contain the most bias?
 1) Erica asks every third person entering the Hometown Grocery Store.
 2) Erica asks every third person leaving the Hometown Shopping Mall this weekend.
 3) Erica asks every fifth student entering Hometown High School on Monday morning.
 4) Erica asks every fifth person leaving Saturday's Hometown High School football game.

- 11 Which equation represents a line parallel to the x -axis?
 1) $y = -5$
 2) $y = -5x$
 3) $x = 3$
 4) $x = 3y$

- 12 Given:
 $A = \{\text{All even integers from 2 to 20, inclusive}\}$
 $B = \{10, 12, 14, 16, 18\}$
 What is the complement of set B within the universe of set A ?
 1) $\{4, 6, 8\}$
 2) $\{2, 4, 6, 8\}$
 3) $\{4, 6, 8, 20\}$
 4) $\{2, 4, 6, 8, 20\}$

- 13 Which value of x is in the solution set of the inequality $-2(x - 5) < 4$?
 1) 0
 2) 2
 3) 3
 4) 5

- 14 A tree casts a 25-foot shadow on a sunny day, as shown in the diagram below.

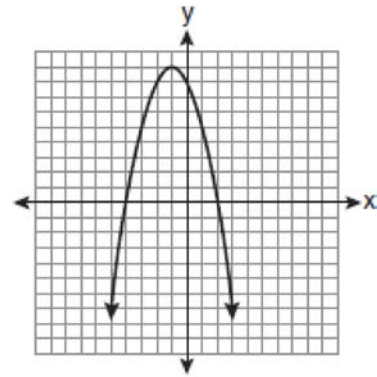


If the angle of elevation from the tip of the shadow to the top of the tree is 32° , what is the height of the tree to the nearest tenth of a foot?

- 1) 13.2
 - 2) 15.6
 - 3) 21.2
 - 4) 40.0
- 15 What is the slope of the line that passes through the points $(-5, 4)$ and $(15, -4)$?

- 1) $-\frac{2}{5}$
- 2) 0
- 3) $-\frac{5}{2}$
- 4) undefined

- 16 The equation $y = -x^2 - 2x + 8$ is graphed on the set of axes below.



Based on this graph, what are the roots of the equation $-x^2 - 2x + 8 = 0$?

- 1) 8 and 0
 - 2) 2 and -4
 - 3) 9 and -1
 - 4) 4 and -2
- 17 What is the sum of $\frac{3}{2x}$ and $\frac{4}{3x}$ expressed in simplest form?

- 1) $\frac{12}{6x^2}$
- 2) $\frac{17}{6x}$
- 3) $\frac{7}{5x}$
- 4) $\frac{17}{12x}$

18 Which value of x makes the expression

$$\frac{x^2 - 9}{x^2 + 7x + 10} \text{ undefined?}$$

- 1) -5
- 2) 2
- 3) 3
- 4) -3

19 Which relation is *not* a function?

- 1) $\{(1, 5), (2, 6), (3, 6), (4, 7)\}$
- 2) $\{(4, 7), (2, 1), (-3, 6), (3, 4)\}$
- 3) $\{(-1, 6), (1, 3), (2, 5), (1, 7)\}$
- 4) $\{(-1, 2), (0, 5), (5, 0), (2, -1)\}$

20 What is the value of the y -coordinate of the solution to the system of equations $x - 2y = 1$ and $x + 4y = 7$?

- 1) 1
- 2) -1
- 3) 3
- 4) 4

21 The solution to the equation $x^2 - 6x = 0$ is

- 1) 0 , only
- 2) 6 , only
- 3) 0 and 6
- 4) $\pm\sqrt{6}$


22 When $5\sqrt{20}$ is written in simplest radical form, the result is $k\sqrt{5}$. What is the value of k ?

- 1) 20
- 2) 10
- 3) 7
- 4) 4

23 What is the value of the expression $|-5x + 12|$ when $x = 5$?

- 1) -37
- 2) -13
- 3) 13
- 4) 37

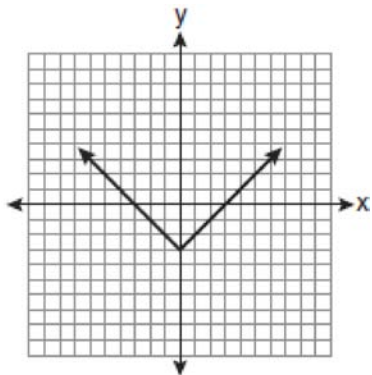
24 A playground in a local community consists of a rectangle and two semicircles, as shown in the diagram below.



Which expression represents the amount of fencing, in yards, that would be needed to completely enclose the playground?

- 1) $15\pi + 50$
- 2) $15\pi + 80$
- 3) $30\pi + 50$
- 4) $30\pi + 80$

25 Which equation is represented by the graph below?



- 1) $y = x^2 - 3$
- 2) $y = (x - 3)^2$
- 3) $y = |x| - 3$
- 4) $y = |x - 3|$

26 Carrie bought new carpet for her living room. She calculated the area of the living room to be 174.2 square feet. The actual area was 149.6 square feet. What is the relative error of the area to the *nearest ten-thousandth*?

- 1) 0.1412
- 2) 0.1644
- 3) 1.8588
- 4) 2.1644

27 What is an equation of the line that passes through the point $(3, -1)$ and has a slope of 2?

- 1) $y = 2x + 5$
- 2) $y = 2x - 1$
- 3) $y = 2x - 4$
- 4) $y = 2x - 7$

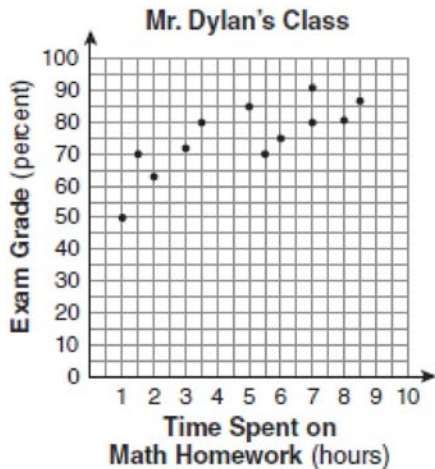
28 The ages of three brothers are consecutive even integers. Three times the age of the youngest brother exceeds the oldest brother's age by 48 years. What is the age of the youngest brother?

- 1) 14
- 2) 18
- 3) 22
- 4) 26

29 Cassandra bought an antique dresser for \$500. If the value of her dresser increases 6% annually, what will be the value of Cassandra's dresser at the end of 3 years to the *nearest dollar*?

- 1) \$415
- 2) \$590
- 3) \$596
- 4) \$770

- 30 The number of hours spent on math homework each week and the final exam grades for twelve students in Mr. Dylan's algebra class are plotted below.



Based on a line of best fit, which exam grade is the best prediction for a student who spends about 4 hours on math homework each week?

- 1) 62
- 2) 72
- 3) 82
- 4) 92

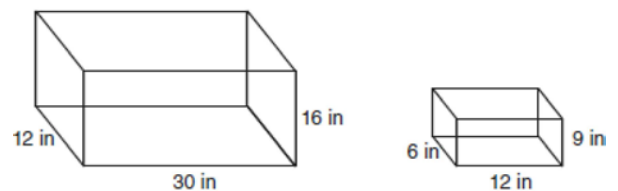
- 31 Chad complained to his friend that he had five equations to solve for homework. Are all of the homework problems equations? Justify your answer.

Math Homework

1. $3x^2 \cdot 2x^4$
2. $5 - 2x = 3x$
3. $3(2x + 7)$
4. $7x^2 + 2x - 3x^2 - 9$
5. $\frac{2}{3} = \frac{x+2}{6}$

Name Chad

- 32 The diagram below represents Joe's two fish tanks.



Joe's larger tank is completely filled with water. He takes water from it to completely fill the small tank. Determine how many cubic inches of water will remain in the larger tank.

- 33 Clayton has three fair coins. Find the probability that he gets two tails and one head when he flips the three coins.

34 Find algebraically the equation of the axis of symmetry and the coordinates of the vertex of the parabola whose equation is $y = -2x^2 - 8x + 3$.

35 At the end of week one, a stock had increased in value from \$5.75 a share to \$7.50 a share. Find the percent of increase at the end of week one to the *nearest tenth of a percent*. At the end of week two, the same stock had decreased in value from \$7.50 to \$5.75. Is the percent of decrease at the end of week two the same as the percent of increase at the end of week one? Justify your answer.

36 The chart below compares two runners.

Runner	Distance, in miles	Time, in hours
Greg	11	2
Dave	16	3


Based on the information in this chart, state which runner has the faster rate. Justify your answer.

37 Express in simplest form: $\frac{2x^2 - 8x - 42}{6x^2} \div \frac{x^2 - 9}{x^2 - 3x}$

38 On the grid below, solve the system of equations graphically for x and y .

$$4x - 2y = 10$$

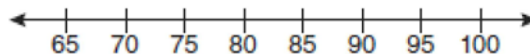
$$y = -2x - 1$$



39 The test scores from Mrs. Gray's math class are shown below.

72, 73, 66, 71, 82, 85, 95, 85, 86, 89, 91, 92

Construct a box-and-whisker plot to display these data.

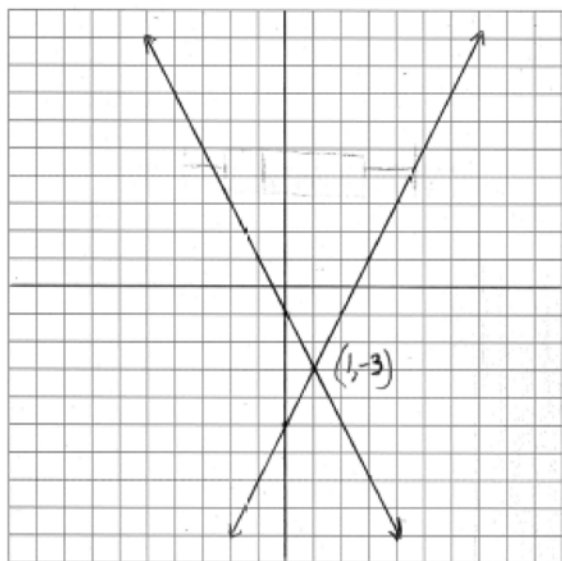


0809ia
Answer Section

1	ANS: 2 TOP: Modeling Equations	PTS: 2	REF: 080901ia	STA: A.A.4
2	ANS: 1 TOP: Factoring the Difference of Perfect Squares	PTS: 2	REF: 080902ia	STA: A.A.19
3	ANS: 4 TOP: Multiplication of Powers	PTS: 2	REF: 080903ia	STA: A.A.12
4	ANS: 1 TOP: Modeling Inequalities	PTS: 2	REF: 080904ia	STA: A.A.6
5	ANS: 3 TOP: Conditional Probability	PTS: 2	REF: 080905ia	STA: A.N.7
6	ANS: 1 TOP: Pythagoras	PTS: 2	REF: 080906ia	STA: A.A.45
7	ANS: 3 TOP: Theoretical Probability	PTS: 2	REF: 080907ia	STA: A.S.20
8	ANS: 3 TOP: Analysis of Data	PTS: 2	REF: 080908ia	STA: A.S.13
9	ANS: 2 TOP: Solving Equations with Fractional Expressions	PTS: 2	REF: 080909ia	STA: A.A.25
10	ANS: 4 TOP: Analysis of Data	PTS: 2	REF: 080910ia	STA: A.S.3
11	ANS: 1 TOP: Parallel and Perpendicular Lines	PTS: 2	REF: 080911ia	STA: A.A.36
12	ANS: 4 TOP: Set Theory	PTS: 2	REF: 080912ia	STA: A.A.30
13	ANS: 4 TOP: Interpreting Solutions	PTS: 2	REF: 080913ia	STA: A.A.21
14	ANS: 2 TOP: Using Trigonometry to Find a Side	PTS: 2	REF: 080914ia	STA: A.A.44
15	ANS: 1 TOP: Slope	PTS: 2	REF: 080915ia	STA: A.A.33
16	ANS: 2 TOP: Solving Quadratics by Graphing	PTS: 2	REF: 080916ia	STA: A.G.8
17	ANS: 2 TOP: Addition and Subtraction of Rationals	PTS: 2	REF: 080917ia	STA: A.A.17
18	ANS: 1 TOP: Undefined Rationals	PTS: 2	REF: 080918ia	STA: A.A.15
19	ANS: 3 TOP: Defining Functions	PTS: 2	REF: 080919ia	STA: A.G.3
20	ANS: 1 TOP: Solving Linear Systems	PTS: 2	REF: 080920ia	STA: A.A.10
21	ANS: 3 TOP: Solving Quadratics by Factoring	PTS: 2	REF: 080921ia	STA: A.A.27
22	ANS: 2 TOP: Simplifying Radicals	PTS: 2	REF: 080922ia	STA: A.N.2

- 23 ANS: 3 PTS: 2 REF: 080923ia STA: A.N.6
TOP: Absolute Value
- 24 ANS: 1 PTS: 2 REF: 080924ia STA: A.G.1
TOP: Compositions of Polygons and Circles
- 25 ANS: 3 PTS: 2 REF: 080925ia STA: A.G.4
TOP: Identifying the Equation of a Graph
- 26 ANS: 2 PTS: 2 REF: 080926ia STA: A.M.3
TOP: Error
- 27 ANS: 4 PTS: 2 REF: 080927ia STA: A.A.34
TOP: Writing Linear Equations
- 28 ANS: 4 PTS: 2 REF: 080928ia STA: A.A.6
TOP: Modeling Equations
- 29 ANS: 3 PTS: 2 REF: 080929ia STA: A.A.9
TOP: Exponential Functions
- 30 ANS: 2 PTS: 2 REF: 080930ia STA: A.S.17
TOP: Scatter Plots
- 31 ANS:
No, problems 1, 3 and 4 are expressions
- PTS: 2 REF: 080931ia STA: A.A.3 TOP: Expressions
- 32 ANS:
5,112
- PTS: 2 REF: 080932ia STA: A.G.2 TOP: Volume
- 33 ANS:
 $\frac{3}{8}$
- PTS: 2 REF: 080933ia STA: A.S.19 TOP: Sample Space
- 34 ANS:
(-2,11)
- PTS: 3 REF: 080934ia STA: A.A.41
TOP: Identifying the Vertex of a Quadratic Given Equation
- 35 ANS:
30.4%; no, 23.3%
- PTS: 3 REF: 080935ia STA: A.N.5 TOP: Percents
- 36 ANS:
Greg's rate of 5.5 is faster than Dave's rate of 5.3
- PTS: 3 REF: 080936ia STA: A.M.1 TOP: Speed
- 37 ANS:
 $\frac{x-7}{3x}$
- PTS: 4 REF: 080937ia STA: A.A.18 TOP: Multiplication and Division of Rationals

38 ANS:




PTS: 4

REF: 080938ia

STA: A.G.7

TOP: Solving Linear Systems

39 ANS:



PTS: 4

REF: 080939ia

STA: A.S.5

TOP: Box-and-Whisker Plots