

The University of the State of New York  
REGENTS HIGH SCHOOL EXAMINATION

**PHYSICAL SETTING**  
**PHYSICS**

**Wednesday, June 15, 2011 — 1:15 to 4:15 p.m., only**

The answers to *all* questions in this examination are to be written in your separate answer booklet. Be sure to fill in the heading on the front of your answer booklet.

You are to answer all questions in all parts of this examination according to the directions provided in the examination booklet. All work should be written in pen, except for graphs and drawings, which should be done in pencil. You may use scrap paper to work out the answers to the questions, but be sure to record all your answers in the answer booklet.

When you have completed the examination, you must sign the statement printed on the first page of your answer booklet, indicating that you had no unlawful knowledge of the questions or answers prior to the examination and that you have neither given nor received assistance in answering any of the questions during the examination. Your answer booklet cannot be accepted if you fail to sign this declaration.

Notice. . .

A scientific or graphing calculator, a centimeter ruler, a protractor, and a copy of the *2006 Edition Reference Tables for Physical Setting/Physics*, which you may need to answer some questions in this examination, must be available for your use while taking this examination.

The use of any communications device is strictly prohibited when taking this examination. If you use any communications device, no matter how briefly, your examination will be invalidated and no score will be calculated for you.

**DO NOT OPEN THIS EXAMINATION BOOKLET UNTIL THE SIGNAL IS GIVEN.**

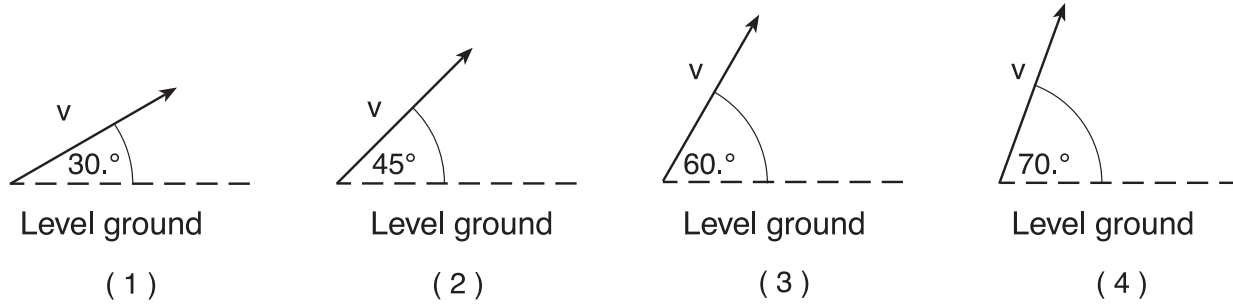
## Part A

### Answer all questions in this part.

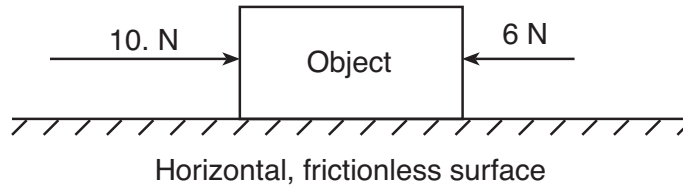
*Directions (1–35):* For *each* statement or question, write in your answer booklet the *number* of the word or expression that, of those given, best completes the statement or answers the question.

- 1 Scalar is to vector as  
(1) speed is to velocity  
(2) displacement is to distance  
(3) displacement is to velocity  
(4) speed is to distance
- 2 If a car accelerates uniformly from rest to 15 meters per second over a distance of 100. meters, the magnitude of the car's acceleration is  
(1) 0.15 m/s<sup>2</sup>  
(2) 1.1 m/s<sup>2</sup>  
(3) 2.3 m/s<sup>2</sup>  
(4) 6.7 m/s<sup>2</sup>
- 3 An object accelerates uniformly from 3.0 meters per second east to 8.0 meters per second east in 2.0 seconds. What is the magnitude of the acceleration of the object?  
(1) 2.5 m/s<sup>2</sup>  
(2) 5.0 m/s<sup>2</sup>  
(3) 5.5 m/s<sup>2</sup>  
(4) 11 m/s<sup>2</sup>
- 4 A rock is dropped from a bridge. What happens to the magnitude of the acceleration and the speed of the rock as it falls? [Neglect friction.]  
(1) Both acceleration and speed increase.  
(2) Both acceleration and speed remain the same.  
(3) Acceleration increases and speed decreases.  
(4) Acceleration remains the same and speed increases.
- 5 A soccer ball kicked on a level field has an initial vertical velocity component of 15.0 meters per second. Assuming the ball lands at the same height from which it was kicked, what is the total time the ball is in the air? [Neglect friction.]  
(1) 0.654 s  
(2) 1.53 s  
(3) 3.06 s  
(4) 6.12 s
- 6 A student is standing in an elevator that is accelerating downward. The force that the student exerts on the floor of the elevator must be  
(1) less than the weight of the student when at rest  
(2) greater than the weight of the student when at rest  
(3) less than the force of the floor on the student  
(4) greater than the force of the floor on the student
- 7 The magnitude of the centripetal force acting on an object traveling in a horizontal, circular path will *decrease* if the  
(1) radius of the path is increased  
(2) mass of the object is increased  
(3) direction of motion of the object is reversed  
(4) speed of the object is increased
- 8 The centripetal force acting on the space shuttle as it orbits Earth is equal to the shuttle's  
(1) inertia  
(2) momentum  
(3) velocity  
(4) weight
- 9 As a box is pushed 30. meters across a horizontal floor by a constant horizontal force of 25 newtons, the kinetic energy of the box increases by 300. joules. How much total internal energy is produced during this process?  
(1) 150 J  
(2) 250 J  
(3) 450 J  
(4) 750 J
- 10 What is the power output of an electric motor that lifts a 2.0-kilogram block 15 meters vertically in 6.0 seconds?  
(1) 5.0 J  
(2) 5.0 W  
(3) 49 J  
(4) 49 W

- 11 Four identical projectiles are launched with the same initial speed,  $v$ , but at various angles above the level ground. Which diagram represents the initial velocity of the projectile that will have the largest total horizontal displacement? [Neglect air resistance.]

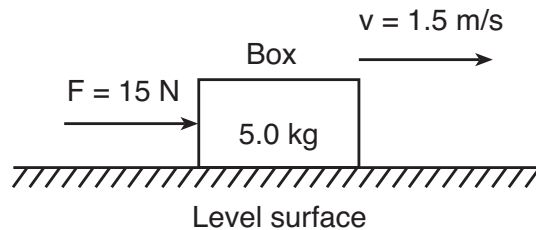


- 12 Two forces act concurrently on an object on a horizontal, frictionless surface, as shown in the diagram below.



What additional force, when applied to the object, will establish equilibrium?

- (1) 16 N toward the right  
 (2) 16 N toward the left  
 (3) 4 N toward the right  
 (4) 4 N toward the left
- 13 As shown in the diagram below, an open box and its contents have a combined mass of 5.0 kilograms. A horizontal force of 15 newtons is required to push the box at a constant speed of 1.5 meters per second across a level surface.



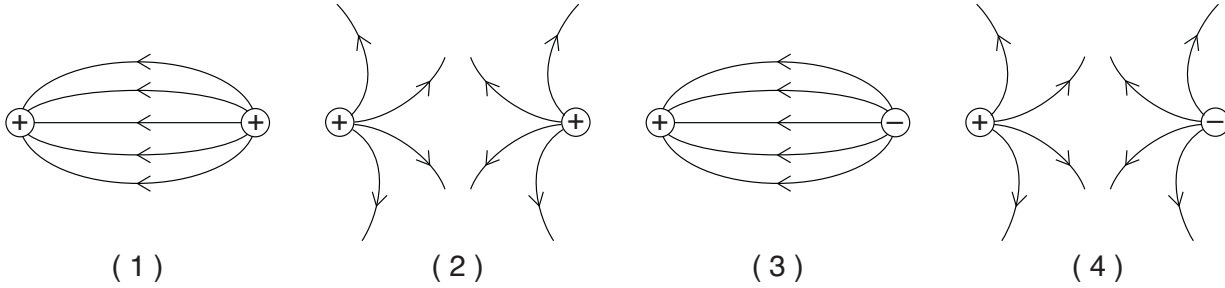
The inertia of the box and its contents increases if there is an increase in the

- (1) speed of the box  
 (2) mass of the contents of the box  
 (3) magnitude of the horizontal force applied to the box  
 (4) coefficient of kinetic friction between the box and the level surface

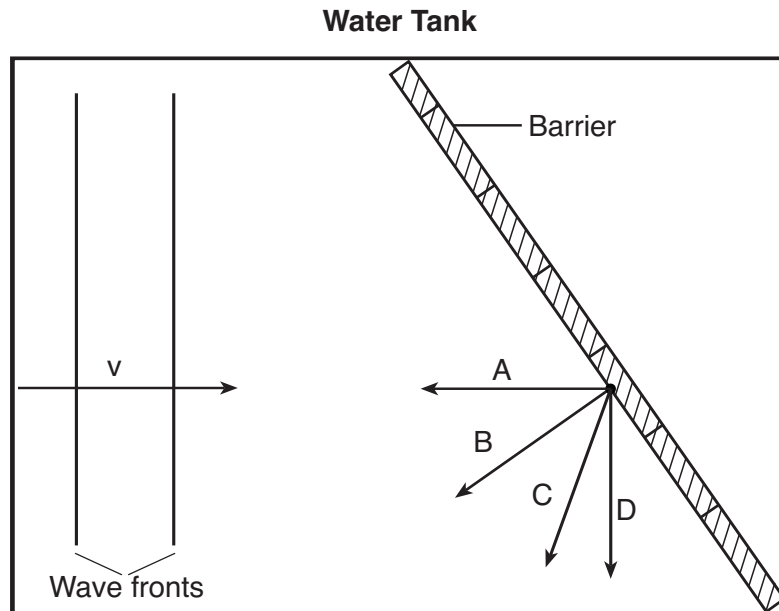
14 Which statement describes the kinetic energy and total mechanical energy of a block as it is pulled at constant speed up an incline?

- (1) Kinetic energy decreases and total mechanical energy increases.
- (2) Kinetic energy decreases and total mechanical energy remains the same.
- (3) Kinetic energy remains the same and total mechanical energy increases.
- (4) Kinetic energy remains the same and total mechanical energy remains the same.

15 Which diagram represents the electric field lines between two small electrically charged spheres?



16 The diagram below represents a view from above of a tank of water in which parallel wave fronts are traveling toward a barrier.



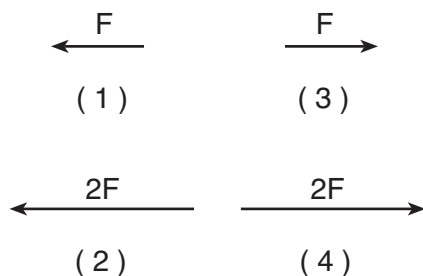
Which arrow represents the direction of travel for the wave fronts after being reflected from the barrier?

- (1) *A*
- (2) *B*
- (3) *C*
- (4) *D*

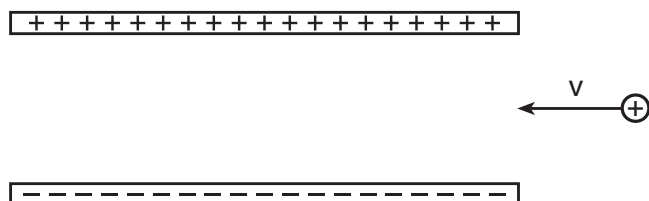
- 17 Two metal spheres, *A* and *B*, possess charges of 1.0 microcoulomb and 2.0 microcoulombs, respectively. In the diagram below, arrow *F* represents the electrostatic force exerted on sphere *B* by sphere *A*.



Which arrow represents the magnitude and direction of the electrostatic force exerted on sphere *A* by sphere *B*?



- 18 The diagram below represents a positively charged particle about to enter the electric field between two oppositely charged parallel plates.



The electric field will deflect the particle

- (1) into the page  
 (2) out of the page  
 (3) toward the top of the page  
 (4) toward the bottom of the page
- 19 What is the total amount of work required to move a proton through a potential difference of 100. volts?
- (1)  $1.60 \times 10^{-21}$  J      (3)  $1.00 \times 10^2$  J  
 (2)  $1.60 \times 10^{-17}$  J      (4)  $6.25 \times 10^{20}$  J

- 20 What is the current through a wire if 240 coulombs of charge pass through the wire in 2.0 minutes?

- (1) 120 A      (3) 0.50 A  
 (2) 2.0 A      (4) 0.0083 A

- 21 An electric circuit consists of a variable resistor connected to a source of constant potential difference. If the resistance of the resistor is doubled, the current through the resistor is

- (1) halved      (3) quartered  
 (2) doubled      (4) quadrupled

- 22 Circuit *A* has four 3.0-ohm resistors connected in series with a 24-volt battery, and circuit *B* has two 3.0-ohm resistors connected in series with a 24-volt battery. Compared to the total potential drop across circuit *A*, the total potential drop across circuit *B* is

- (1) one-half as great      (3) the same  
 (2) twice as great      (4) four times as great

- 23 How much total energy is dissipated in 10. seconds in a 4.0-ohm resistor with a current of 0.50 ampere?

- (1) 2.5 J      (3) 10. J  
 (2) 5.0 J      (4) 20. J

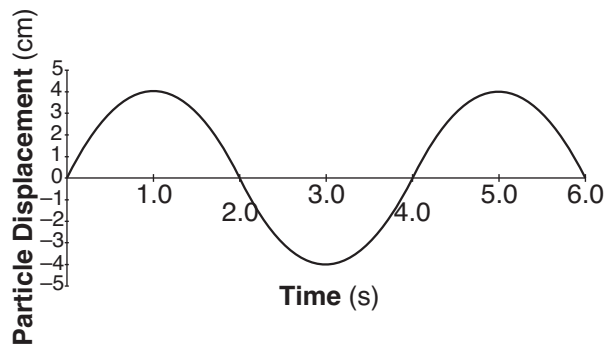
- 24 Moving a length of copper wire through a magnetic field may cause the wire to have a

- (1) potential difference across it  
 (2) lower temperature  
 (3) lower resistivity  
 (4) higher resistance

- 25 A pulse traveled the length of a stretched spring. The pulse transferred

- (1) energy, only  
 (2) mass, only  
 (3) both energy and mass  
 (4) neither energy nor mass

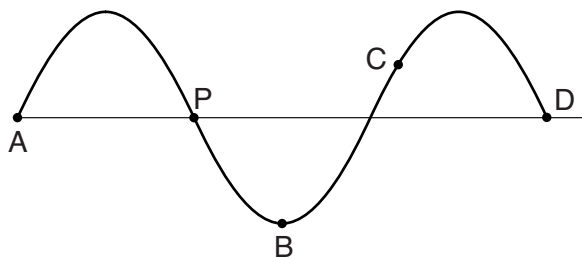
- 26 The graph below represents the displacement of a particle in a medium over a period of time.



The amplitude of the wave is

- (1) 4.0 s                                      (3) 8 cm  
 (2) 6.0 s                                      (4) 4 cm
- 27 What is the period of a water wave if 4.0 complete waves pass a fixed point in 10. seconds?
- (1) 0.25 s                                      (3) 2.5 s  
 (2) 0.40 s                                      (4) 4.0 s

- 28 The diagram below represents a periodic wave.



Which point on the wave is  $90^\circ$  out of phase with point  $P$ ?

- (1) A    (3) C  
 (2) B    (4) D
- 29 What is the wavelength of a 256-hertz sound wave in air at STP?
- (1)  $1.17 \times 10^6$  m                              (3) 0.773 m  
 (2) 1.29 m                                      (4)  $8.53 \times 10^{-7}$  m
- 30 What is the minimum total energy released when an electron and its antiparticle (positron) annihilate each other?
- (1)  $1.64 \times 10^{-13}$  J                              (3)  $5.47 \times 10^{-22}$  J  
 (2)  $8.20 \times 10^{-14}$  J                              (4)  $2.73 \times 10^{-22}$  J

- 31 Which statement correctly describes one characteristic of a sound wave?

- (1) A sound wave can travel through a vacuum.  
 (2) A sound wave is a transverse wave.  
 (3) The amount of energy a sound wave transmits is directly related to the wave's amplitude.  
 (4) The amount of energy a sound wave transmits is inversely related to the wave's frequency.

- 32 A 256-hertz vibrating tuning fork is brought near a nonvibrating 256-hertz tuning fork. The second tuning fork begins to vibrate. Which phenomenon causes the nonvibrating tuning fork to begin to vibrate?

- (1) resistance                                      (3) refraction  
 (2) resonance                                      (4) reflection

- 33 Astronauts traveling toward Earth in a fast-moving spacecraft receive a radio signal from an antenna on Earth. Compared to the frequency and wavelength of the radio signal emitted from the antenna, the radio signal received by the astronauts has a

- (1) lower frequency and a shorter wavelength  
 (2) lower frequency and a longer wavelength  
 (3) higher frequency and a shorter wavelength  
 (4) higher frequency and a longer wavelength

- 34 On the atomic level, energy and matter exhibit the characteristics of

- (1) particles, only  
 (2) waves, only  
 (3) neither particles nor waves  
 (4) both particles and waves

- 35 Which particles are *not* affected by the strong force?

- (1) hadrons                                      (3) neutrons  
 (2) protons                                      (4) electrons

**Part B-1**

**Answer all questions in this part.**

*Directions (36–50):* For *each* statement or question, write in your answer booklet the *number* of the word or expression that, of those given, best completes the statement or answers the question.

36 What is the approximate diameter of an inflated basketball?

- (1)  $2 \times 10^{-2}$  m                      (3)  $2 \times 10^0$  m  
 (2)  $2 \times 10^{-1}$  m                      (4)  $2 \times 10^1$  m

37 The graph below shows the relationship between the speed and elapsed time for an object falling freely from rest near the surface of a planet.



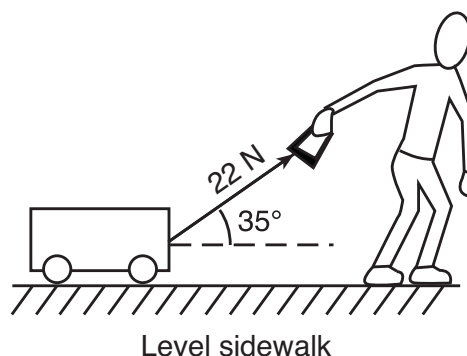
What is the total distance the object falls during the first 3.0 seconds?

- (1) 12 m                                      (3) 44 m  
 (2) 24 m                                      (4) 72 m

38 A 75-kilogram hockey player is skating across the ice at a speed of 6.0 meters per second. What is the magnitude of the average force required to stop the player in 0.65 second?

- (1) 120 N                                      (3) 690 N  
 (2) 290 N                                      (4) 920 N

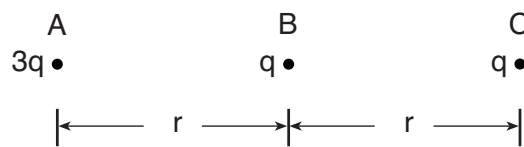
39 A child pulls a wagon at a constant velocity along a level sidewalk. The child does this by applying a 22-newton force to the wagon handle, which is inclined at  $35^\circ$  to the sidewalk as shown below.



What is the magnitude of the force of friction on the wagon?

- (1) 11 N                                      (3) 18 N  
 (2) 13 N                                      (4) 22 N

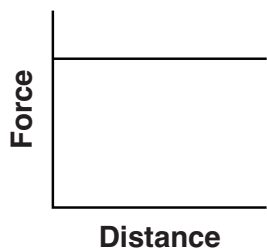
40 The diagram below shows the arrangement of three small spheres, A, B, and C, having charges of  $3q$ ,  $q$ , and  $q$ , respectively. Spheres A and C are located distance  $r$  from sphere B.



Compared to the magnitude of the electrostatic force exerted by sphere B on sphere C, the magnitude of the electrostatic force exerted by sphere A on sphere C is

- (1) the same                                      (3)  $\frac{3}{4}$  as great  
 (2) twice as great                                      (4)  $\frac{3}{2}$  as great

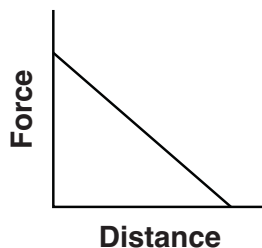
- 41 A space probe is launched into space from Earth's surface. Which graph represents the relationship between the magnitude of the gravitational force exerted on Earth by the space probe and the distance between the space probe and the center of Earth?



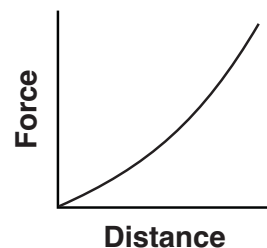
(1)



(2)

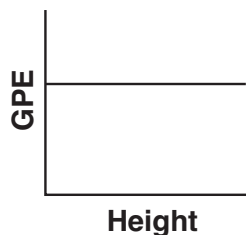


(3)

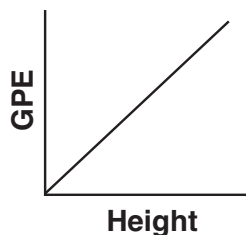


(4)

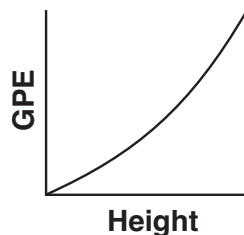
- 42 Which graph represents the relationship between the gravitational potential energy (*GPE*) of an object near the surface of Earth and its height above the surface of Earth?



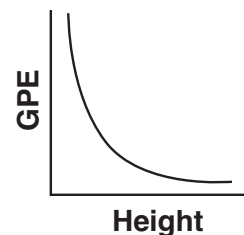
(1)



(2)

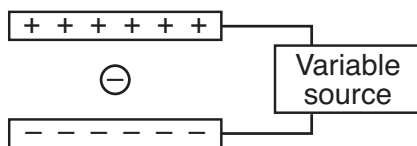


(3)

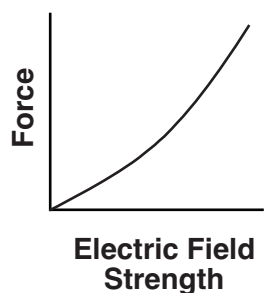


(4)


- 43 Two parallel metal plates are connected to a variable source of potential difference. When the potential difference of the source is increased, the magnitude of the electric field strength between the plates increases. The diagram below shows an electron located between the plates.



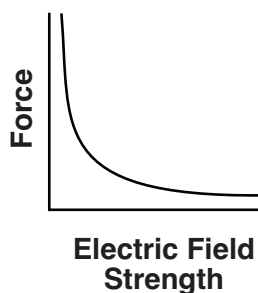
- Which graph represents the relationship between the magnitude of the electrostatic force on the electron and the magnitude of the electric field strength between the plates?



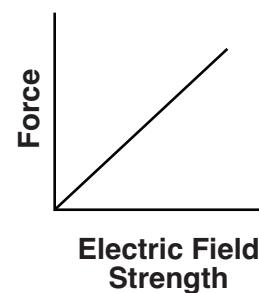
(1)



(2)



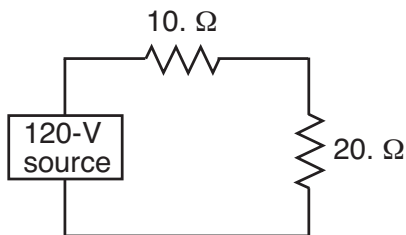
(3)



(4)



- 44 The diagram below represents a circuit consisting of two resistors connected to a source of potential difference.



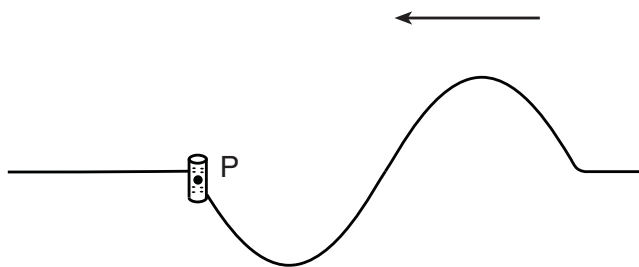
What is the current through the 20.-ohm resistor?

- (1) 0.25 A                      (3) 12 A  
 (2) 6.0 A                        (4) 4.0 A
- 45 The diagram below shows the magnetic field lines between two magnetic poles, A and B.



Which statement describes the polarity of magnetic poles A and B?

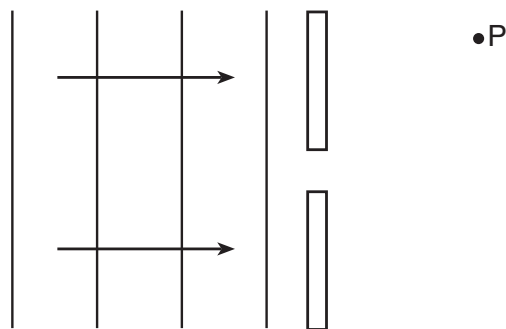
- (1) A is a north pole and B is a south pole.  
 (2) A is a south pole and B is a north pole.  
 (3) Both A and B are north poles.  
 (4) Both A and B are south poles.
- 46 The diagram below represents a transverse water wave propagating toward the left. A cork is floating on the water's surface at point P.



In which direction will the cork move as the wave passes point P?

- (1) up, then down, then up  
 (2) down, then up, then down  
 (3) left, then right, then left  
 (4) right, then left, then right

- 47 The diagram below shows a series of wave fronts approaching an opening in a barrier. Point P is located on the opposite side of the barrier.



The wave fronts reach point P as a result of

- (1) resonance                      (3) reflection  
 (2) refraction                        (4) diffraction
- 48 The diagram below represents a standing wave.

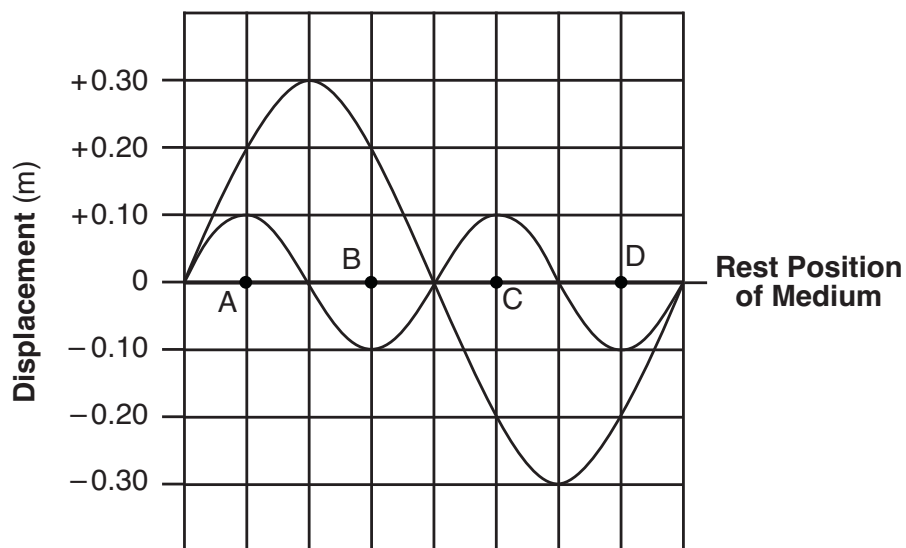


The number of nodes and antinodes shown in the diagram is

- (1) 4 nodes and 5 antinodes  
 (2) 5 nodes and 6 antinodes  
 (3) 6 nodes and 5 antinodes  
 (4) 6 nodes and 10 antinodes
- 49 A deuterium nucleus consists of one proton and one neutron. The quark composition of a deuterium nucleus is

- (1) 2 up quarks and 2 down quarks  
 (2) 2 up quarks and 4 down quarks  
 (3) 3 up quarks and 3 down quarks  
 (4) 4 up quarks and 2 down quarks

50 The diagram below shows two waves traveling in the same medium. Points *A*, *B*, *C*, and *D* are located along the rest position of the medium. The waves interfere to produce a resultant wave.



The superposition of the waves produces the greatest positive displacement of the medium from its rest position at point

- (1) *A*
- (2) *B*
- (3) *C*
- (4) *D*

**Part B-2**

**Answer all questions in this part.**

*Directions* (51–65): Record your answers in the spaces provided in your answer booklet.

51–52 A 0.50-kilogram frog is at rest on the bank surrounding a pond of water. As the frog leaps from the bank, the magnitude of the acceleration of the frog is 3.0 meters per second<sup>2</sup>. Calculate the magnitude of the net force exerted on the frog as it leaps. [Show all work, including the equation and substitution with units.] [2]

Base your answers to questions 53 through 55 on the information below.

A student and the waxed skis he is wearing have a combined weight of 850 newtons. The skier travels down a snow-covered hill and then glides to the east across a snow-covered, horizontal surface.

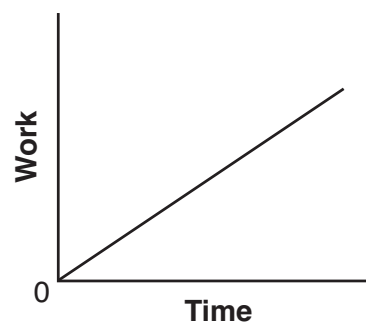
53 Determine the magnitude of the normal force exerted by the snow on the skis as the skier glides across the horizontal surface. [1]

54–55 Calculate the magnitude of the force of friction acting on the skis as the skier glides across the snow-covered, horizontal surface. [Show all work, including the equation and substitution with units.] [2]

56–57 Calculate the kinetic energy of a particle with a mass of  $3.34 \times 10^{-27}$  kilogram and a speed of  $2.89 \times 10^5$  meters per second. [Show all work, including the equation and substitution with units.] [2]

58 A simple circuit consists of a 100.-ohm resistor connected to a battery. A 25-ohm resistor is to be connected in the circuit. Determine the *smallest* equivalent resistance possible when both resistors are connected to the battery. [1]

59 The graph below represents the relationship between the work done by a person and time.



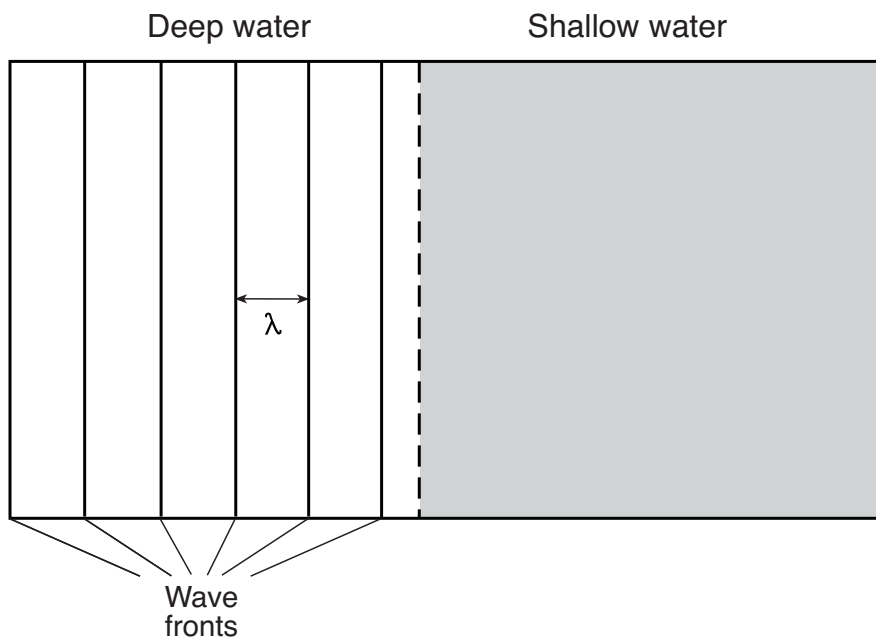
Identify the physical quantity represented by the slope of the graph. [1]

60–61 The heating element in an automobile window has a resistance of 1.2 ohms when operated at 12 volts. Calculate the power dissipated in the heating element. [Show all work, including the equation and substitution with units.] [2]

62–63 An electromagnetic wave of wavelength  $5.89 \times 10^{-7}$  meter traveling through air is incident on an interface with corn oil. Calculate the wavelength of the electromagnetic wave in corn oil. [Show all work, including the equation and substitution with units.] [2]

64 The energy required to separate the 3 protons and 4 neutrons in the nucleus of a lithium atom is 39.3 megaelectronvolts. Determine the mass equivalent of this energy, in universal mass units. [1]

65 A wave generator having a constant frequency produces parallel wave fronts in a tank of water of two different depths. The diagram below represents the wave fronts in the deep water.



As the wave travels from the deep water into the shallow water, the speed of the waves decreases. On the diagram *in your answer booklet*, use a straightedge to draw *at least three* lines to represent the wave fronts, with appropriate spacing, in the shallow water. [1]

---


### Part C

Answer all questions in this part.

Directions (66–85): Record your answers in the spaces provided in your answer booklet.

Base your answers to questions 66 through 69 on the information and diagram below.

A model airplane heads due east at 1.50 meters per second, while the wind blows due north at 0.70 meter per second. The scaled diagram below represents these vector quantities.



66 Using a ruler, determine the scale used in the vector diagram. [1]

67 On the diagram *in your answer booklet*, use a protractor and a ruler to construct a vector to represent the resultant velocity of the airplane. Label the vector *R*. [1]

68 Determine the magnitude of the resultant velocity. [1]

69 Determine the angle between north and the resultant velocity. [1]

---

Base your answers to questions 70 through 73 on the information below.

A vertically hung spring has a spring constant of 150. newtons per meter. A 2.00-kilogram mass is suspended from the spring and allowed to come to rest.

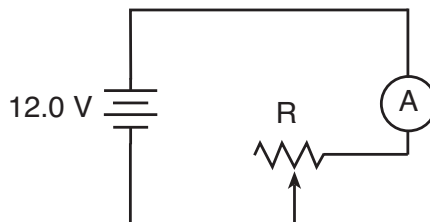
70–71 Calculate the elongation of the spring produced by the suspended 2.00-kilogram mass. [Show all work, including the equation and substitution with units.] [2]

72–73 Calculate the total elastic potential energy stored in the spring due to the suspended 2.00-kilogram mass. [Show all work, including the equation and substitution with units.] [2]

---

Base your answers to questions 74 through 76 on the information and diagram below.

A circuit contains a 12.0-volt battery, an ammeter, a variable resistor, and connecting wires of negligible resistance, as shown below.



The variable resistor is a nichrome wire, maintained at 20.°C. The length of the nichrome wire may be varied from 10.0 centimeters to 90.0 centimeters. The ammeter reads 2.00 amperes when the length of the wire is 10.0 centimeters.

74 Determine the resistance of the 10.0-centimeter length of nichrome wire. [1]

75–76 Calculate the cross-sectional area of the nichrome wire. [Show all work, including the equation and substitution with units.] [2]

Base your answers to questions 77 through 80 on the information below.

A photon with a wavelength of  $2.29 \times 10^{-7}$  meter strikes a mercury atom in the ground state.

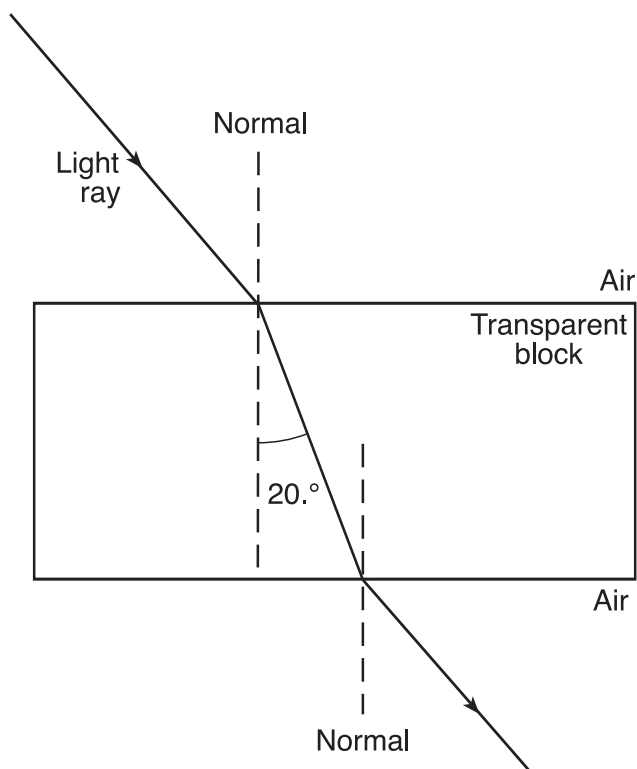
77–78 Calculate the energy, in joules, of this photon. [Show all work, including the equation and substitution with units.] [2]

79 Determine the energy, in electronvolts, of this photon. [1]

80 Based on your answer to question 79, state if this photon can be absorbed by the mercury atom. Explain your answer. [1]

Base your answers to questions 81 through 85 on the information below.

A ray of monochromatic light ( $f = 5.09 \times 10^{14}$  Hz) passes through air and a rectangular transparent block, as shown in the diagram below.



81 Using a protractor, determine the angle of incidence of the light ray as it enters the transparent block from air. [1]

82–83 Calculate the absolute index of refraction for the medium of the transparent block. [Show all work, including the equation and substitution with units.] [2]

84–85 Calculate the speed of the light ray in the transparent block. [Show all work, including the equation and substitution with units.] [2]

---





# PHYSICAL SETTING PHYSICS

Wednesday, June 15, 2011 — 1:15 to 4:15 p.m., only

## ANSWER BOOKLET

Student ..... Sex:  Male  
 Female  
 Teacher .....  
 School ..... Grade .....

Answer all questions in this examination. Record your answers in this booklet.

Part	Maximum Score	Student's Score
A	35	
B-1	15	
B-2	15	
C	20	
Total Written Test Score (Maximum Raw Score: 85)		<input type="text"/>
Final Score (from conversion chart)		<input type="text"/>
Raters' Initials:		
Rater 1 ..... Rater 2 .....		

### Part A

- |          |          |          |
|----------|----------|----------|
| 1 .....  | 13 ..... | 25 ..... |
| 2 .....  | 14 ..... | 26 ..... |
| 3 .....  | 15 ..... | 27 ..... |
| 4 .....  | 16 ..... | 28 ..... |
| 5 .....  | 17 ..... | 29 ..... |
| 6 .....  | 18 ..... | 30 ..... |
| 7 .....  | 19 ..... | 31 ..... |
| 8 .....  | 20 ..... | 32 ..... |
| 9 .....  | 21 ..... | 33 ..... |
| 10 ..... | 22 ..... | 34 ..... |
| 11 ..... | 23 ..... | 35 ..... |
| 12 ..... | 24 ..... |          |

Part A Score

### Part B-1

- |          |          |
|----------|----------|
| 36 ..... | 44 ..... |
| 37 ..... | 45 ..... |
| 38 ..... | 46 ..... |
| 39 ..... | 47 ..... |
| 40 ..... | 48 ..... |
| 41 ..... | 49 ..... |
| 42 ..... | 50 ..... |

Part B-1 Score

The declaration below must be signed when you have completed the examination.

I do hereby affirm, at the close of this examination, that I had no unlawful knowledge of the questions or answers prior to the examination and that I have neither given nor received assistance in answering any of the questions during the examination.

Signature

**Part B-2**

**For Raters  
Only**

**51-52**

**51**

**52**

**53** \_\_\_\_\_ **N**

**53**

**54-55**

**54**

**55**

**For Raters  
Only**

**56–57**

**56**

**57**

**58** \_\_\_\_\_  $\Omega$

**58**

**59** \_\_\_\_\_

**59**

**60–61**

**60**

**61**

**62–63**

**62**

**63**

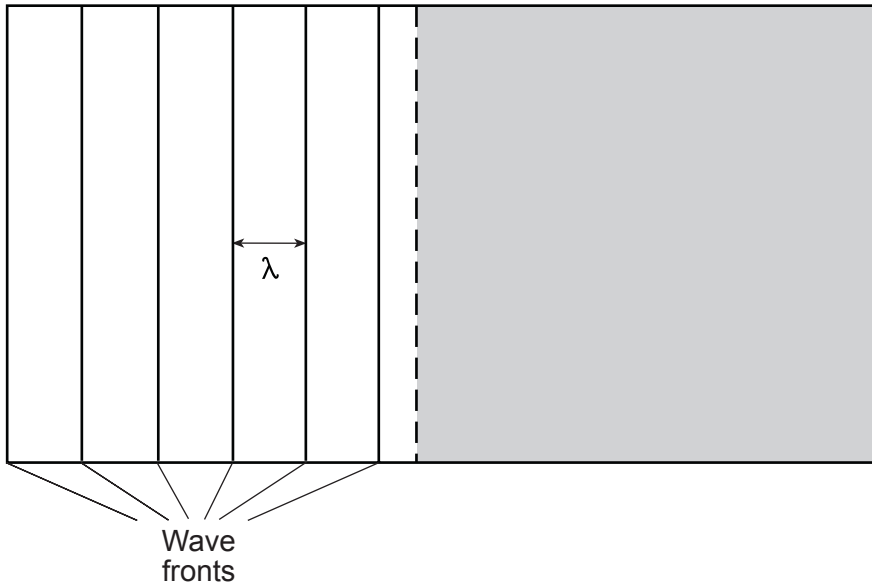
**64** \_\_\_\_\_ **u**

**64**

65

Deep water

Shallow water



For Raters Only

65

Total Score  
for Part B-2

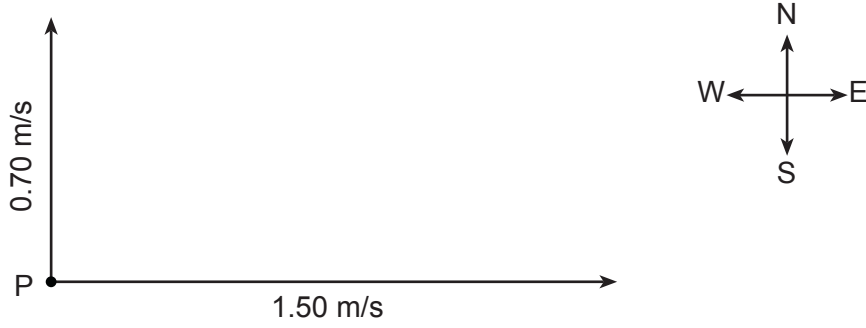
**Part C**

**For Raters Only**

66 1.0 cm = \_\_\_\_\_ m/s

66

67



67

68 \_\_\_\_\_ m/s

68

69 \_\_\_\_\_ °

69

**For Raters  
Only**

**70–71**

**70**

**71**

**72–73**

**72**

**73**

**74** \_\_\_\_\_ **Ω**

**74**

**75–76**

**75**

**76**

**For Raters  
Only**

77–78

77

78

79 \_\_\_\_\_ eV

79

80 \_\_\_\_\_  
\_\_\_\_\_

80

81 \_\_\_\_\_ °

81

82–83

82

83

84–85

84

85

**Total Score for  
Part C**





# FOR TEACHERS ONLY

The University of the State of New York  
REGENTS HIGH SCHOOL EXAMINATION

# PS-P

## PHYSICAL SETTING/PHYSICS

Wednesday, June 15, 2011 — 1:15 to 4:15 p.m., only

### SCORING KEY AND RATING GUIDE

**Directions to the Teacher:**

Refer to the directions on page 2 before rating student papers. Updated information regarding the rating of this examination may be posted on the New York State Education Department's web site during the rating period. Check this web site at: <http://www.p12.nysed.gov/apda/> and select the link "Scoring Information" for any recently posted information regarding this examination. This site should be checked before the rating process for this examination begins and several times throughout the Regents Examination period.

**Part A and Part B-1**

**Allow 1 credit for each correct response.**

Part A			Part B-1	
1 ..... <b>1</b> .....	13 ..... <b>2</b> .....	25 ..... <b>1</b> .....	36 ..... <b>2</b> .....	44 ..... <b>4</b> .....
2 ..... <b>2</b> .....	14 ..... <b>3</b> .....	26 ..... <b>4</b> .....	37 ..... <b>1</b> .....	45 ..... <b>1</b> .....
3 ..... <b>1</b> .....	15 ..... <b>2</b> .....	27 ..... <b>3</b> .....	38 ..... <b>3</b> .....	46 ..... <b>2</b> .....
4 ..... <b>4</b> .....	16 ..... <b>3</b> .....	28 ..... <b>2</b> .....	39 ..... <b>3</b> .....	47 ..... <b>4</b> .....
5 ..... <b>3</b> .....	17 ..... <b>1</b> .....	29 ..... <b>2</b> .....	40 ..... <b>3</b> .....	48 ..... <b>3</b> .....
6 ..... <b>1</b> .....	18 ..... <b>4</b> .....	30 ..... <b>1</b> .....	41 ..... <b>2</b> .....	49 ..... <b>3</b> .....
7 ..... <b>1</b> .....	19 ..... <b>2</b> .....	31 ..... <b>3</b> .....	42 ..... <b>2</b> .....	50 ..... <b>1</b> .....
8 ..... <b>4</b> .....	20 ..... <b>2</b> .....	32 ..... <b>2</b> .....	43 ..... <b>4</b> .....	
9 ..... <b>3</b> .....	21 ..... <b>1</b> .....	33 ..... <b>3</b> .....		
10 ..... <b>4</b> .....	22 ..... <b>3</b> .....	34 ..... <b>4</b> .....		
11 ..... <b>2</b> .....	23 ..... <b>3</b> .....	35 ..... <b>4</b> .....		
12 ..... <b>4</b> .....	24 ..... <b>1</b> .....			

## Directions to the Teacher

Follow the procedures below for scoring student answer papers for the Physical Setting/Physics examination. Additional information about scoring is provided in the publication *Information for Scoring Regents Examinations in the Sciences*.

Use only *red* ink or *red* pencil in rating Regents papers. Do not attempt to *correct* the student's work by making insertions or changes of any kind.

For Part A and Part B–1, indicate by means of a check mark each incorrect or omitted answer. In the box provided at the end of each part, record the number of questions the student answered correctly for that part.

At least two science teachers must participate in the scoring of each student's responses to the Part B–2 and Part C open-ended questions. Each of these teachers should be responsible for scoring a selected number of the open-ended questions on each answer paper. No one teacher is to score more than approximately one-half of the open-ended questions on a student's answer paper.

Students' responses must be scored strictly according to the Scoring Key and Rating Guide. For open-ended questions, credit may be allowed for responses other than those given in the rating guide if the response is a scientifically accurate answer to the question and demonstrates adequate knowledge as indicated by the examples in the rating guide.

Fractional credit is *not* allowed. Only whole-number credit may be given to a response. Units need not be given when the wording of the questions allows such omissions.

Raters should enter the scores earned for Part A, Part B–1, Part B–2, and Part C on the appropriate lines in the box printed on the answer booklet, and then should add these four scores and enter the total in the box labeled "Total Written Test Score." Then, the student's raw score on the written test should be converted to a scale score by using the conversion chart that will be posted on the Department's web site at: <http://www.p12.nysed.gov/apda/> on Wednesday, June 15, 2011. The student's scale score should be entered in the labeled box on the student's answer booklet. The scale score is the student's final examination score. On the front of the student's answer booklet, raters must enter their initials on the lines next to "Rater 1" or "Rater 2."

**Beginning in June 2011, schools are no longer permitted to rescore any of the open-ended questions on this exam after each question has been rated once, regardless of the final exam score. Schools must, however, ensure that the scores have been tabulated correctly and that the resulting scale score has been determined accurately.**

Because scale scores corresponding to raw scores in the conversion chart may change from one examination to another, it is crucial that for each administration, the conversion chart provided for that administration be used to determine the student's final score.

Teachers should become familiar with the Department publication *Regents Examination in Physical Setting/Physics: Rating Guide for Parts B–2 and C*. This publication can be found on the New York State Education Department web site <http://www.p12.nysed.gov/apda/science/phyratg02.pdf>. This guide provides a set of directions, along with some examples, to assist teachers in rating parts B–2 and C of the Regents Examination in Physical Setting/Physics.

### Scoring Criteria for Calculations

For each question requiring the student to *show all calculations, including the equation and substitution with units*, apply the following scoring criteria:

- Allow 1 credit for the equation and substitution of values with units. If the equation and/or substitution with units is not shown, do *not* allow this credit. Allow credit if the student has listed the values with units and written a correct equation.
- Allow 1 credit for the correct answer (number and unit). If the number is given without the unit, allow credit if the credit for units was previously deducted for this calculation problem.
- Penalize a student only once per calculation problem for incorrect or omitted units.
- Allow credit if the answer is not expressed with the correct number of significant figures

---

### Part B–2

- 51 [1] Allow 1 credit for the equation and substitution with units. Refer to *Scoring Criteria for Calculations* in this rating guide.

**Example of a 1-credit response:**

$$a = \frac{F_{net}}{m}$$

$$F_{net} = ma$$

$$F_{net} = (0.50 \text{ kg})(3.0 \text{ m/s}^2)$$

- 52 [1] Allow 1 credit for the correct answer with units *or* for an answer that is consistent with the student's response to question 51.

**Example of a 1-credit response:**

$$F_{net} = 1.5 \text{ N}$$

53 [1] Allow 1 credit for 850 N.

54 [1] Allow 1 credit for the equation and substitution with units *or* for an answer that is consistent with the student's response to question 53. Refer to *Scoring Criteria for Calculations* in this rating guide.

**Example of a 1-credit response:**

$$F_f = \mu F_N$$

$$F_f = (0.05)(850 \text{ N})$$

55 [1] Allow 1 credit for the correct answer with units *or* for an answer that is consistent with the student's response to question 54.

**Example of a 1-credit response:**

$$F_f = 40 \text{ N}$$

56 [1] Allow 1 credit for the equation and substitution with units. Refer to *Scoring Criteria for Calculations* in this rating guide.

**Example of a 1-credit response:**

$$KE = \frac{1}{2}mv^2$$

$$KE = \frac{1}{2}(3.34 \times 10^{-27} \text{ kg})(2.89 \times 10^5 \text{ m/s})^2$$

57 [1] Allow 1 credit for the correct answer with units *or* for an answer that is consistent with the student's response to question 56.

**Example of a 1-credit response:**

$$KE = 1.39 \times 10^{-16} \text{ J}$$

58 [1] Allow 1 credit for 20.  $\Omega$ .

59 [1] Allow 1 credit. Acceptable responses include, but are not limited to:

— power

— the rate at which work is done

**Note:** Do *not* allow credit for a linear relationship.

- 60 [1] Allow 1 credit for the equation and substitution with units. Refer to *Scoring Criteria for Calculations* in this rating guide.

**Example of a 1-credit response:**

$$P = \frac{V^2}{R}$$
$$P = \frac{(12\text{ V})^2}{1.2\ \Omega}$$

- 61 [1] Allow 1 credit for the correct answer with units *or* for an answer that is consistent with the student's response to question 60.

**Example of a 1-credit response:**

$$P = 120\text{ W}$$

- 62 [1] Allow 1 credit for the equation and substitution with units. Refer to *Scoring Criteria for Calculations* in this rating guide.

**Example of a 1-credit response:**

$$\frac{n_2}{n_1} = \frac{\lambda_1}{\lambda_2}$$
$$\lambda_2 = \frac{n_1 \lambda_1}{n_2}$$
$$\lambda_2 = \frac{1.00(5.89 \times 10^{-7}\text{ m})}{1.47}$$

- 63 [1] Allow 1 credit for the correct answer with units *or* for an answer that is consistent with the student's response to question 62.

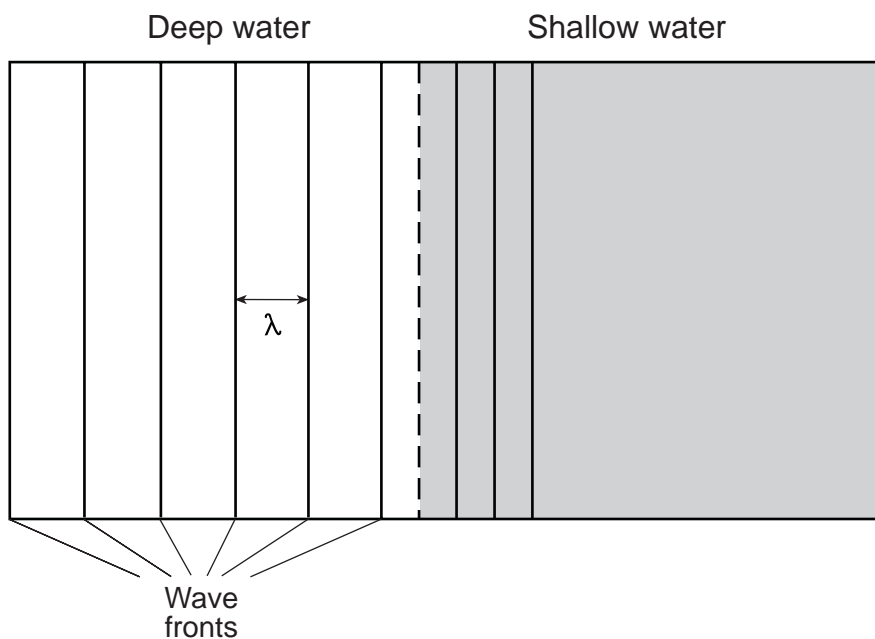
**Example of a 1-credit response:**

$$\lambda_2 = 4.01 \times 10^{-7}\text{ m}$$

- 64 [1] Allow 1 credit for  $4.22 \times 10^{-2}\text{ u}$ .

- 65 [1] Allow 1 credit for a minimum of *three* wave fronts, approximately evenly spaced, drawn parallel to each other and to the original wave fronts, *and* spaced closer together than the original wave fronts.

**Example of a 1-credit response:**

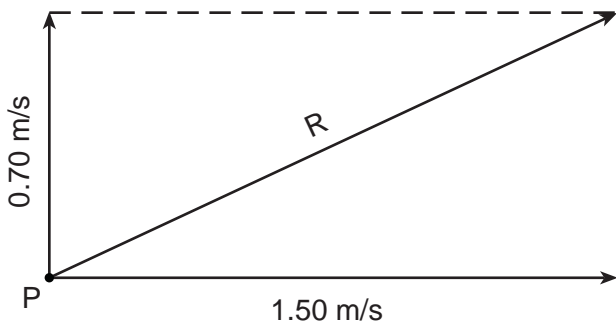


### Part C

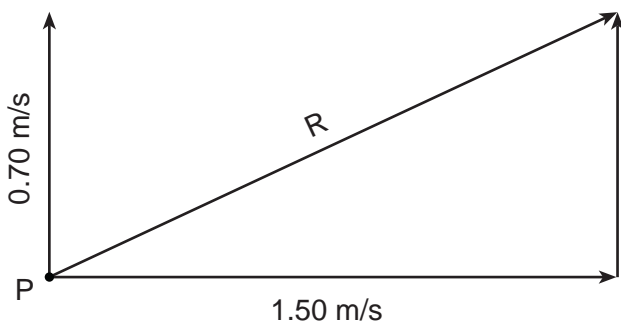
66 [1] Allow 1 credit for  $1.0 \text{ cm} = 0.20 \text{ m/s} \pm 0.04 \text{ m/s}$ .

67 [1] Allow 1 credit for constructing the resultant  $8.3 \text{ cm} \pm 0.2 \text{ cm}$  long at an angle of  $65^\circ \pm 2^\circ$  east of north.

#### Examples of 1-credit responses:



or



**Note:** The resultant vector need *not* be labeled to receive this credit.

68 [1] Allow 1 credit for  $1.7 \text{ m/s}$  or an answer that is consistent with the student's response to questions 66 and 67.

69 [1] Allow 1 credit for  $65^\circ \pm 2^\circ$  or an answer that is consistent with the student's response to questions 67 and/or 68.

- 70 [1] Allow 1 credit for the equation and substitution with units. Refer to *Scoring Criteria for Calculations* in this rating guide.

**Example of a 1-credit response:**

$$F_s = kx$$
$$x = \frac{F_s}{k} = \frac{mg}{k}$$
$$x = \frac{(2.00 \text{ kg})(9.81 \text{ m/s}^2)}{150. \text{ N/m}}$$

- 71 [1] Allow 1 credit for the correct answer with units *or* for an answer that is consistent with the student's response to question 70.

**Example of a 1-credit response:**

$$x = 0.131 \text{ m}$$

- 72 [1] Allow 1 credit for the equation and substitution with units, *or* for an answer that is consistent with the student's response to question 71. Refer to *Scoring Criteria for Calculations* in this rating guide.

$$PE_s = \frac{1}{2} kx^2$$
$$PE_s = \frac{1}{2} (150. \text{ N/m})(0.131 \text{ m})^2$$

- 73 [1] Allow 1 credit for the correct answer with units *or* for an answer that is consistent with the student's response to question 72.

**Example of a 1-credit response:**

$$PE_s = 1.29 \text{ J}$$



74 [1] Allow 1 credit for 6.00  $\Omega$ .

75 [1] Allow 1 credit for the equation and substitution with units, *or* for an answer that is consistent with the student's response to question 74. Refer to *Scoring Criteria for Calculations* in this rating guide.

**Example of a 1-credit response:**

$$R = \frac{\rho L}{A}$$

$$A = \frac{\rho L}{R}$$

$$A = \frac{(150. \times 10^{-8} \Omega \cdot \text{m})(0.100 \text{ m})}{6.00 \Omega}$$

76 [1] Allow 1 credit for the correct answer with units *or* for an answer that is consistent with the student's response to question 75.

**Example of a 1-credit response:**

$$A = 2.50 \times 10^{-8} \text{ m}^2$$

77 [1] Allow 1 credit for equation and substitution with units. Refer to *Scoring Criteria for Calculations* in this rating guide.

**Example of a 1-credit response:**

$$E_{\text{photon}} = \frac{hc}{\lambda}$$

$$E_{\text{photon}} = \frac{(6.63 \times 10^{-34} \text{ J}\cdot\text{s})(3.00 \times 10^8 \text{ m/s})}{2.29 \times 10^{-7} \text{ m}}$$

78 [1] Allow 1 credit for the correct answer with units *or* for an answer that is consistent with the student's response to question 77.

**Example of a 1-credit response:**

$$E_{\text{photon}} = 8.69 \times 10^{-19} \text{ J}$$

79 [1] Allow 1 credit for 5.43 eV *or* an answer that is consistent with the student's response to question 78.

80 [1] Allow 1 credit for indicating that the photon can be absorbed and explaining that the energy of the photon is exactly equal to the energy-level difference between the ground state and level *d*.

**Note:** Allow credit for an answer that is consistent with the student's response to question 79.

81 [1] Allow 1 credit for  $41^\circ \pm 2^\circ$ .

82 [1] Allow 1 credit for equation and substitution with units, *or* for an answer that is consistent with the student's response to question 81. Refer to *Scoring Criteria for Calculations* in this rating guide.

**Example of a 1-credit response:**

$$\begin{aligned}n_1 \sin \theta_1 &= n_2 \sin \theta_2 \\n_2 &= \frac{n_1 \sin \theta_1}{\sin \theta_2} \\n_2 &= \frac{(1.00)(\sin 41^\circ)}{\sin 20^\circ}\end{aligned}$$

83 [1] Allow 1 credit for the correct answer with units *or* for an answer that is consistent with the student's response to question 82.

**Example of a 1-credit response:**

$$n_2 = 1.9$$

84 [1] Allow 1 credit for equation and substitution with units, *or* for an answer that is consistent with the student's response to question 82 and/or 83. Refer to *Scoring Criteria for Calculations* in this rating guide.

**Example of a 1-credit response:**

$$\begin{aligned}n &= \frac{c}{v} & \frac{n_2}{n_1} &= \frac{v_1}{v_2} \\v &= \frac{c}{n} & v_2 &= \frac{n_1 v_1}{n_2} \\v &= \frac{3.00 \times 10^8 \text{ m/s}}{1.9} & v_2 &= \frac{(1.00)(3.00 \times 10^8 \text{ m/s})}{1.9}\end{aligned}$$

85 [1] Allow 1 credit for the correct answer with units *or* for an answer that is consistent with the student's response to question 84.

**Example of a 1-credit response:**

$$v = 1.6 \times 10^8 \text{ m/s}$$

## Regents Examination in Physical Setting/Physics

June 2011

### Chart for Converting Total Test Raw Scores to Final Examination Scores (Scale Scores)

**The *Chart for Determining the Final Examination Score for the June 2011 Regents Examination in Physical Setting/Physics* will be posted on the Department's web site at: <http://www.p12.nysed.gov/apda/> on Wednesday, June 15, 2011. Conversion charts provided for previous administrations of the Regents Examination in Physical Setting/Physics must NOT be used to determine students' final scores for this administration.**

### Online Submission of Teacher Evaluations of the Test to the Department

Suggestions and feedback from teachers provide an important contribution to the test development process. The Department provides an online evaluation form for State assessments. It contains spaces for teachers to respond to several specific questions and to make suggestions. Instructions for completing the evaluation form are as follows:

1. Go to <http://www.forms2.nysed.gov/emsc/osa/exameval/reexameval.htm>.
2. Select the test title.
3. Complete the required demographic fields.
4. Complete each evaluation question and provide comments in the space provided.
5. Click the SUBMIT button at the bottom of the page to submit the completed form.

## Map to Core Curriculum

<b>June 2011 Physical Setting/Physics</b>			
<b>Question Numbers</b>			
Key Ideas	Part A	Part B	Part C
<b>Standard 1</b>			
Math Key Idea 1	2, 3, 5, 9, 10, 12, 19, 20, 23, 27, 29, 30	37, 38, 39, 44, 50, 51, 52, 54, 55, 56, 57, 58, 60, 61, 62, 63, 64	66, 67, 68, 69, 70, 71, 72, 73, 74, 75, 76, 77, 78, 79, 82, 83, 84, 85
Math Key Idea 2	7, 14, 21	40, 41, 42, 43, 50	
Math Key Idea 3		26, 28, 37, 59	
Sci. Inq. Key Idea 1		49	
Sci. Inq. Key Idea 2			
Sci. Inq. Key Idea 3		47	81
Eng. Des. Key Idea 1			
<b>Standard 2</b>			
Key Idea 1			
Key Idea 2			
<b>Standard 6</b>			
Key Idea 1			
Key Idea 2			
Key Idea 3		36	
Key Idea 4		53	
Key Idea 5		65	
Key Idea 6			
<b>Standard 7</b>			
Key Idea 1			
Key Idea 2			
<b>Standard 4 Process Skills</b>			
4.1		45, 58	72, 73, 74
4.3		46, 48, 50	82, 83
5.1	12	37, 39, 53	67, 68, 69
5.3			80
<b>Standard 4</b>			
4.1	9, 10, 14, 19, 20, 21, 22, 23, 24	42, 44, 45, 56, 57, 58, 59, 60, 61	72, 73, 74, 75, 76, 77, 78, 79
4.3	16, 25, 26, 27, 28, 29, 31, 32, 33	46, 47, 48, 50, 62, 63, 65	81, 82, 83, 84, 85
5.1	1, 2, 3, 4, 5, 6, 7, 8, 11, 12, 13, 15, 17, 18	37, 38, 39, 40, 41, 43, 51, 52, 53, 54, 55	66, 67, 68, 69, 70, 71
5.3	30, 34, 35	49, 64	80

## Regents Examination in Physical Setting/Physics June 2011

Chart for Converting Total Test Raw Scores to  
Final Examination Scores (Scale Scores)

Raw Score	Scale Score	Raw Score	Scale Score	Raw Score	Scale Score	Raw Score	Scale Score
85	100	63	81	41	58	19	30
84	99	62	80	40	56	18	28
83	98	61	79	39	55	17	27
82	98	60	78	38	54	16	26
81	97	59	77	37	53	15	24
80	96	58	76	36	52	14	23
79	95	57	75	35	51	13	21
78	94	56	74	34	49	12	20
77	93	55	73	33	48	11	18
76	93	54	72	32	47	10	17
75	92	53	71	31	46	9	15
74	91	52	70	30	44	8	14
73	90	51	69	29	43	7	12
72	89	50	67	28	42	6	10
71	88	49	66	27	41	5	9
70	87	48	65	26	39	4	7
69	86	47	64	25	38	3	5
68	85	46	63	24	37	2	4
67	84	45	62	23	35	1	2
66	83	44	61	22	34	0	0
65	83	43	60	21	33		
64	82	42	59	20	31		

To determine the student's final examination score, find the student's total test raw score in the column labeled "Raw Score" and then locate the scale score that corresponds to that raw score. The scale score is the student's final examination score. Enter this score in the space labeled "Final Score" on the student's answer sheet.

**Beginning in June 2011, schools are no longer permitted to rescore any of the open-ended questions on this exam after each question has been rated once, regardless of the final exam score. Schools are required to ensure that the raw scores have been added correctly and that the resulting scale score has been determined accurately.**

Because scale scores corresponding to raw scores in the conversion chart change from one administration to another, it is crucial that for each administration, the conversion chart provided for that administration be used to determine the student's final score. The chart above is usable only for this administration of the Regents Examination in Physical Setting/Physics.